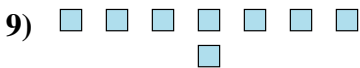
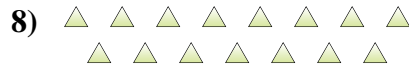
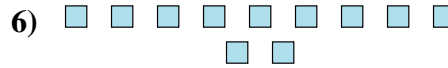
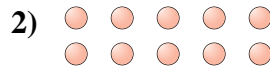





Déterminez si le nombre de figures dans chaque boîte est pair ou impair.

**Réponses**



- 1. \_\_\_\_\_
- 2. \_\_\_\_\_
- 3. \_\_\_\_\_
- 4. \_\_\_\_\_
- 5. \_\_\_\_\_
- 6. \_\_\_\_\_
- 7. \_\_\_\_\_
- 8. \_\_\_\_\_
- 9. \_\_\_\_\_
- 10. \_\_\_\_\_



Déterminez si le nombre de figures dans chaque boîte est pair ou impair.

1) 18

2) 10

3) 6

4) 13

5) 6

6) 11

7) 12

8) 15

9) 8

10) 16

**Réponses**

1. pair

2. pair

3. pair

4. impair

5. pair

6. impair

7. pair

8. impair

9. pair

10. pair