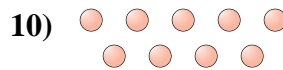
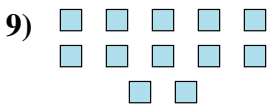

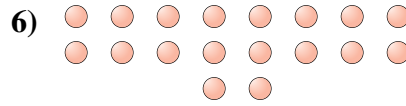

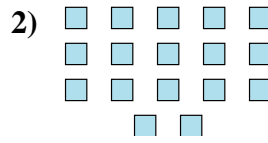
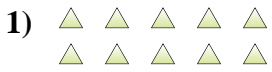




Déterminez si le nombre de figures dans chaque boîte est pair ou impair.

Réponses



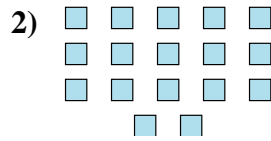
- 1. _____
- 2. _____
- 3. _____
- 4. _____
- 5. _____
- 6. _____
- 7. _____
- 8. _____
- 9. _____
- 10. _____



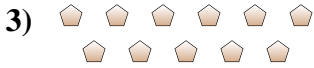
Déterminez si le nombre de figures dans chaque boîte est pair ou impair.




10



17



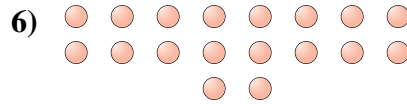
11



19



14



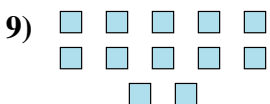
18



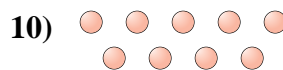
18



8



12



9

Réponses

1. pair

2. impair

3. impair

4. impair

5. pair

6. pair

7. pair

8. pair

9. pair

10. impair