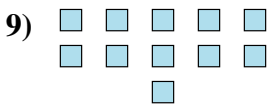
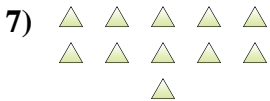
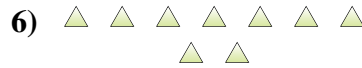
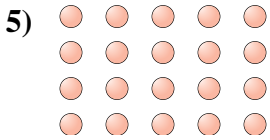
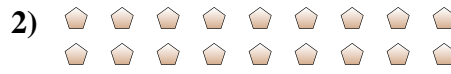




Déterminez si le nombre de figures dans chaque boîte est pair ou impair.

Réponses



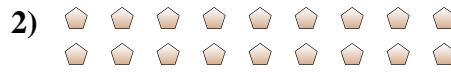
- 1. _____
- 2. _____
- 3. _____
- 4. _____
- 5. _____
- 6. _____
- 7. _____
- 8. _____
- 9. _____
- 10. _____



Déterminez si le nombre de figures dans chaque boîte est pair ou impair.



7



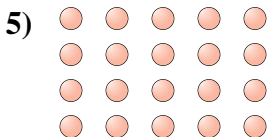
18



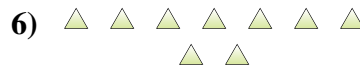
6



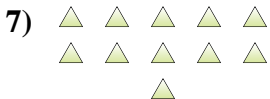
7



20



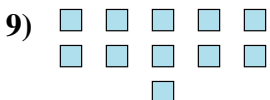
9



11



5



11



6

Réponses

1. impair

2. pair

3. pair

4. impair

5. pair

6. impair

7. impair

8. impair

9. impair

10. pair