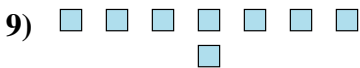
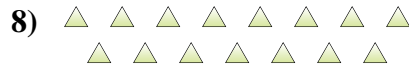
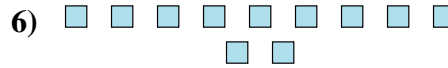
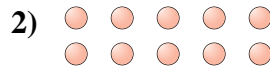





Déterminez si le nombre de figures dans chaque boîte est pair ou impair.


Réponses

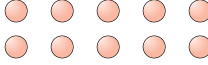



- 1. _____
- 2. _____
- 3. _____
- 4. _____
- 5. _____
- 6. _____
- 7. _____
- 8. _____
- 9. _____
- 10. _____



Déterminez si le nombre de figures dans chaque boîte est pair ou impair.

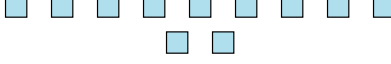
1) 
18

2) 
10


3) 
6

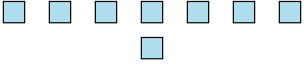
4) 
13


5) 
6

6) 
11

7) 
12

8) 
15

9) 
8

10) 
16

Réponses

1. pair

2. pair

3. pair

4. impair

5. pair

6. impair

7. pair

8. impair

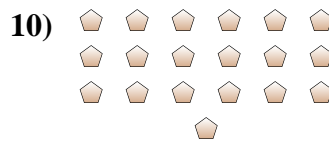
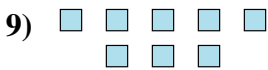
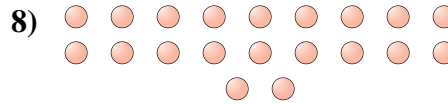
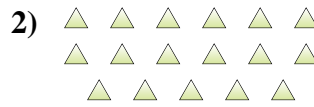
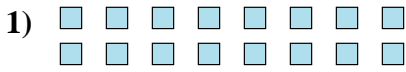
9. pair

10. pair



Déterminez si le nombre de figures dans chaque boîte est pair ou impair.

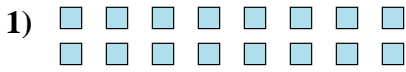
Réponses



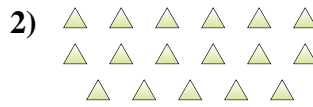
1. _____
2. _____
3. _____
4. _____
5. _____
6. _____
7. _____
8. _____
9. _____
10. _____



Déterminez si le nombre de figures dans chaque boîte est pair ou impair.



16



17



5



6



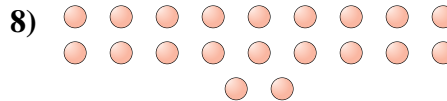
13



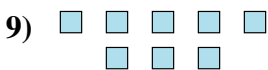
15



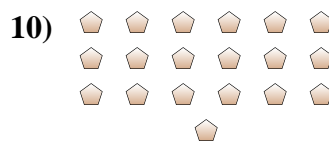
8



20



8



19

Réponses

1. pair

2. impair

3. impair

4. pair

5. impair

6. impair

7. pair

8. pair


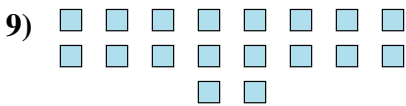
9. pair

10. impair



Déterminez si le nombre de figures dans chaque boîte est pair ou impair.

Réponses



- 1. _____
- 2. _____
- 3. _____
- 4. _____
- 5. _____
- 6. _____
- 7. _____
- 8. _____
- 9. _____
- 10. _____



Déterminez si le nombre de figures dans chaque boîte est pair ou impair.



5



12



6



8



5



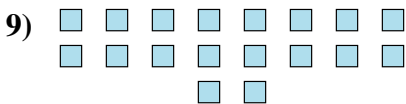
5




5



9



18



17

Réponses

1. impair

2. pair

3. pair

4. pair

5. impair

6. impair

7. impair

8. impair

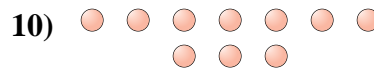
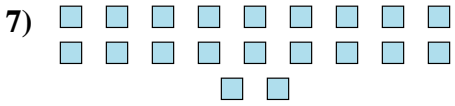
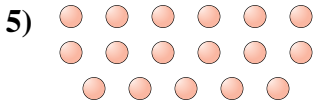
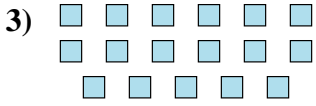
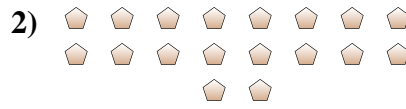
9. pair

10. impair



Déterminez si le nombre de figures dans chaque boîte est pair ou impair.

Réponses



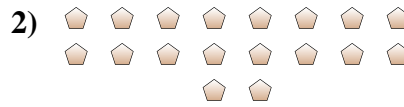
1. _____
2. _____
3. _____
4. _____
5. _____
6. _____
7. _____
8. _____
9. _____
10. _____



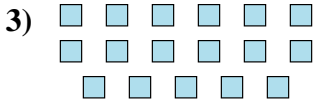
Déterminez si le nombre de figures dans chaque boîte est pair ou impair.



19



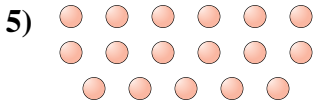
18



17



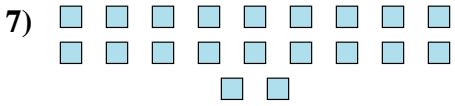
15



17



13



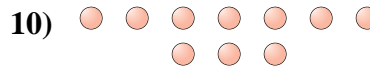
20



7



6



10

Réponses

1. impair

2. pair

3. impair

4. impair

5. impair

6. impair

7. pair

8. impair

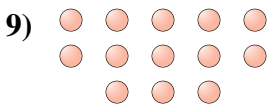

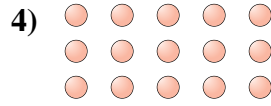
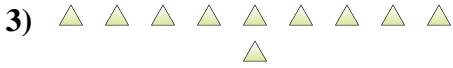
9. pair

10. pair



Déterminez si le nombre de figures dans chaque boîte est pair ou impair.

Réponses



- 1. _____
- 2. _____
- 3. _____
- 4. _____
- 5. _____
- 6. _____
- 7. _____
- 8. _____
- 9. _____
- 10. _____



Déterminez si le nombre de figures dans chaque boîte est pair ou impair.



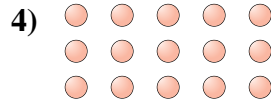
6




14



10



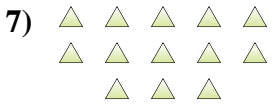
15



17



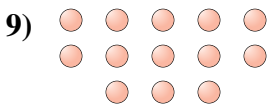
7



13



10



13



8

Réponses

1. pair

2. pair

3. pair

4. impair

5. impair

6. impair

7. impair

8. pair

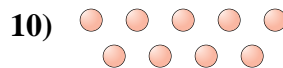
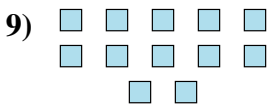

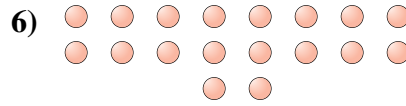

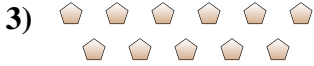
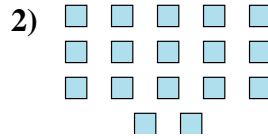
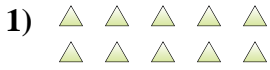
9. impair

10. pair



Déterminez si le nombre de figures dans chaque boîte est pair ou impair.

Réponses



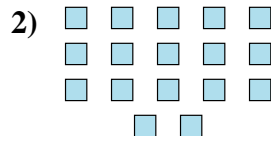
- 1. _____
- 2. _____
- 3. _____
- 4. _____
- 5. _____
- 6. _____
- 7. _____
- 8. _____
- 9. _____
- 10. _____



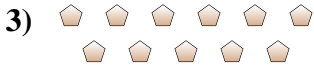
Déterminez si le nombre de figures dans chaque boîte est pair ou impair.




10



17



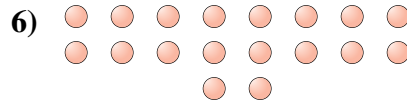
11




19



14



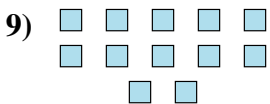
18



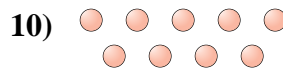
18



8



12



9

Réponses

1. pair

2. impair

3. impair

4. impair

5. pair

6. pair

7. pair

8. pair

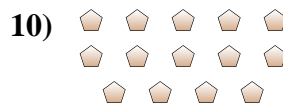
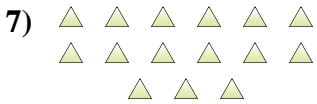
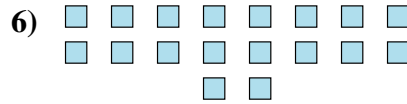
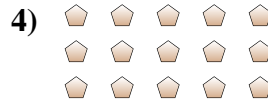

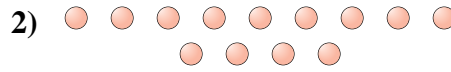
9. pair

10. impair



Déterminez si le nombre de figures dans chaque boîte est pair ou impair.

Réponses



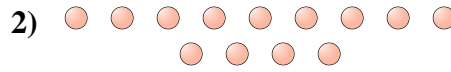
- 1. _____
- 2. _____
- 3. _____
- 4. _____
- 5. _____
- 6. _____
- 7. _____
- 8. _____
- 9. _____
- 10. _____




Déterminez si le nombre de figures dans chaque boîte est pair ou impair.



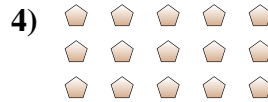
9



13



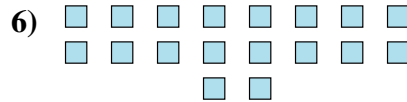
19



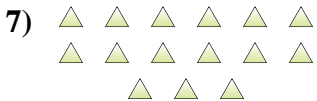
15



17




18



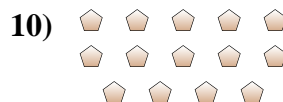
15



5



10



14

Réponses

1. impair

2. impair

3. impair

4. impair

5. impair

6. pair

7. impair

8. impair

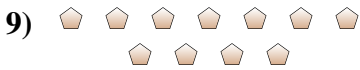
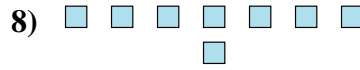
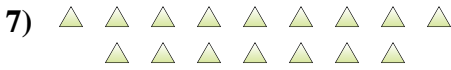
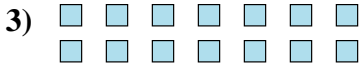
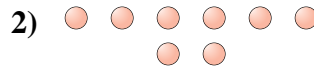
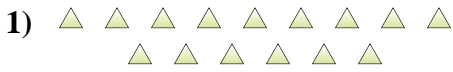
9. pair

10. pair



Déterminez si le nombre de figures dans chaque boîte est pair ou impair.

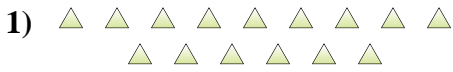
Réponses



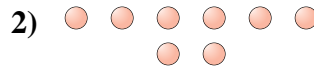
- 1. _____
- 2. _____
- 3. _____
- 4. _____
- 5. _____
- 6. _____
- 7. _____
- 8. _____
- 9. _____
- 10. _____



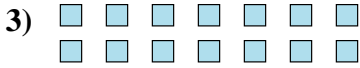
Déterminez si le nombre de figures dans chaque boîte est pair ou impair.



15



8



14



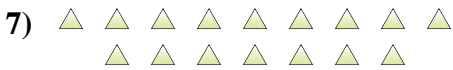
10



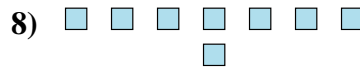
12



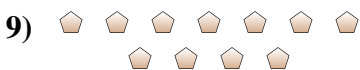
8



16



8



11



7

Réponses

1. impair

2. pair

3. pair

4. pair

5. pair

6. pair

7. pair

8. pair

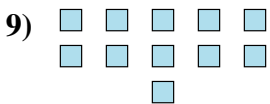
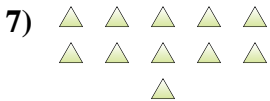
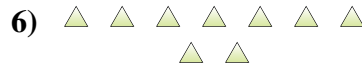
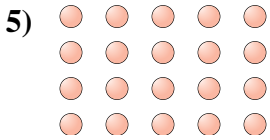
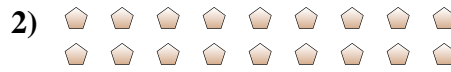
9. impair

10. impair



Déterminez si le nombre de figures dans chaque boîte est pair ou impair.

Réponses



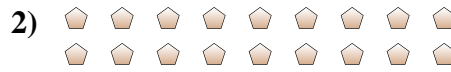
- 1. _____
- 2. _____
- 3. _____
- 4. _____
- 5. _____
- 6. _____
- 7. _____
- 8. _____
- 9. _____
- 10. _____



Déterminez si le nombre de figures dans chaque boîte est pair ou impair.



7



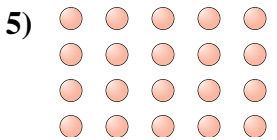
18



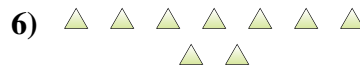
6



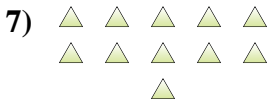
7



20



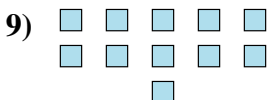
9



11



5



11



6

Réponses

1. impair

2. pair

3. pair

4. impair

5. pair

6. impair

7. impair

8. impair

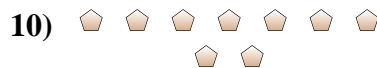
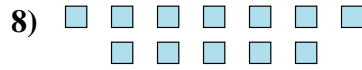
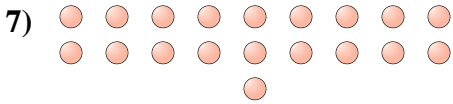
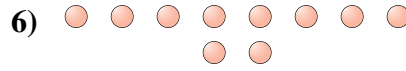

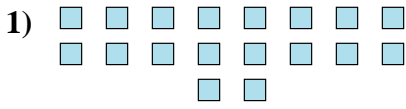
9. impair

10. pair



Déterminez si le nombre de figures dans chaque boîte est pair ou impair.

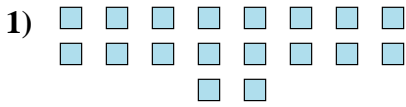
Réponses




- 1. _____
- 2. _____
- 3. _____
- 4. _____
- 5. _____
- 6. _____
- 7. _____
- 8. _____
- 9. _____
- 10. _____



Déterminez si le nombre de figures dans chaque boîte est pair ou impair.



18



20



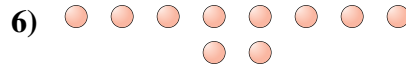
14



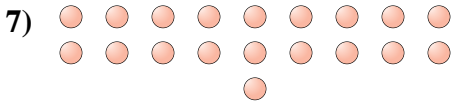
10



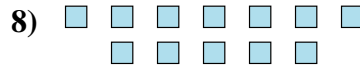
12



10



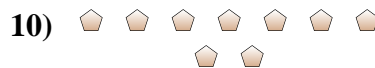
19



12



7



9

Réponses

1. pair

2. pair

3. pair

4. pair

5. pair

6. pair

7. impair

8. pair

9. impair

10. impair