

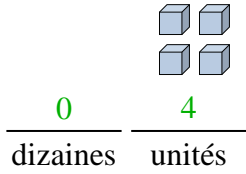




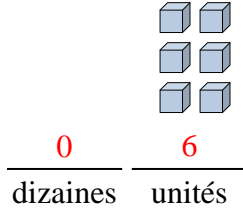
Remplir les blancs pour trouver les montants.

**Réponses**

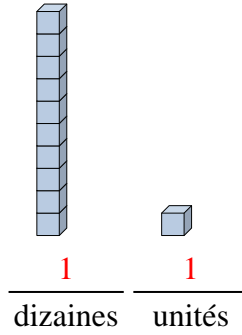
Ex)



1)



2)



Ex. 4

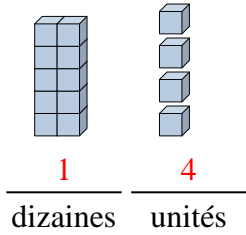
1. 6

2. 11

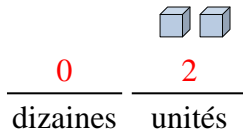
3. 14

4. 2

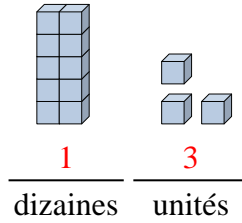
3)



4)



5)



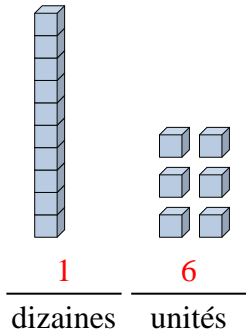
5. 13

6. 16

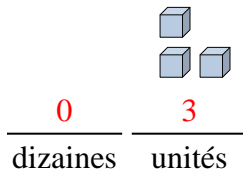
7. 3

8. 17

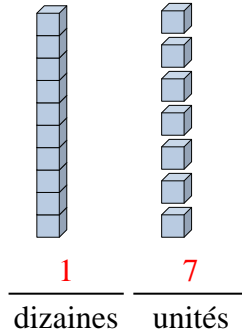
6)



7)



8)

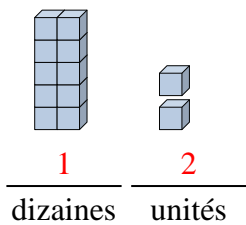


9. 12

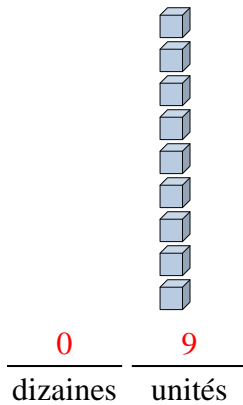
10. 9

11. 8

9)



10)



11)

