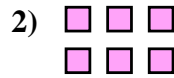
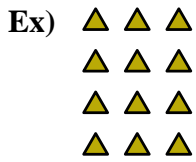




Écrivez chaque tableau sous la forme d'un problème d'addition et résolvez-le.

**Réponses**



Ex. 3+3+3+3=12

1. \_\_\_\_\_

2. \_\_\_\_\_

3. \_\_\_\_\_

4. \_\_\_\_\_

5. \_\_\_\_\_

6. \_\_\_\_\_

7. \_\_\_\_\_

8. \_\_\_\_\_

9. \_\_\_\_\_

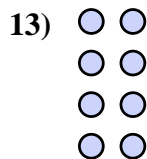
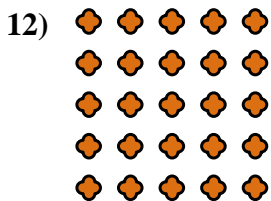
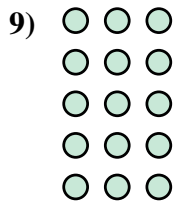
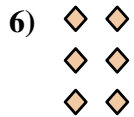

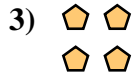
10. \_\_\_\_\_

11. \_\_\_\_\_

12. \_\_\_\_\_

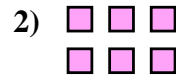
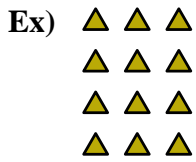
13. \_\_\_\_\_

14. \_\_\_\_\_





Écrivez chaque tableau sous la forme d'un problème d'addition et résolvez-le.

**Réponses**

Ex.  $3+3+3+3=12$

1.  $3+3+3=9$

2.  $3+3=6$

3.  $2+2=4$

4.  $4+4+4+4+4=20$

5.  $5+5=10$

6.  $2+2+2=6$

7.  $2+2+2+2+2=10$

8.  $4+4+4+4=16$

9.  $3+3+3+3+3=15$

10.  $5+5+5+5=20$

11.  $4+4=8$

12.  $5+5+5+5+5=25$

13.  $2+2+2+2=8$

14.  $5+5+5=15$

