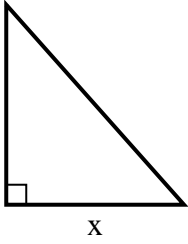


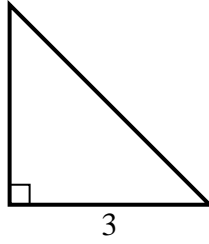


Trouvez la valeur de x.

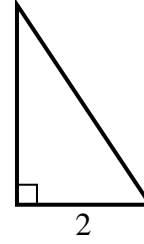
1) area = $36 u^2$



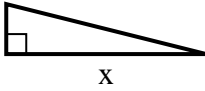
2) area = $4.5 u^2$



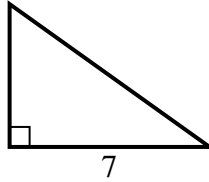
3) area = $3 u^2$



4) area = $8 u^2$



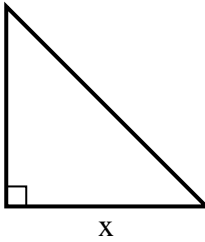
5) area = $17.5 u^2$



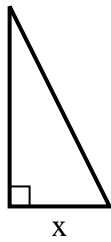
6) area = $12 u^2$



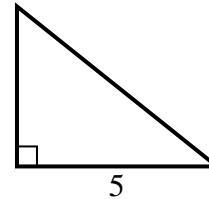
7) area = $32 u^2$



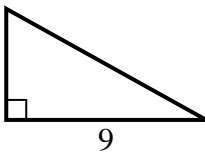
8) area = $4 u^2$



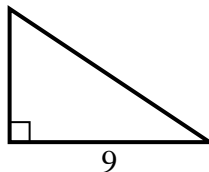
9) area = $10 u^2$



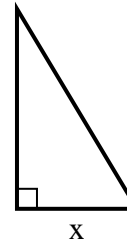
10) area = $22.5 u^2$



11) area = $27 u^2$



12) area = $7.5 u^2$



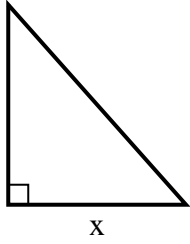
Réponses

1. _____
2. _____
3. _____
4. _____
5. _____
6. _____
7. _____
8. _____
9. _____
10. _____
11. _____
12. _____

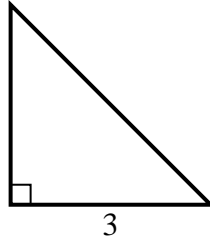


Trouvez la valeur de x.

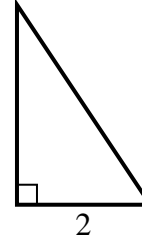
1) area = 36 u^2



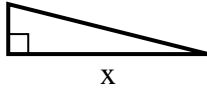
2) area = 4.5 u^2



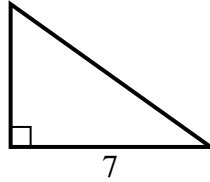
3) area = 3 u^2



4) area = 8 u^2



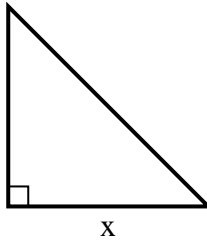
5) area = 17.5 u^2



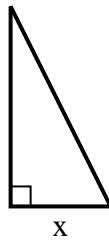
6) area = 12 u^2



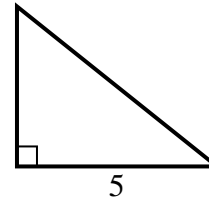
7) area = 32 u^2



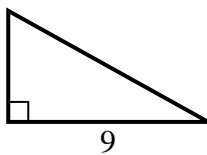
8) area = 4 u^2



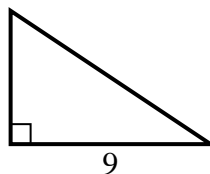
9) area = 10 u^2



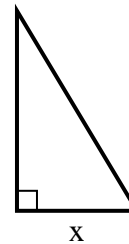
10) area = 22.5 u^2



11) area = 27 u^2



12) area = 7.5 u^2



Réponses

1. 8

2. 3

3. 3

4. 8

5. 5

6. 8

7. 8

8. 2

9. 4

10. 5

11. 6

12. 3