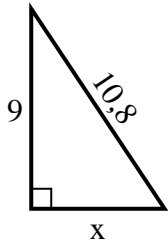


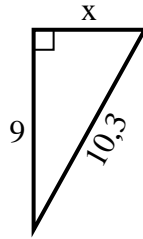


Trouvez la valeur de x.

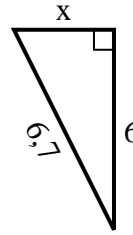
1) Périmètre = 25,8 u



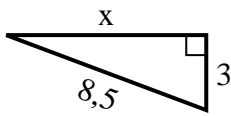
2) Périmètre = 24,3 u



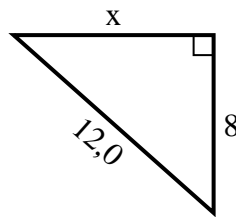
3) Périmètre = 15,7 u



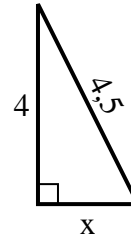
4) Périmètre = 19,5 u



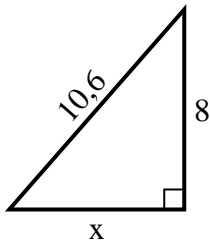
5) Périmètre = 29 u



6) Périmètre = 10,5 u



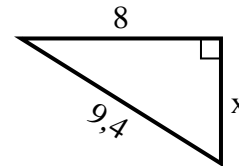
7) Périmètre = 25,6 u



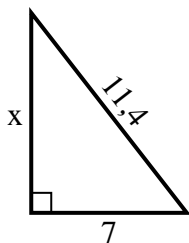
8) Périmètre = 14,3 u



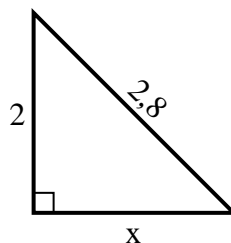
9) Périmètre = 22,4 u



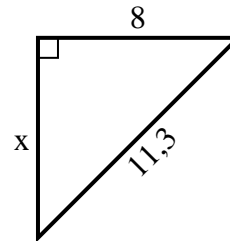
10) Périmètre = 27,4 u



11) Périmètre = 6,8 u



12) Périmètre = 27,3 u



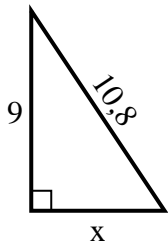
Réponses

1. _____
2. _____
3. _____
4. _____
5. _____
6. _____
7. _____
8. _____
9. _____
10. _____
11. _____
12. _____

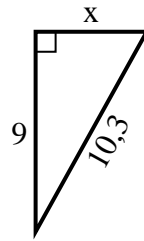


Trouvez la valeur de x.

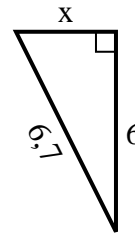
1) Périmètre = 25,8 u



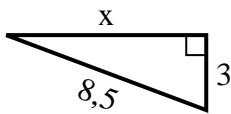
2) Périmètre = 24,3 u



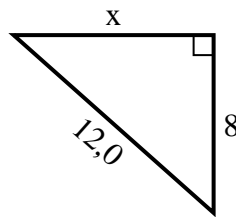
3) Périmètre = 15,7 u



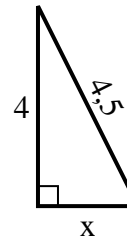
4) Périmètre = 19,5 u



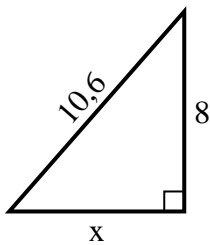
5) Périmètre = 29 u



6) Périmètre = 10,5 u



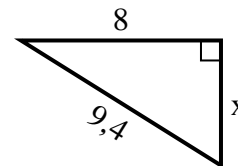
7) Périmètre = 25,6 u



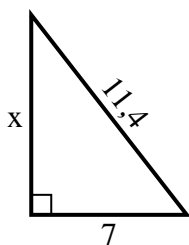
8) Périmètre = 14,3 u



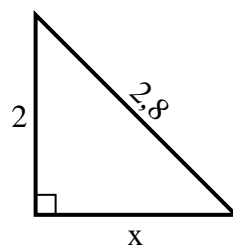
9) Périmètre = 22,4 u



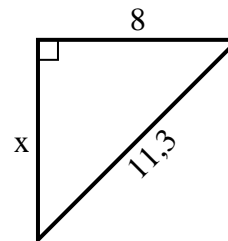
10) Périmètre = 27,4 u



11) Périmètre = 6,8 u



12) Périmètre = 27,3 u



Réponses

1. 6

2. 5

3. 3

4. 8

5. 9

6. 2

7. 7

8. 2

9. 5

10. 9

11. 2

12. 8