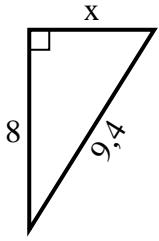


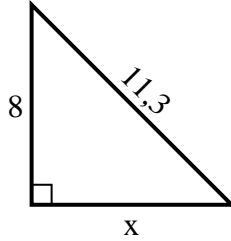


Trouvez la valeur de x.

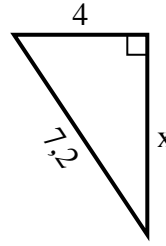
1) Périmètre = 22,4 u



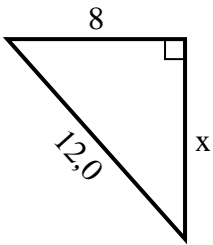
2) Périmètre = 27,3 u



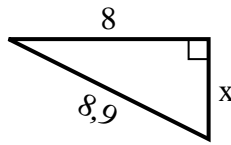
3) Périmètre = 17,2 u



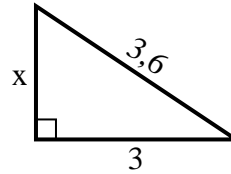
4) Périmètre = 29 u



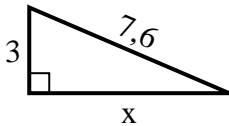
5) Périmètre = 20,9 u



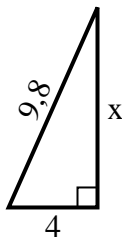
6) Périmètre = 8,6 u



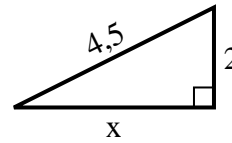
7) Périmètre = 17,6 u



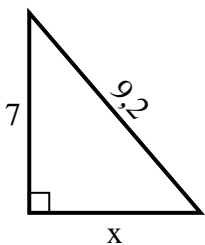
8) Périmètre = 22,8 u



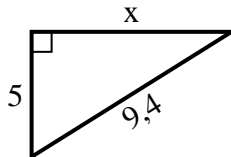
9) Périmètre = 10,5 u



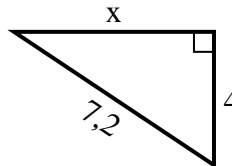
10) Périmètre = 22,2 u



11) Périmètre = 22,4 u



12) Périmètre = 17,2 u



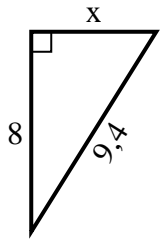
Réponses

1. _____
2. _____
3. _____
4. _____
5. _____
6. _____
7. _____
8. _____
9. _____
10. _____
11. _____
12. _____

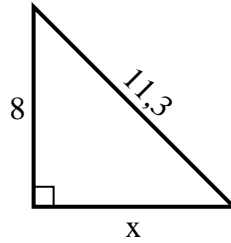


Trouvez la valeur de x.

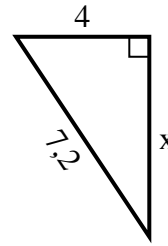
1) Périmètre = 22,4 u



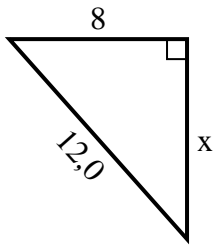
2) Périmètre = 27,3 u



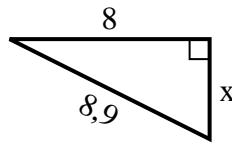
3) Périmètre = 17,2 u



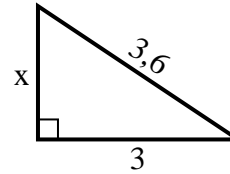
4) Périmètre = 29 u



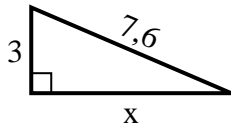
5) Périmètre = 20,9 u



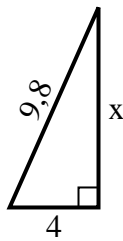
6) Périmètre = 8,6 u



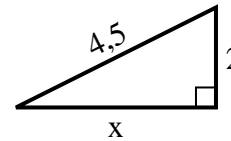
7) Périmètre = 17,6 u



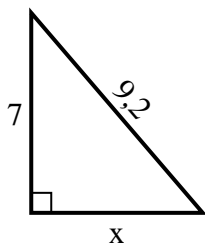
8) Périmètre = 22,8 u



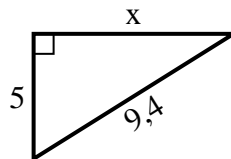
9) Périmètre = 10,5 u



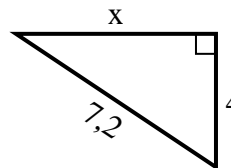
10) Périmètre = 22,2 u



11) Périmètre = 22,4 u



12) Périmètre = 17,2 u



Réponses

1. 5

2. 8

3. 6

4. 9

5. 4

6. 2

7. 7

8. 9

9. 4

10. 6

11. 8

12. 6