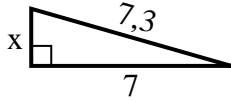


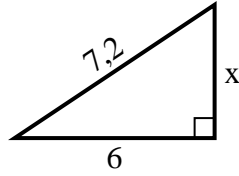


Trouvez la valeur de x .

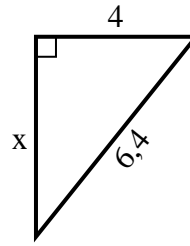
1) Périmètre = 16,3 u



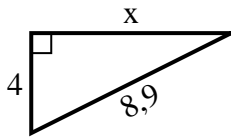
2) Périmètre = 17,2 u



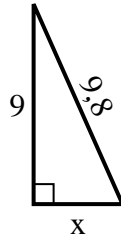
3) Périmètre = 15,4 u



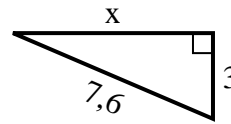
4) Périmètre = 20,9 u



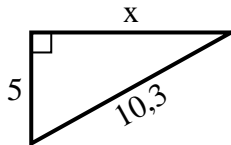
5) Périmètre = 22,8 u



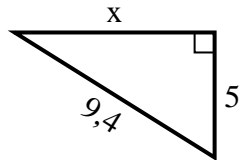
6) Périmètre = 17,6 u



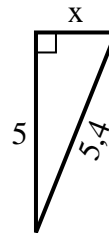
7) Périmètre = 24,3 u



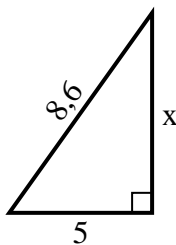
8) Périmètre = 22,4 u



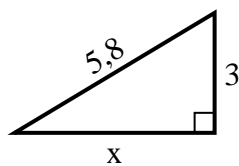
9) Périmètre = 12,4 u



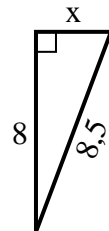
10) Périmètre = 20,6 u



11) Périmètre = 13,8 u



12) Périmètre = 19,5 u



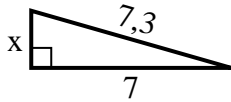
Réponses

1. _____
2. _____
3. _____
4. _____
5. _____
6. _____
7. _____
8. _____
9. _____
10. _____
11. _____
12. _____

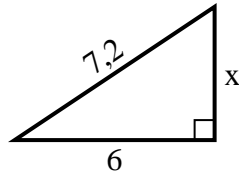


Trouvez la valeur de x .

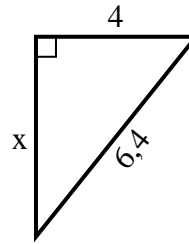
1) Périmètre = 16,3 u



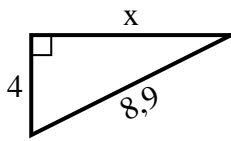
2) Périmètre = 17,2 u



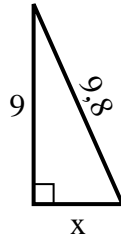
3) Périmètre = 15,4 u



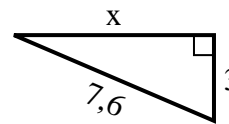
4) Périmètre = 20,9 u



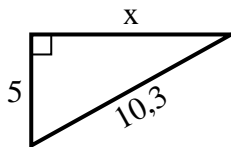
5) Périmètre = 22,8 u



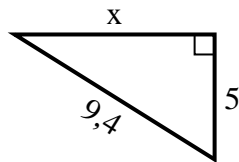
6) Périmètre = 17,6 u



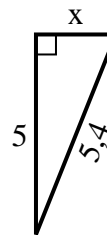
7) Périmètre = 24,3 u



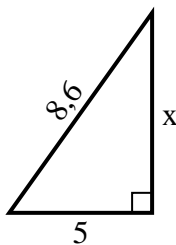
8) Périmètre = 22,4 u



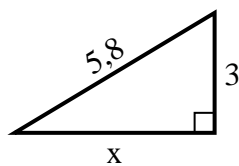
9) Périmètre = 12,4 u



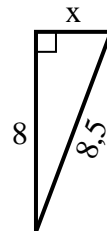
10) Périmètre = 20,6 u



11) Périmètre = 13,8 u



12) Périmètre = 19,5 u



Réponses

1. 2

2. 4

3. 5

4. 8

5. 4

6. 7

7. 9

8. 8

9. 2

10. 7

11. 5

12. 3