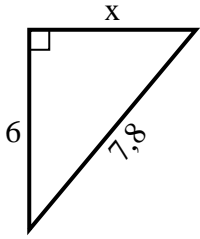


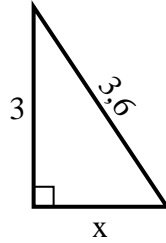


Trouvez la valeur de x .

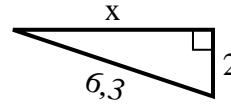
1) Périmètre = 18,8 u



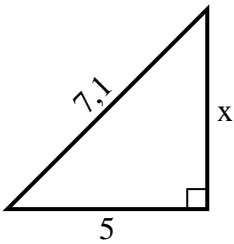
2) Périmètre = 8,6 u



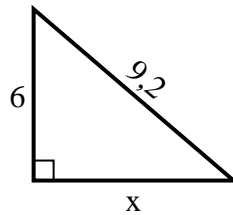
3) Périmètre = 14,3 u



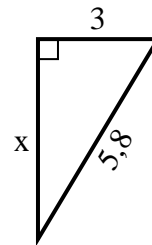
4) Périmètre = 17,1 u



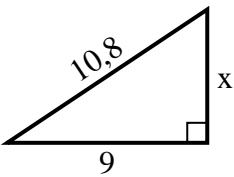
5) Périmètre = 22,2 u



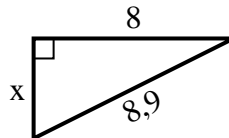
6) Périmètre = 13,8 u



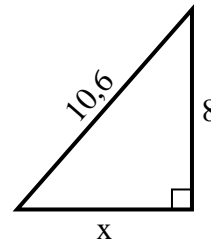
7) Périmètre = 25,8 u



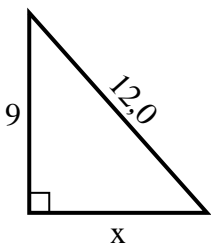
8) Périmètre = 20,9 u



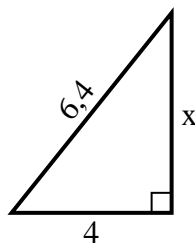
9) Périmètre = 25,6 u



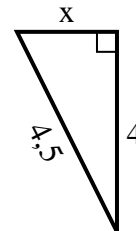
10) Périmètre = 29 u



11) Périmètre = 15,4 u



12) Périmètre = 10,5 u



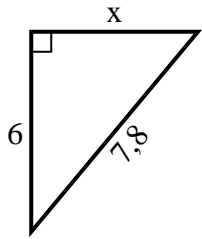
Réponses

1. _____
2. _____
3. _____
4. _____
5. _____
6. _____
7. _____
8. _____
9. _____
10. _____
11. _____
12. _____

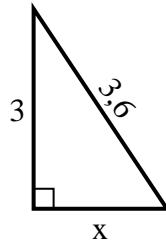


Trouvez la valeur de x .

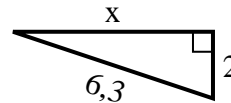
1) Périmètre = 18,8 u



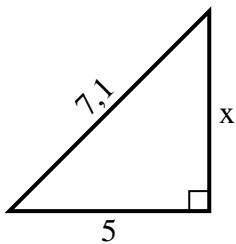
2) Périmètre = 8,6 u



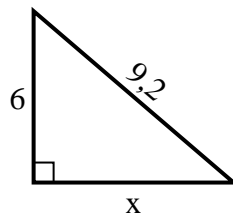
3) Périmètre = 14,3 u



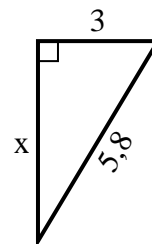
4) Périmètre = 17,1 u



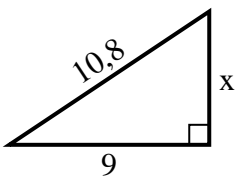
5) Périmètre = 22,2 u



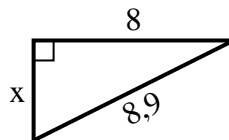
6) Périmètre = 13,8 u



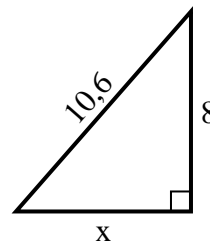
7) Périmètre = 25,8 u



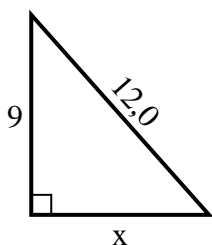
8) Périmètre = 20,9 u



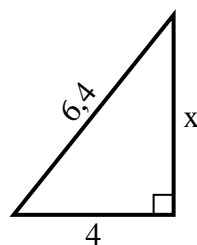
9) Périmètre = 25,6 u



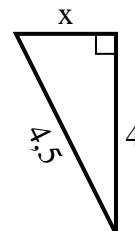
10) Périmètre = 29 u



11) Périmètre = 15,4 u



12) Périmètre = 10,5 u



Réponses

1. 5

2. 2

3. 6

4. 5

5. 7

6. 5

7. 6

8. 4

9. 7

10. 8

11. 5

12. 2