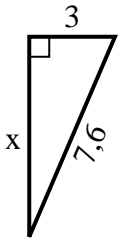


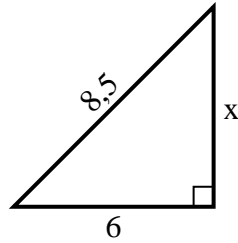


Trouvez la valeur de x .

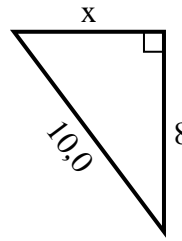
1) Périmètre = 17,6 u



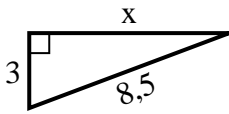
2) Périmètre = 20,5 u



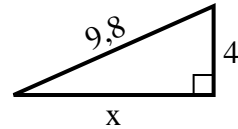
3) Périmètre = 24 u



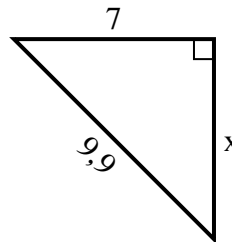
4) Périmètre = 19,5 u



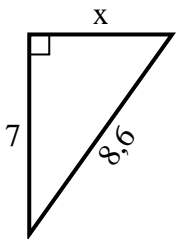
5) Périmètre = 22,8 u



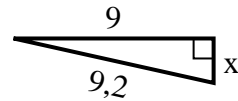
6) Périmètre = 23,9 u



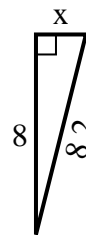
7) Périmètre = 20,6 u



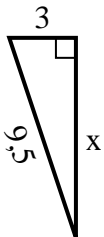
8) Périmètre = 20,2 u



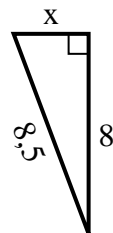
9) Périmètre = 18,2 u



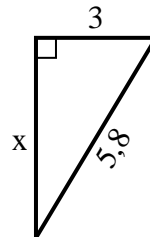
10) Périmètre = 21,5 u



11) Périmètre = 19,5 u



12) Périmètre = 13,8 u



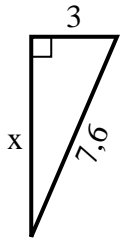
Réponses

1. _____
2. _____
3. _____
4. _____
5. _____
6. _____
7. _____
8. _____
9. _____
10. _____
11. _____
12. _____

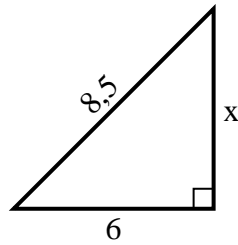


Trouvez la valeur de x .

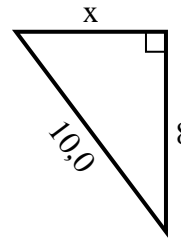
1) Périmètre = 17,6 u



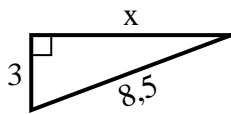
2) Périmètre = 20,5 u



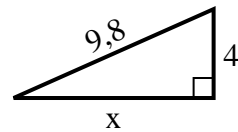
3) Périmètre = 24 u



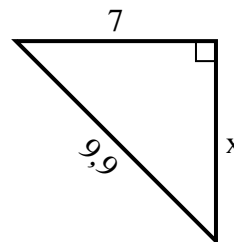
4) Périmètre = 19,5 u



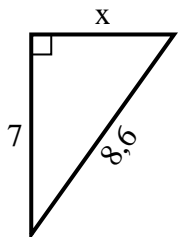
5) Périmètre = 22,8 u



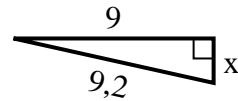
6) Périmètre = 23,9 u



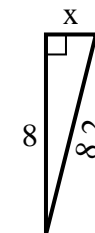
7) Périmètre = 20,6 u



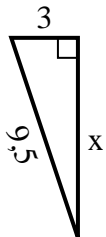
8) Périmètre = 20,2 u



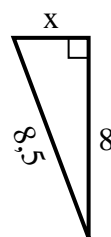
9) Périmètre = 18,2 u



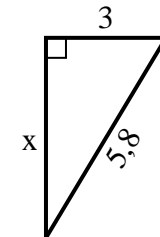
10) Périmètre = 21,5 u



11) Périmètre = 19,5 u



12) Périmètre = 13,8 u



Réponses

1. 7

2. 6

3. 6

4. 8

5. 9

6. 7

7. 5

8. 2

9. 2

10. 9

11. 3

12. 5