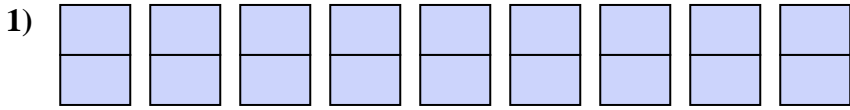


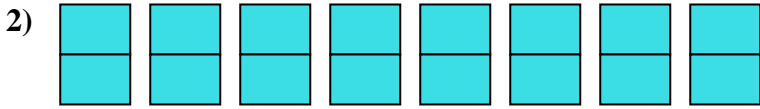


Écrivez le montant ombré sous forme de fraction.

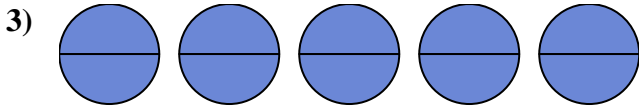
Réponses



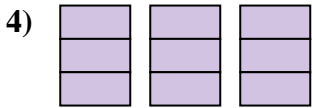
1. _____



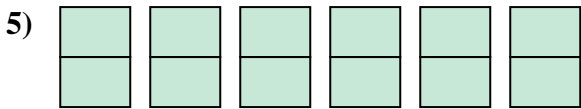
2. _____



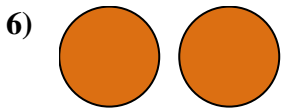
3. _____



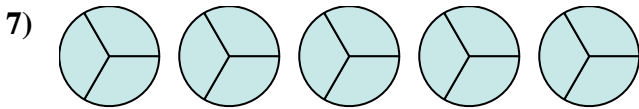
4. _____



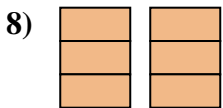
5. _____



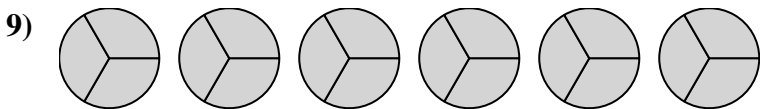
6. _____



7. _____



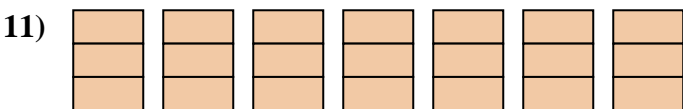
8. _____



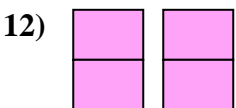
9. _____



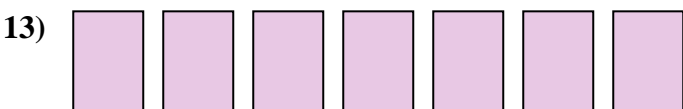
10. _____



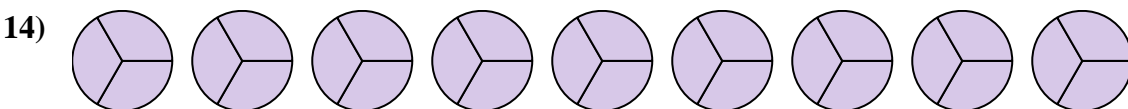
11. _____



12. _____



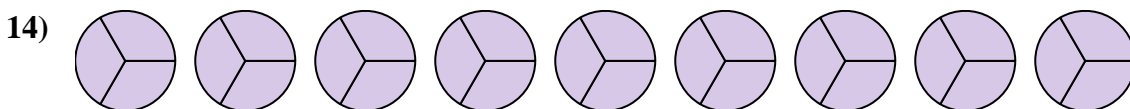
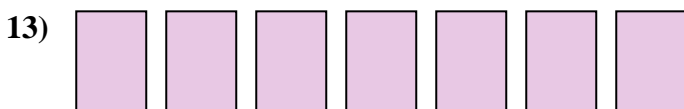
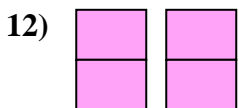
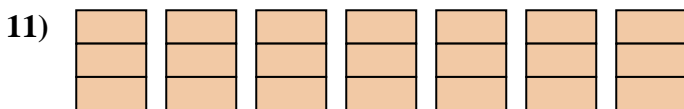
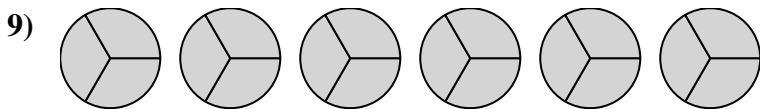
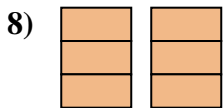
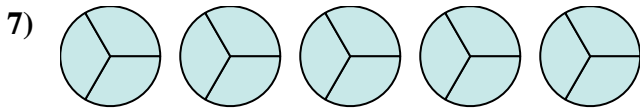
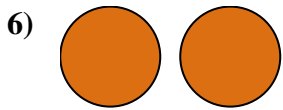
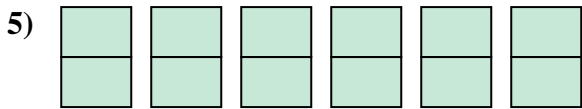
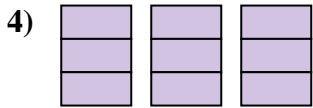
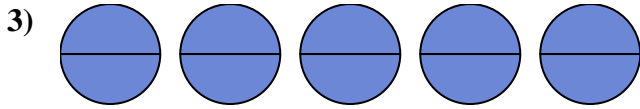
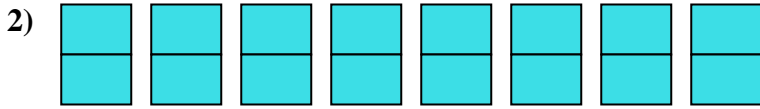
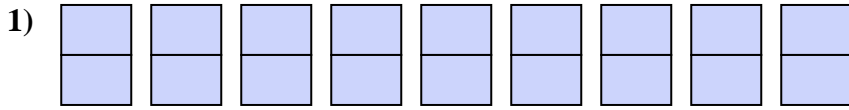
13. _____



14. _____



Écrivez le montant ombré sous forme de fraction.

**Réponses**

1. $\frac{18}{2}$

2. $\frac{16}{2}$

3. $\frac{10}{2}$

4. $\frac{9}{3}$

5. $\frac{12}{2}$

6. $\frac{2}{1}$

7. $\frac{15}{3}$

8. $\frac{6}{3}$

9. $\frac{18}{3}$

10. $\frac{8}{2}$

11. $\frac{21}{3}$

12. $\frac{4}{2}$

13. $\frac{7}{1}$

14. $\frac{27}{3}$