



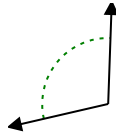
Indiquez si l'angle est 'aigu', 'droit', 'obtus' ou 'plat'.

Réponses

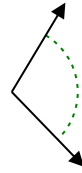
Ex)



1)



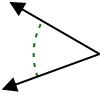
2)



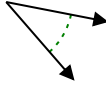
Ex. **obtus**

1. _____

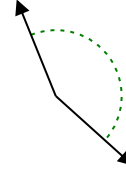
3)



4)



5)

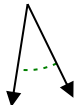


2. _____

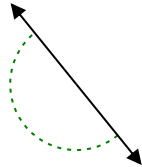
3. _____

4. _____

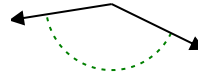
6)



7)



8)

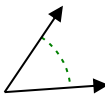


5. _____

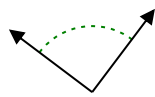
6. _____

7. _____

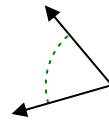
9)



10)



11)

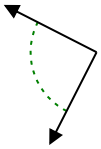


8. _____

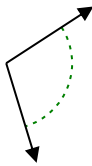
9. _____

10. _____

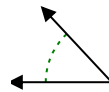
12)



13)



14)



11. _____

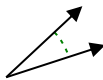
12. _____

13. _____

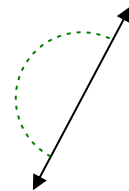
15)



16)



17)

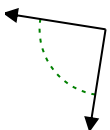


14. _____

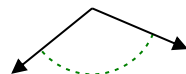
15. _____

16. _____

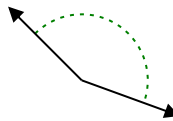
18)



19)



20)



17. _____

18. _____

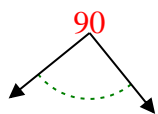
19. _____

20. _____

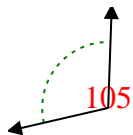


Indiquez si l'angle est 'aigu', 'droit', 'obtus' ou 'plat'.

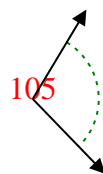
Ex)



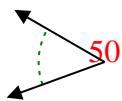
1)



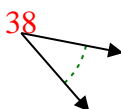
2)



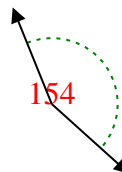
3)



4)



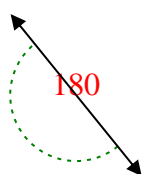
5)



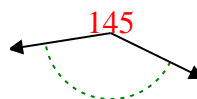
6)



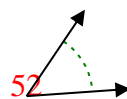
7)



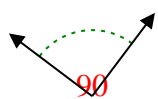
8)



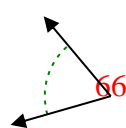
9)



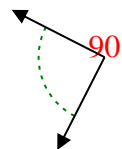
10)



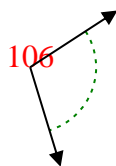
11)



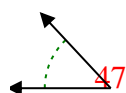
12)



13)



14)



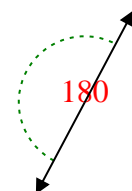
15)



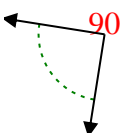
16)



17)



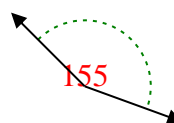
18)



19)



20)



Réponses

Ex. **obtus**

1. **droit**

2. **droit**

3. **aigu**

4. **aigu**

5. **droit**

6. **aigu**

7. **plat**

8. **droit**

9. **aigu**

10. **obtus**

11. **aigu**

12. **obtus**

13. **droit**

14. **aigu**

15. **aigu**

16. **aigu**

17. **plat**

18. **obtus**

19. **droit**

20. **droit**

1-10	95	90	85	80	75	70	65	60	55	50
11-20	45	40	35	30	25	20	15	10	5	0