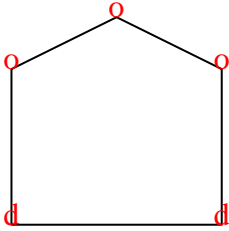




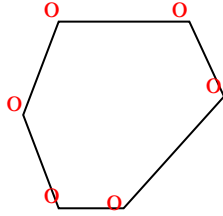


Dénombrer le nombre angles aigus, droits, obtus de chaque figure.

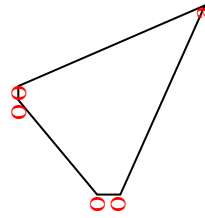
Ex)



1)



2)



**Réponses**

Ex. 0 3 2

1. 0 6 0

2. 1 4 0

3. 1 2 1

4. 3 0 0

5. 0 2 3

6. 2 0 1

7. 0 4 2

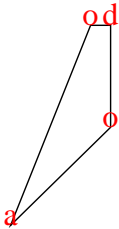
8. 0 6 0

9. 0 7 0

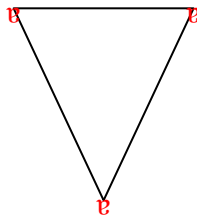
10. 0 2 3

11. 2 2 0

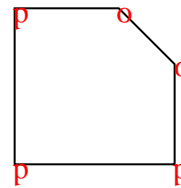
3)



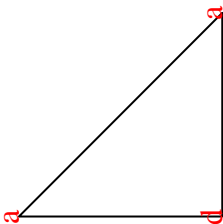
4)



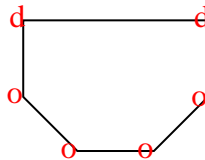
5)



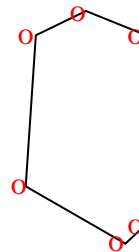
6)



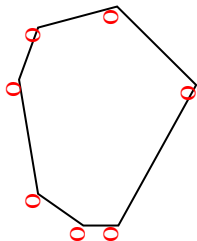
7)



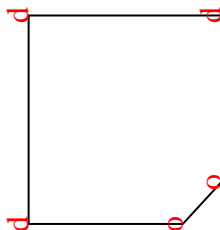
8)



9)



10)



11)

