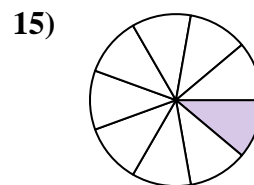
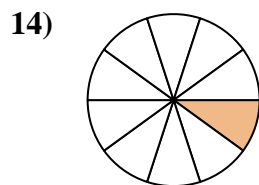
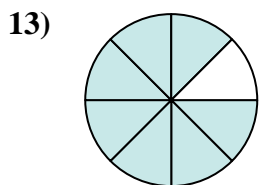
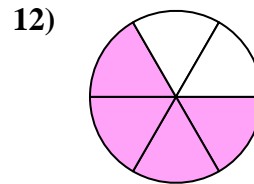
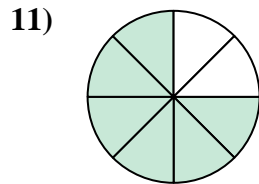
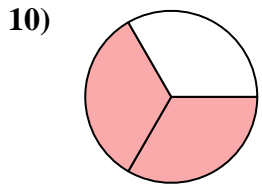
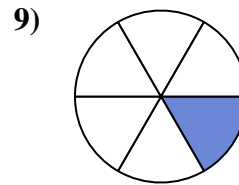
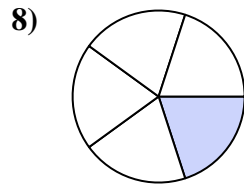
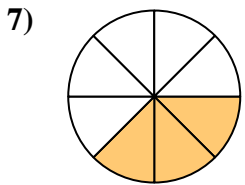
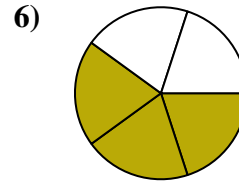
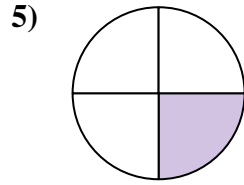
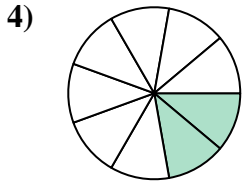
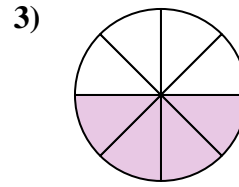
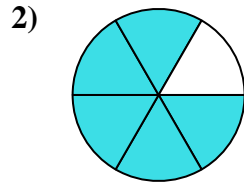
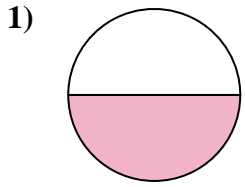




Trouvez l'angle (en degrés) de la partie ombrée du cercle.

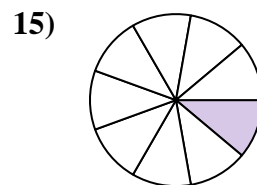
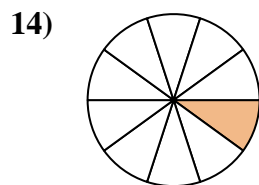
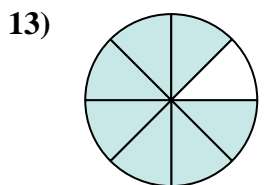
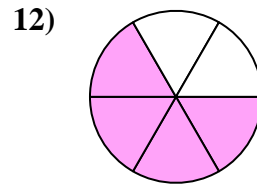
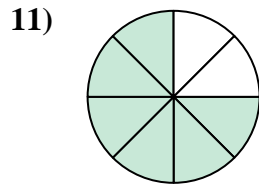
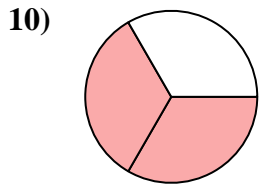
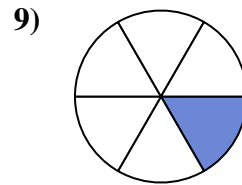
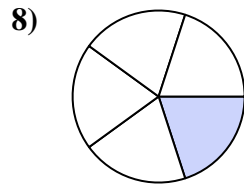
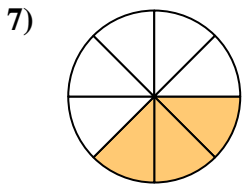
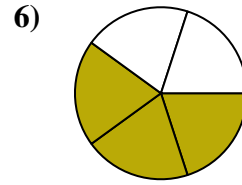
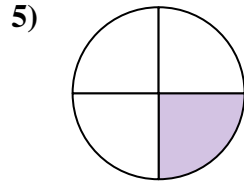
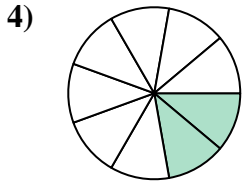
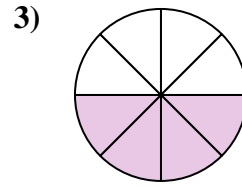
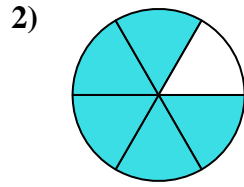
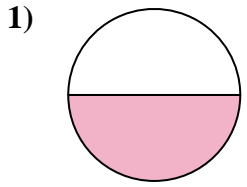


Réponses

1. _____
2. _____
3. _____
4. _____
5. _____
6. _____
7. _____
8. _____
9. _____
10. _____
11. _____
12. _____
13. _____
14. _____
15. _____



Trouvez l'angle (en degrés) de la partie ombrée du cercle.



Réponses

1. 180

2. 300

3. 180

4. 80

5. 90

6. 216

7. 135

8. 72

9. 60

10. 240

11. 270

12. 240

13. 315

14. 36

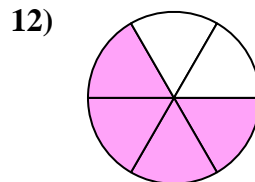
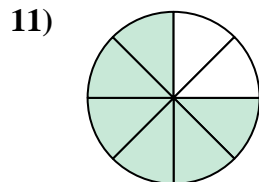
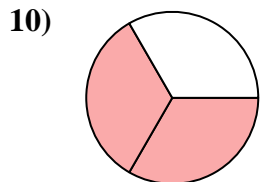
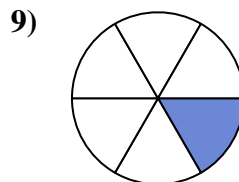
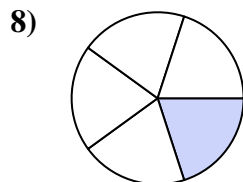
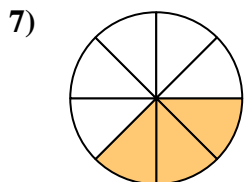
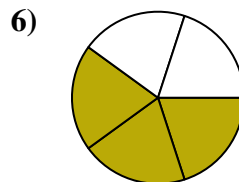
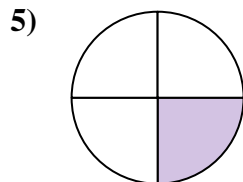
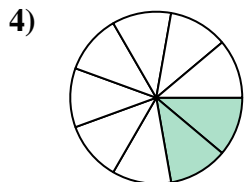
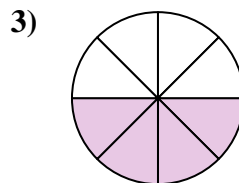
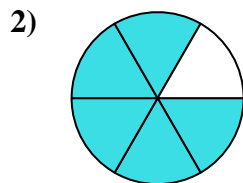
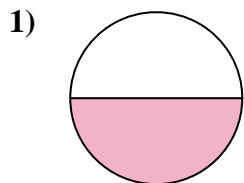
15. 40



Trouvez l'angle (en degrés) de la partie ombrée du cercle.

135	72	80	60	90
216	270	240	180	180
240	300			

Réponses



1. _____
2. _____
3. _____
4. _____
5. _____
6. _____
7. _____
8. _____
9. _____
10. _____
11. _____
12. _____