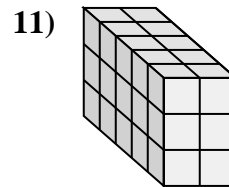
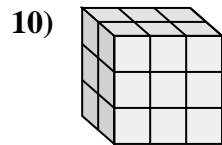
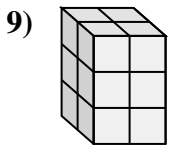
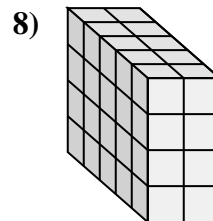
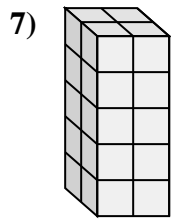
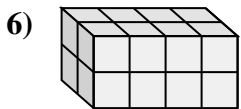
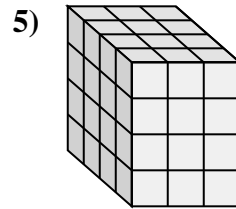
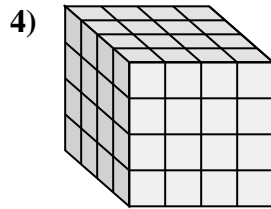
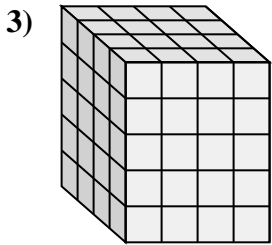
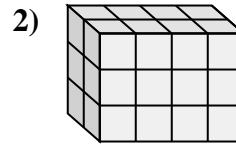
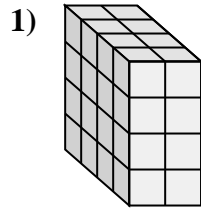
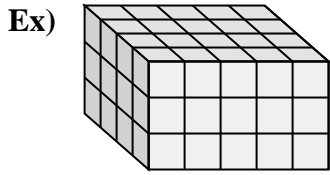




Associez chaque problème à l'équation qui pourrait le représenter. Répondez avec le terme et la lettre manquants.



Réponses

Ex. **E, 60**

1. **K, 32**

2. **D, 3**

3. **I, 5**

4. **G, 4**

5. **J, 4**

6. **H, 2**

7. **F, 20**

8. **B, 5**

9. **A, 12**

10. **C, 3**

11. **L, 2**

A. $2 \times 2 \times 3 = \underline{\quad}$

B. $\underline{\quad} \times 2 \times 4 = 40$

C. $2 \times 3 \times \underline{\quad} = 18$

D. $2 \times 4 \times \underline{\quad} = 24$

E. $4 \times 5 \times 3 = \underline{\quad}$

F. $2 \times 2 \times 5 = \underline{\quad}$

G. $4 \times \underline{\quad} \times 4 = 64$

H. $\underline{\quad} \times 4 \times 2 = 16$

I. $4 \times 4 \times \underline{\quad} = 80$

J. $\underline{\quad} \times 3 \times 4 = 48$

K. $4 \times 2 \times 4 = \underline{\quad}$

L. $5 \times \underline{\quad} \times 3 = 30$