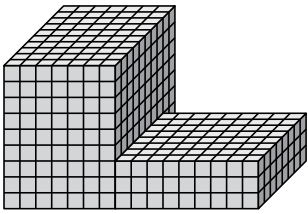




Trouvez le volume total de chaque figure. La mesure est en cm (pas à l'échelle).

Réponses

1)



1. _____

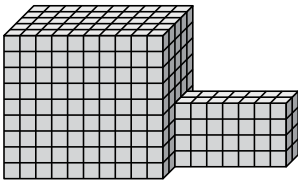
2. _____

3. _____

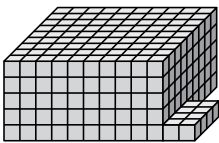
4. _____

5. _____

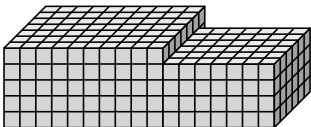
2)



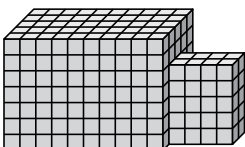
3)



4)



5)

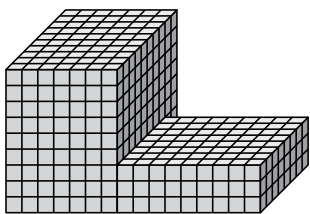




Trouvez le volume total de chaque figure. La mesure est en cm (pas à l'échelle).

Réponses

1)

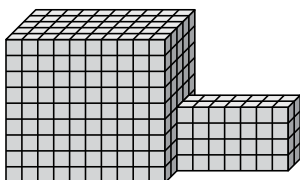


$$7 \times 10 \times 9 = 630$$

$$9 \times 8 \times 3 = 216$$

1. 846 cm³

2)

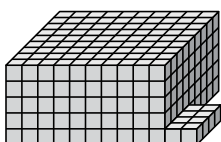


$$10 \times 5 \times 9 = 450$$

$$7 \times 2 \times 4 = 56$$

2. 506 cm³

3)

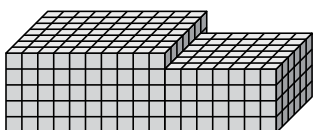


$$10 \times 9 \times 5 = 450$$

$$2 \times 4 \times 1 = 8$$

3. 458 cm³

4)

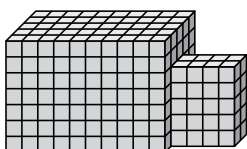


$$10 \times 7 \times 5 = 350$$

$$7 \times 6 \times 4 = 168$$

4. 518 cm³

5)



$$10 \times 5 \times 7 = 350$$

$$4 \times 2 \times 5 = 40$$

5. 390 cm³