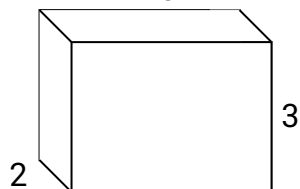




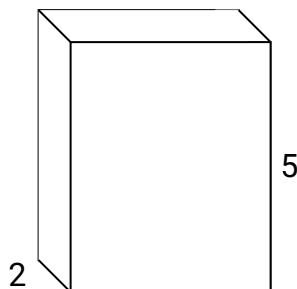
Remplissez chaque prisme rectangulaire de cubes pour déterminer le volume. Chaque prisme est mesuré en cm (pas à l'échelle).

Réponses

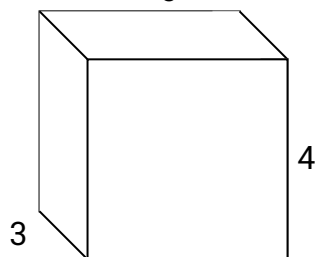
Ex) $4 \frac{2}{3}$



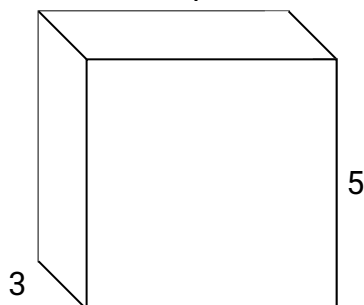
1) $4 \frac{1}{2}$



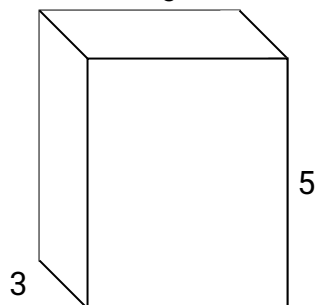
2) $4 \frac{3}{5}$



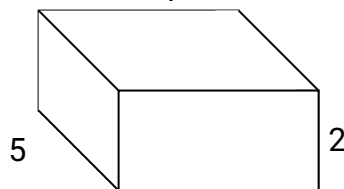
3) $5 \frac{2}{4}$



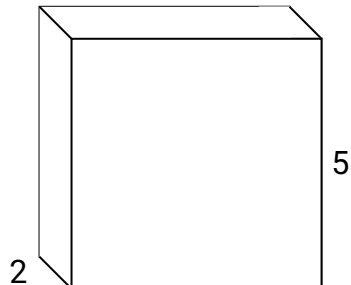
4) $4 \frac{2}{5}$



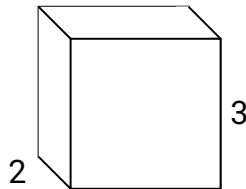
5) $4 \frac{2}{4}$



6) $5 \frac{2}{3}$



7) $3 \frac{1}{4}$

Ex. **28 cm**

1. _____

2. _____

3. _____

4. _____

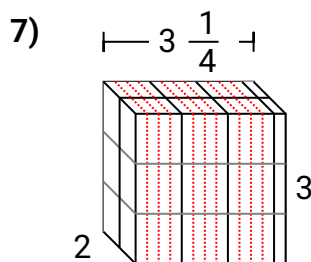
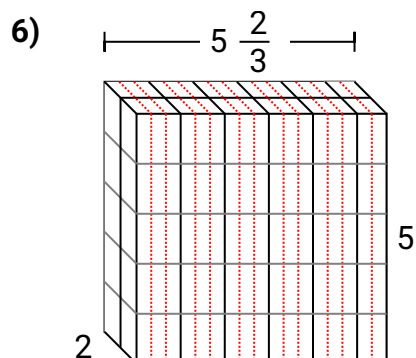
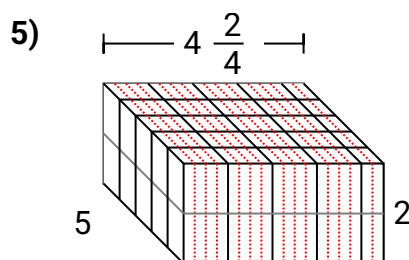
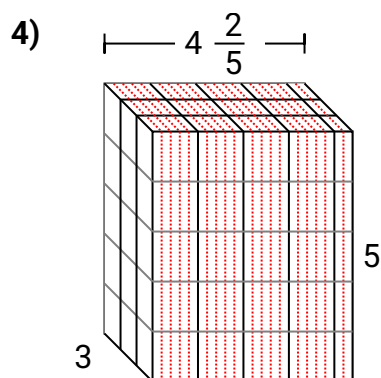
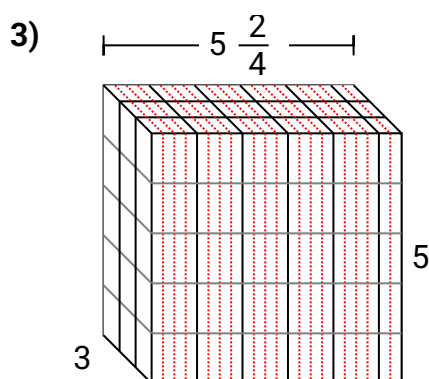
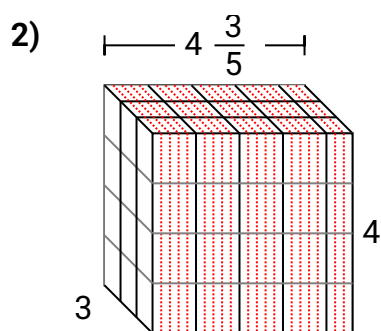
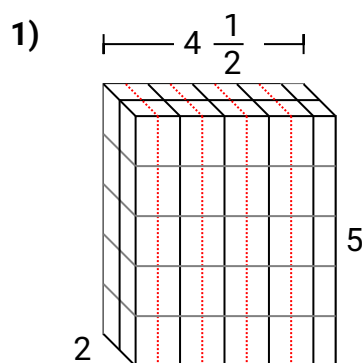
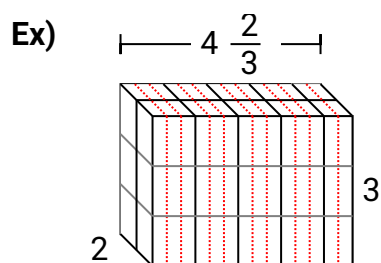
5. _____

6. _____

7. _____



Remplissez chaque prisme rectangulaire de cubes pour déterminer le volume. Chaque prisme est mesuré en cm (pas à l'échelle).

**Réponses**Ex. **28 cm**1. **45 cm**2. **$55 \frac{1}{5}$ cm**3. **$82 \frac{2}{4}$ cm**4. **66 cm**5. **45 cm**6. **$56 \frac{2}{3}$ cm**7. **$19 \frac{2}{4}$ cm**