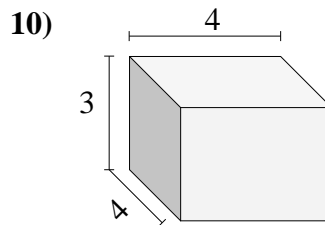
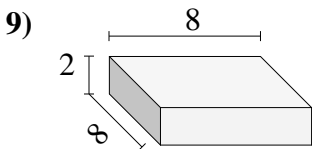
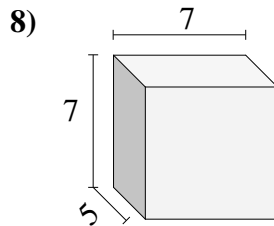
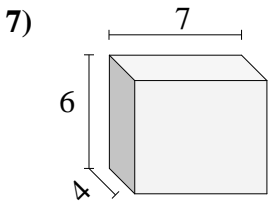
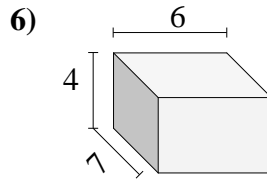
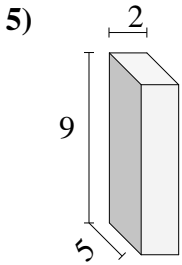
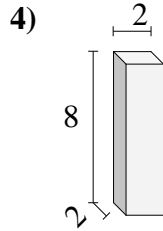
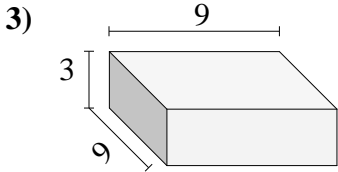
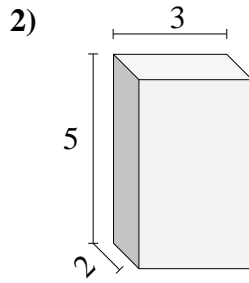
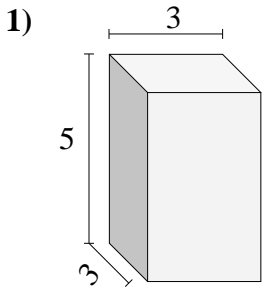




Calculez le volume de prismes rectangulaires. Unités sont en cm (pas à l'échelle).

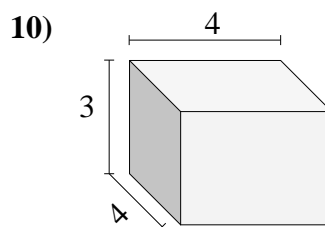
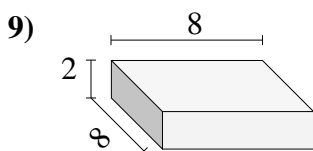
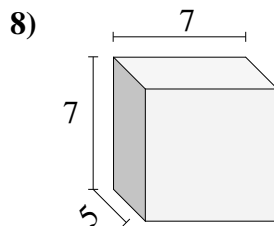
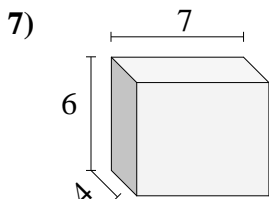
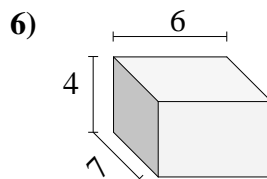
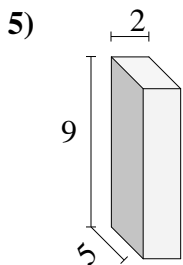
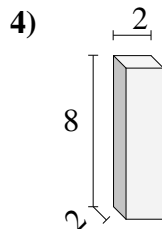
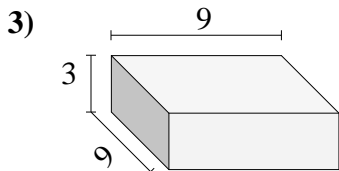
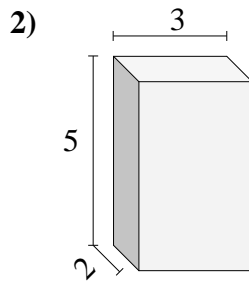
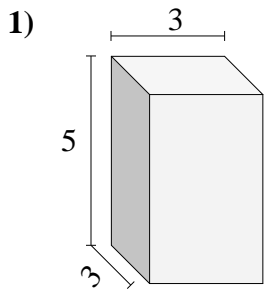


Réponses

- 1. _____
- 2. _____
- 3. _____
- 4. _____
- 5. _____
- 6. _____
- 7. _____
- 8. _____
- 9. _____
- 10. _____



Calculez le volume de prismes rectangulaires. Unités sont en cm (pas à l'échelle).

**Réponses**1. 452. 303. 2434. 325. 906. 1687. 1688. 2459. 12810. 48