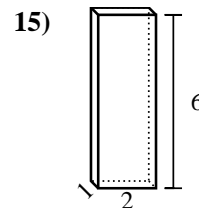
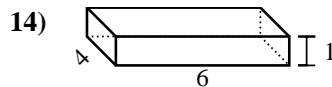
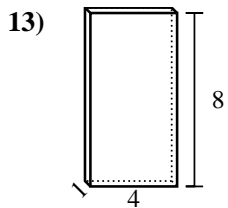
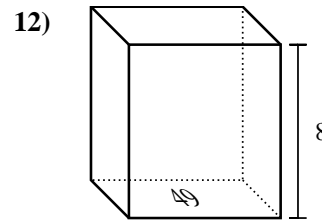
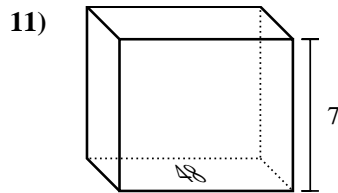
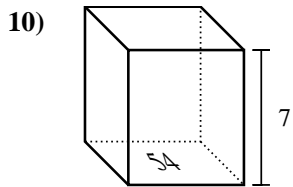
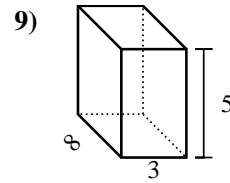
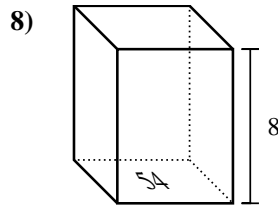
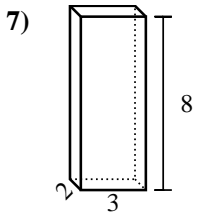
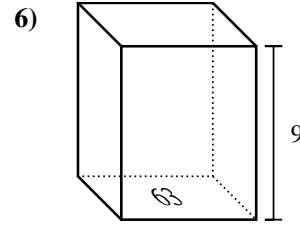
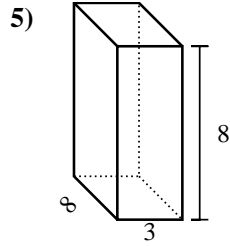
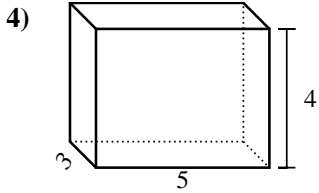
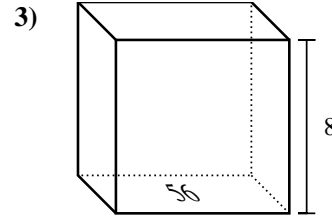
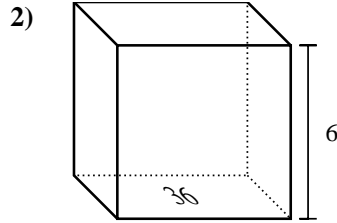
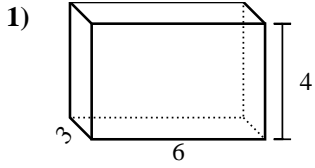




Calculez le volume de prismes rectangulaires. Unités sont en cm (pas à l'échelle). Rappel  $V = BH$  and  $V=L \times l \times H$

**Réponses**

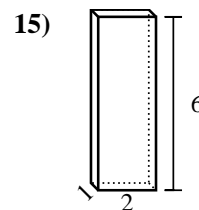
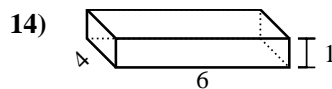
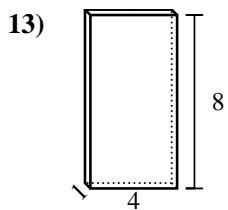
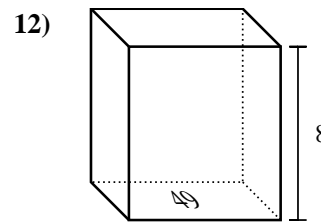
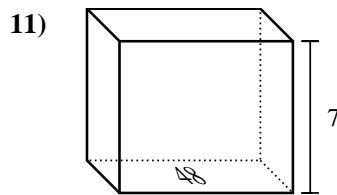
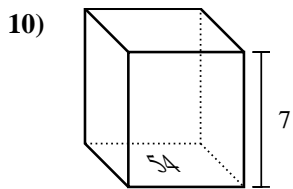
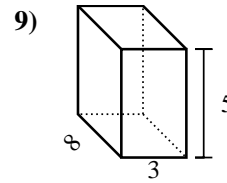
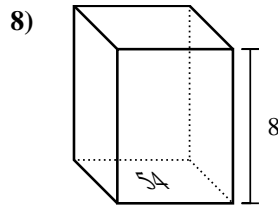
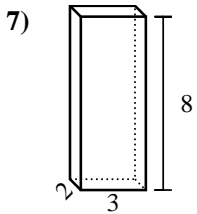
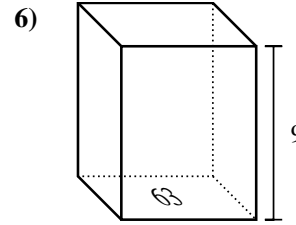
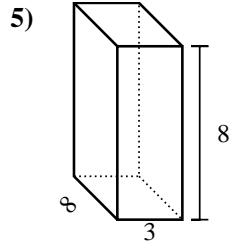
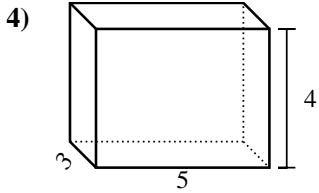
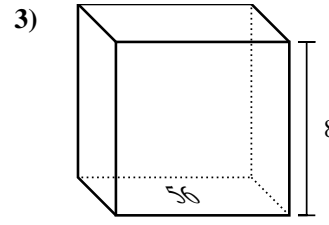
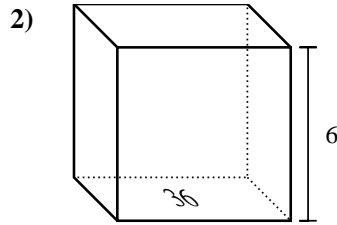
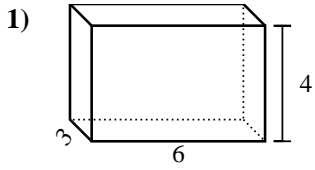


1. \_\_\_\_\_
2. \_\_\_\_\_
3. \_\_\_\_\_
4. \_\_\_\_\_
5. \_\_\_\_\_
6. \_\_\_\_\_
7. \_\_\_\_\_
8. \_\_\_\_\_
9. \_\_\_\_\_
10. \_\_\_\_\_
11. \_\_\_\_\_
12. \_\_\_\_\_
13. \_\_\_\_\_
14. \_\_\_\_\_
15. \_\_\_\_\_



Calculez le volume de prismes rectangulaires. Unités sont en cm (pas à l'échelle). Rappel  $V = BH$  and  $V=L \times l \times H$

**Réponses**



1. 72 cm<sup>3</sup>

2. 216 cm<sup>3</sup>

3. 448 cm<sup>3</sup>

4. 60 cm<sup>3</sup>

5. 192 cm<sup>3</sup>

6. 567 cm<sup>3</sup>

7. 48 cm<sup>3</sup>

8. 432 cm<sup>3</sup>

9. 120 cm<sup>3</sup>

10. 378 cm<sup>3</sup>

11. 336 cm<sup>3</sup>

12. 392 cm<sup>3</sup>

13. 32 cm<sup>3</sup>

14. 24 cm<sup>3</sup>

15. 12 cm<sup>3</sup>