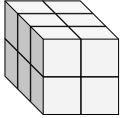


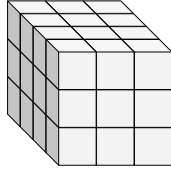


Trouvez la longueur, la largeur et la hauteur du prisme rectangulaire. Trouvez ensuite le volume.

Ex)



1)



**Réponses**

Ex. 3 2 2 12

1. \_\_\_\_\_

2. \_\_\_\_\_

3. \_\_\_\_\_

4. \_\_\_\_\_

5. \_\_\_\_\_

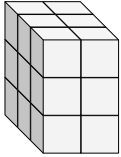
6. \_\_\_\_\_

7. \_\_\_\_\_

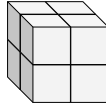
8. \_\_\_\_\_

9. \_\_\_\_\_

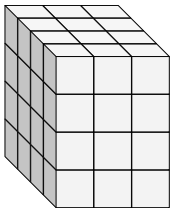
2)



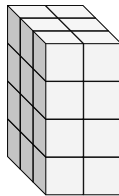
3)



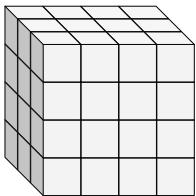
4)



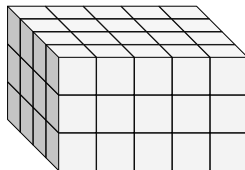
5)



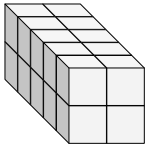
6)



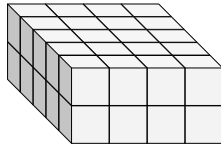
7)



8)



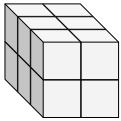
9)



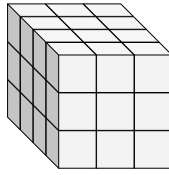


Trouvez la longueur, la largeur et la hauteur du prisme rectangulaire. Trouvez ensuite le volume.

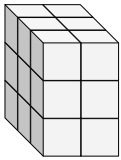
Ex)



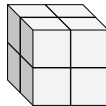
1)



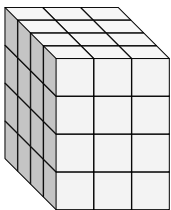
2)



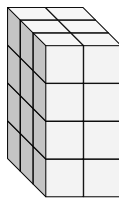
3)



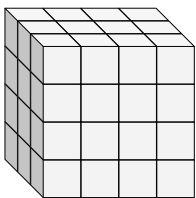
4)



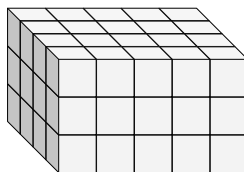
5)



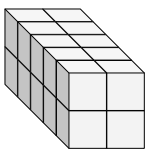
6)



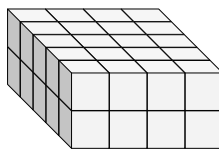
7)



8)



9)

**Réponses**Ex. 3 2 2 121. 4 3 3 362. 3 2 3 183. 2 2 2 84. 4 3 4 485. 3 2 4 246. 3 4 4 487. 4 5 3 608. 5 2 2 209. 5 4 2 40