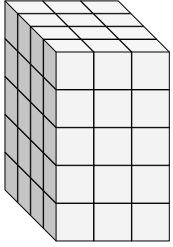


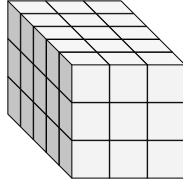


Trouvez la longueur, la largeur et la hauteur du prisme rectangulaire. Trouvez ensuite le volume.

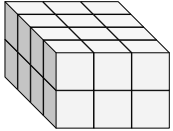
Ex)



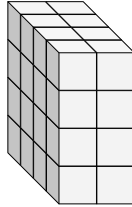
1)



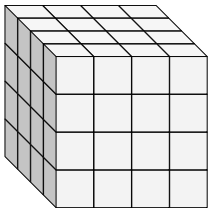
2)



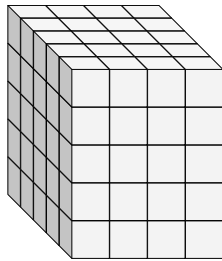
3)



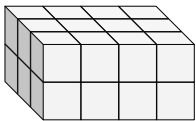
4)



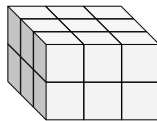
5)



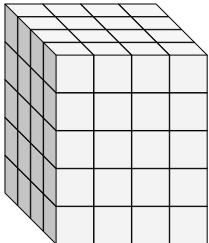
6)



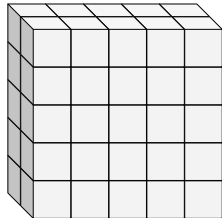
7)



8)



9)



Réponses

Ex. 4 3 5 60

1. _____

2. _____

3. _____

4. _____

5. _____

6. _____

7. _____

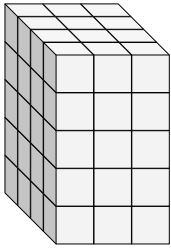
8. _____

9. _____

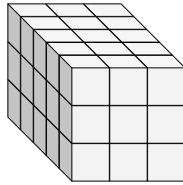


Trouvez la longueur, la largeur et la hauteur du prisme rectangulaire. Trouvez ensuite le volume.

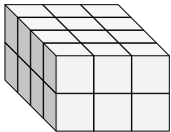
Ex)



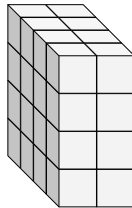
1)



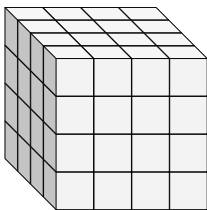
2)



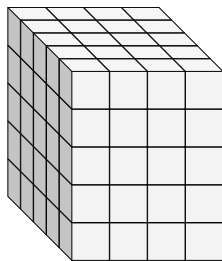
3)



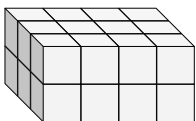
4)



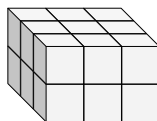
5)



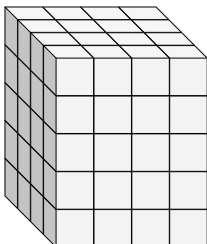
6)



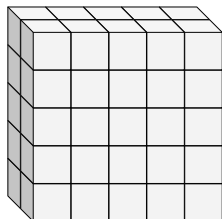
7)



8)



9)

RéponsesEx. 4 3 5 601. 5 3 3 452. 4 3 2 243. 4 2 4 324. 4 4 4 645. 5 4 5 1006. 3 4 2 247. 3 3 2 188. 4 4 5 809. 2 5 5 50