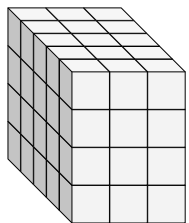


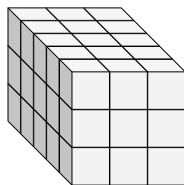


Trouvez la longueur, la largeur et la hauteur du prisme rectangulaire. Trouvez ensuite le volume.

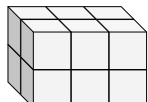
Ex)



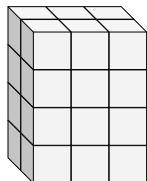
1)



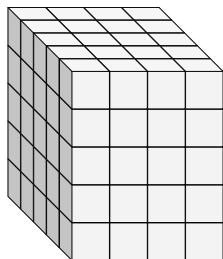
2)



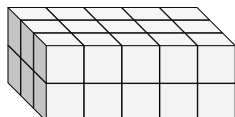
3)



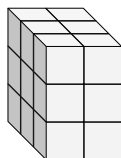
4)



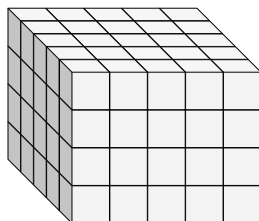
5)



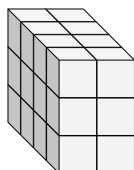
6)



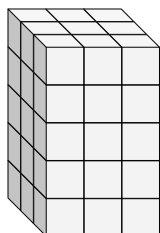
7)



8)



9)



Réponses

Ex. 5 3 4 60

1. _____

2. _____

3. _____

4. _____

5. _____

6. _____

7. _____

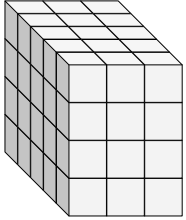
8. _____

9. _____

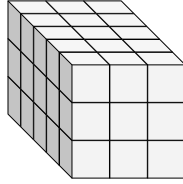


Trouvez la longueur, la largeur et la hauteur du prisme rectangulaire. Trouvez ensuite le volume.

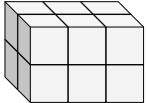
Ex)



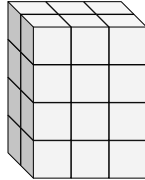
1)



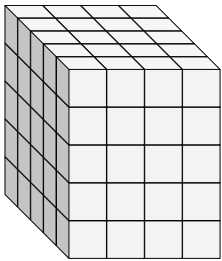
2)



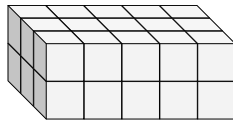
3)



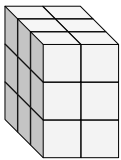
4)



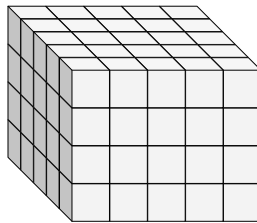
5)



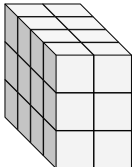
6)



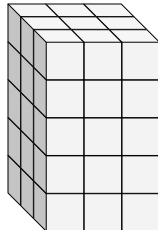
7)



8)



9)

RéponsesEx. 5 3 4 601. 5 3 3 452. 2 3 2 123. 2 3 4 244. 5 4 5 1005. 3 5 2 306. 3 2 3 187. 5 5 4 1008. 4 2 3 249. 3 3 5 45