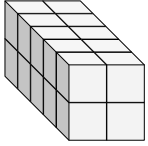


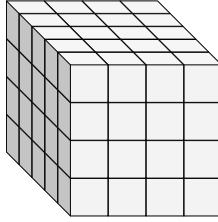


Trouvez la longueur, la largeur et la hauteur du prisme rectangulaire. Trouvez ensuite le volume.

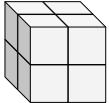
Ex)



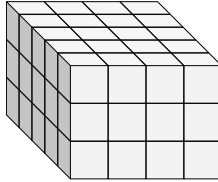
1)



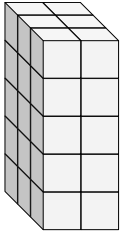
2)



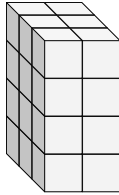
3)



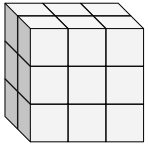
4)



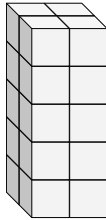
5)



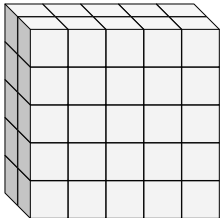
6)



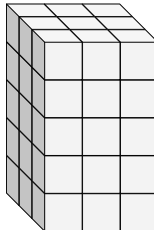
7)



8)



9)



### Réponses

Ex. 5 2 2 20

1. \_\_\_\_\_

2. \_\_\_\_\_

3. \_\_\_\_\_

4. \_\_\_\_\_

5. \_\_\_\_\_

6. \_\_\_\_\_

7. \_\_\_\_\_

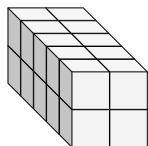
8. \_\_\_\_\_

9. \_\_\_\_\_

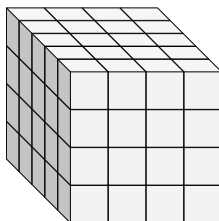


Trouvez la longueur, la largeur et la hauteur du prisme rectangulaire. Trouvez ensuite le volume.

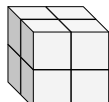
Ex)



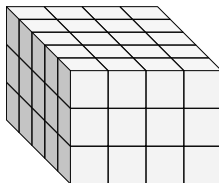
1)



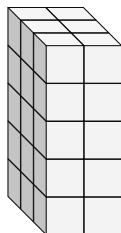
2)



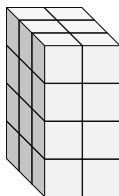
3)



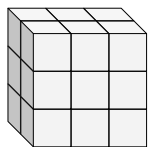
4)



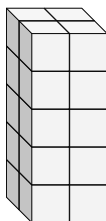
5)



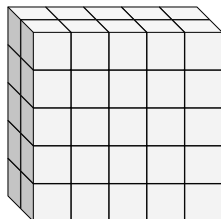
6)



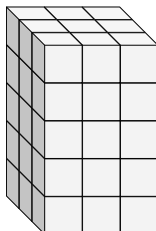
7)



8)



9)

**Réponses**Ex. 5 2 2 201. 5 4 4 802. 2 2 2 83. 5 4 3 604. 3 2 5 305. 3 2 4 246. 2 3 3 187. 2 2 5 208. 2 5 5 509. 3 3 5 45