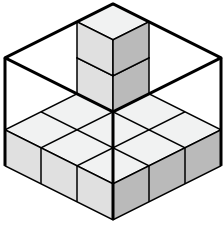




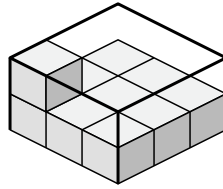
Déterminez le volume de chaque boîte. Chaque bloc correspond à 1 unité cubique (u³).

Réponses

1)



2)



1. _____

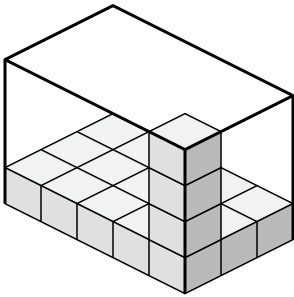
2. _____

3. _____

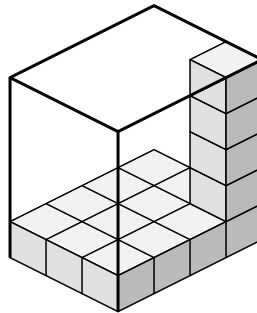
4. _____

5. _____

3)



4)

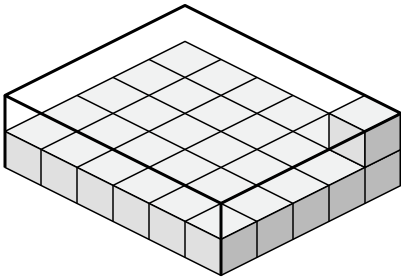


6. _____

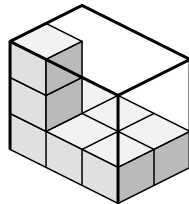
7. _____

8. _____

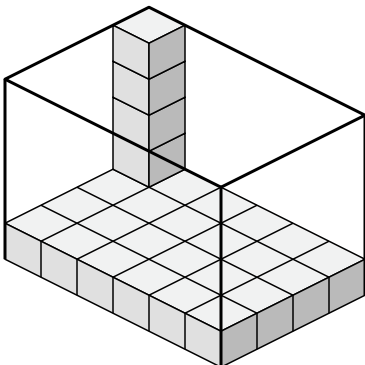
5)



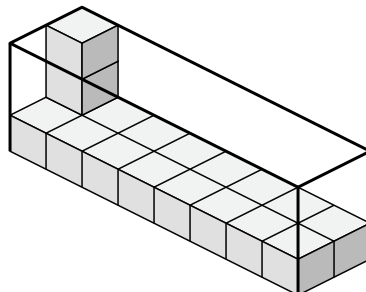
6)



7)



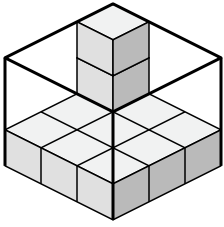
8)



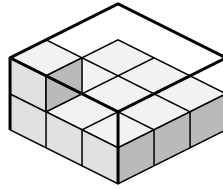


Déterminez le volume de chaque boîte. Chaque bloc correspond à 1 unité cubique (u³).

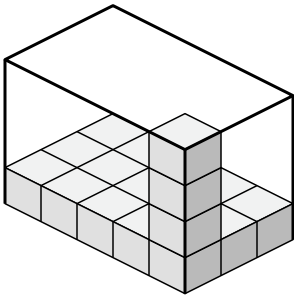
1)



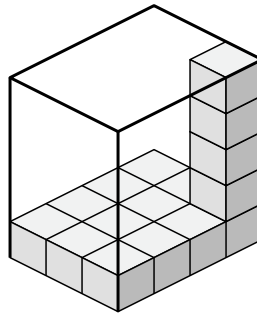
2)



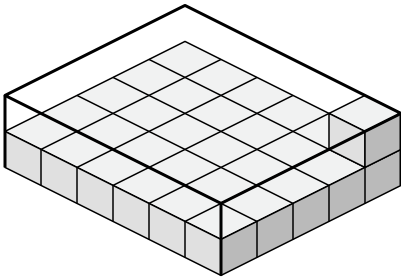
3)



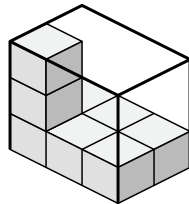
4)



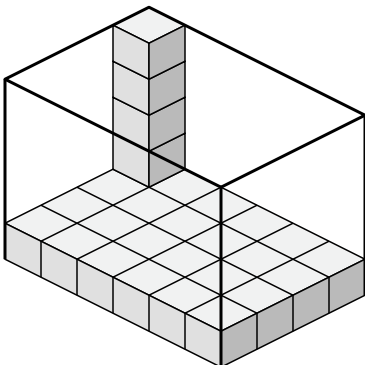
5)



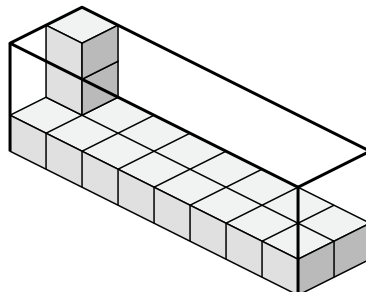
6)



7)



8)



Réponses

1. 27 u³

2. 18 u³

3. 60 u³

4. 60 u³

5. 60 u³

6. 18 u³

7. 120 u³

8. 48 u³