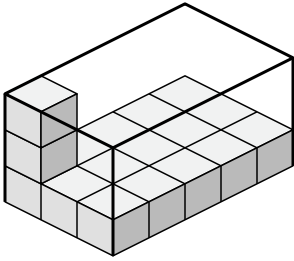




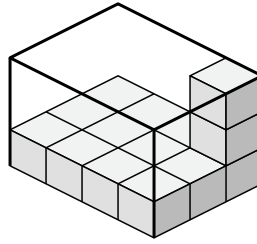
Déterminez le volume de chaque boîte. Chaque bloc correspond à 1 unité cubique (u³).

Réponses

1)



2)



1. _____

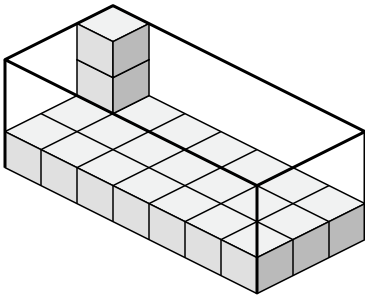
2. _____

3. _____

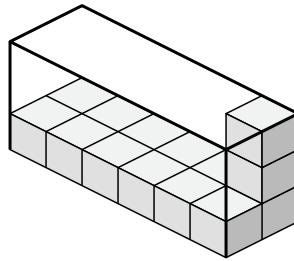
4. _____

5. _____

3)



4)

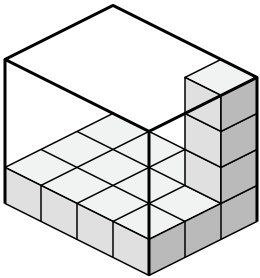


6. _____

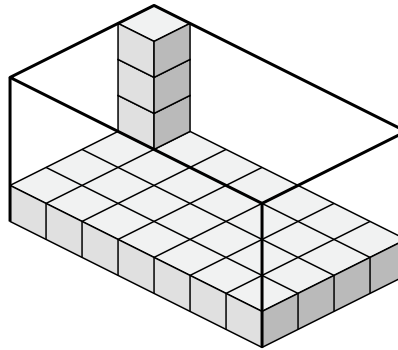
7. _____

8. _____

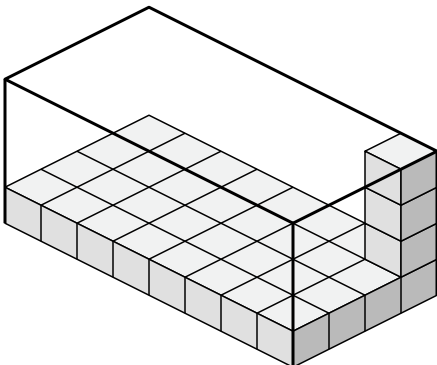
5)



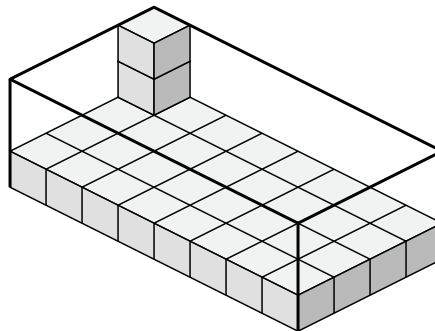
6)



7)



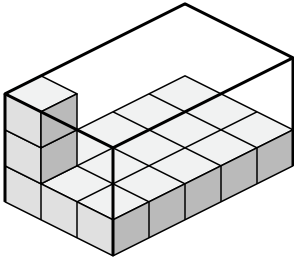
8)



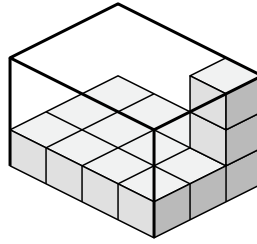


Déterminez le volume de chaque boîte. Chaque bloc correspond à 1 unité cubique (u³).

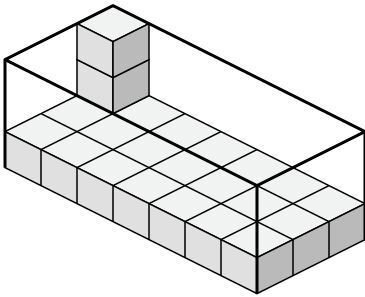
1)



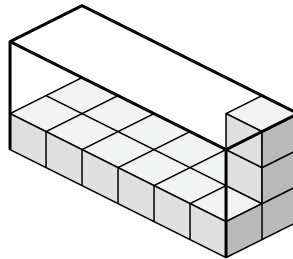
2)



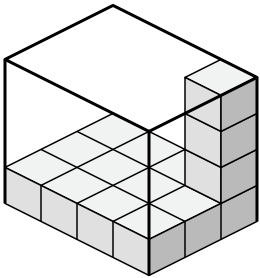
3)



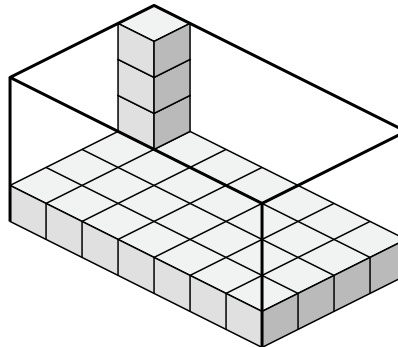
4)



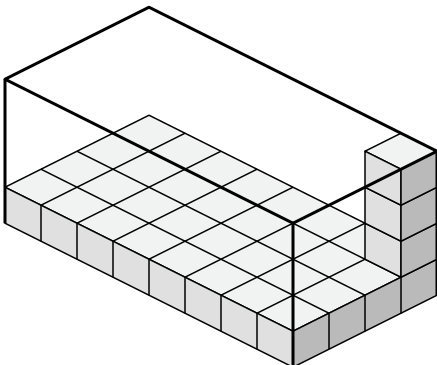
5)



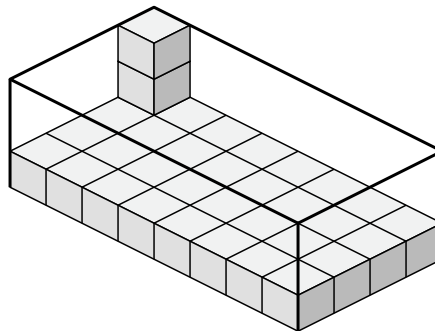
6)



7)



8)



Réponses

1. 45 u³

2. 36 u³

3. 63 u³

4. 36 u³

5. 48 u³

6. 112 u³

7. 128 u³

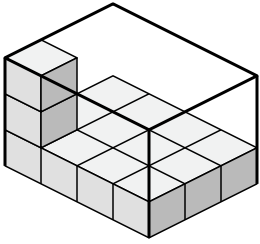
8. 96 u³



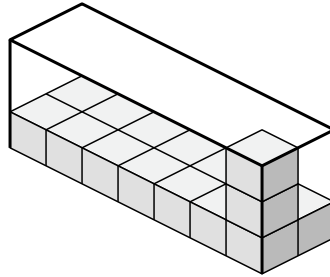
Déterminez le volume de chaque boîte. Chaque bloc correspond à 1 unité cubique (u 3).

Réponses

1)



2)



1. _____

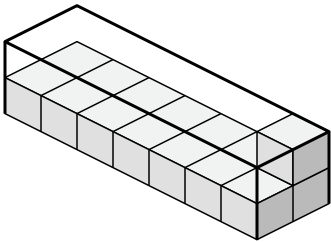
2. _____

3. _____

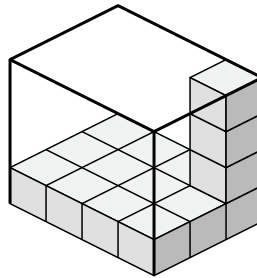
4. _____

5. _____

3)



4)

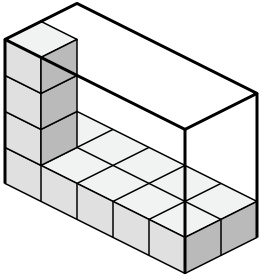


6. _____

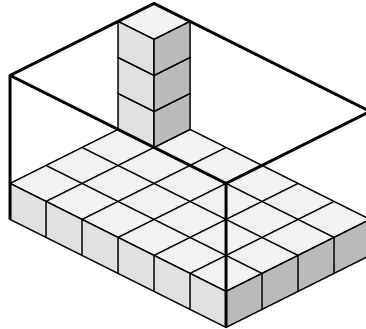
7. _____

8. _____

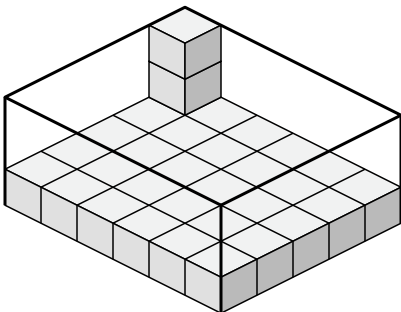
5)



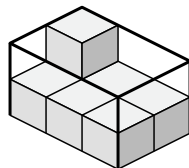
6)



7)



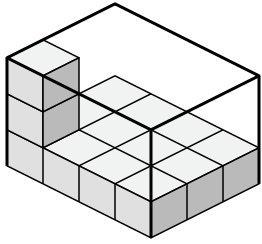
8)



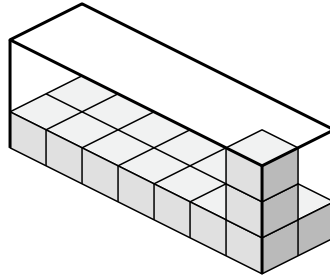


Déterminez le volume de chaque boîte. Chaque bloc correspond à 1 unité cubique (u³).

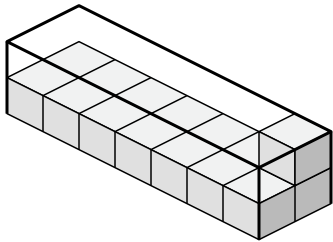
1)



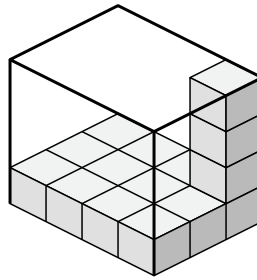
2)



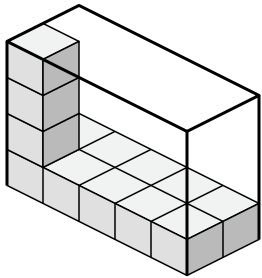
3)



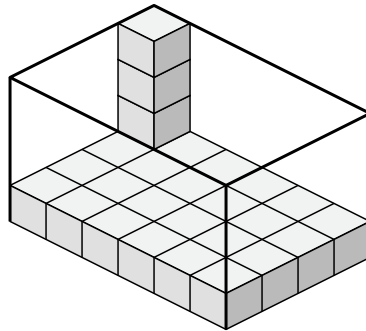
4)



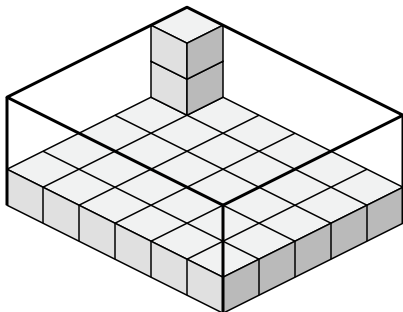
5)



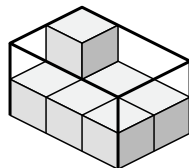
6)



7)



8)



Réponses

1. 36 u³

2. 42 u³

3. 28 u³

4. 48 u³

5. 40 u³

6. 96 u³

7. 90 u³

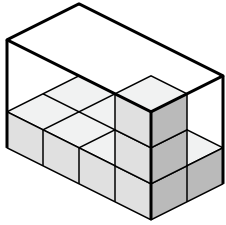
8. 12 u³



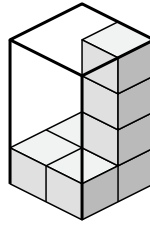
Déterminez le volume de chaque boîte. Chaque bloc correspond à 1 unité cubique (u 3).

Réponses

1)



2)



1. _____

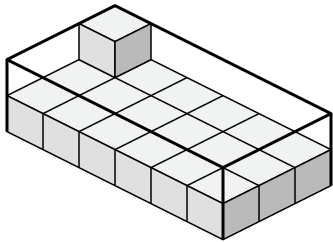
2. _____

3. _____

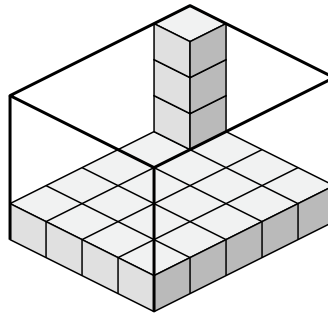
4. _____

5. _____

3)



4)

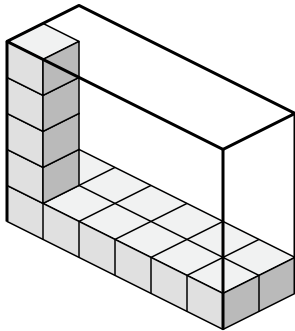


6. _____

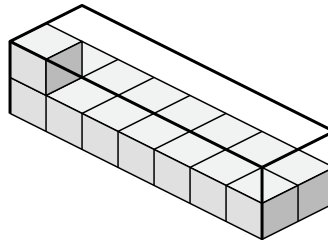
7. _____

8. _____

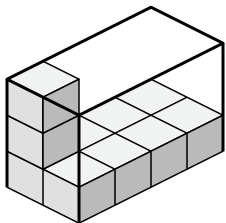
5)



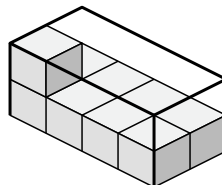
6)



7)



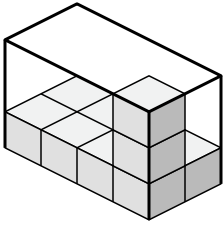
8)



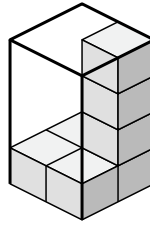


Déterminez le volume de chaque boîte. Chaque bloc correspond à 1 unité cubique (u³).

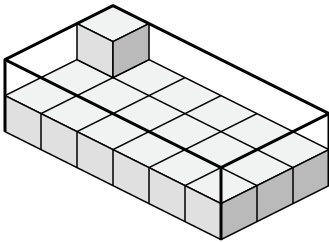
1)



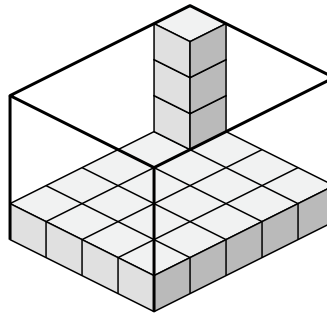
2)



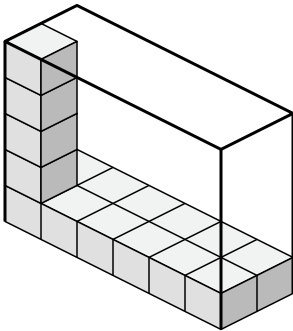
3)



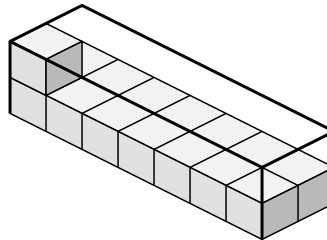
4)



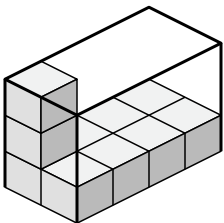
5)



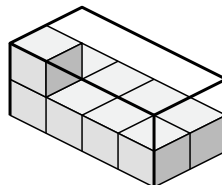
6)



7)



8)



Réponses

1. 24 u³

2. 16 u³

3. 36 u³

4. 80 u³

5. 60 u³

6. 28 u³

7. 24 u³

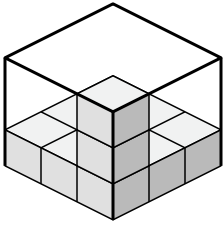
8. 16 u³



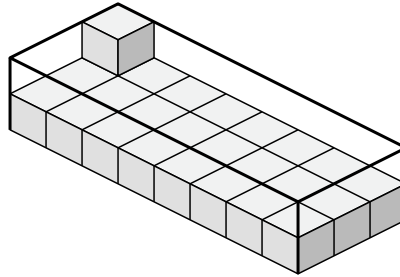
Déterminez le volume de chaque boîte. Chaque bloc correspond à 1 unité cubique (u 3).

Réponses

1)



2)



1. _____

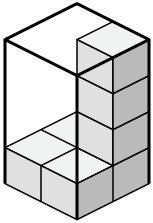
2. _____

3. _____

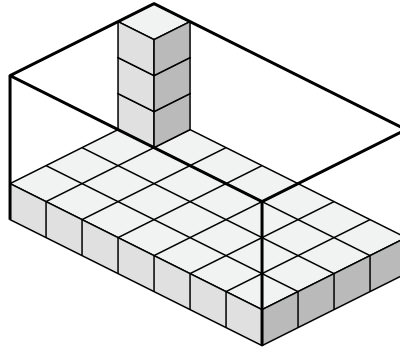
4. _____

5. _____

3)



4)

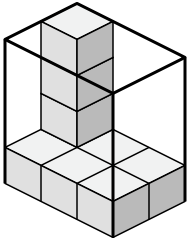


6. _____

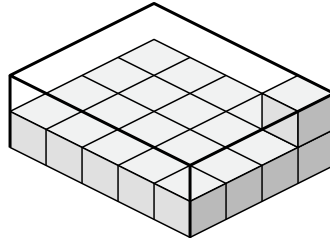
7. _____

8. _____

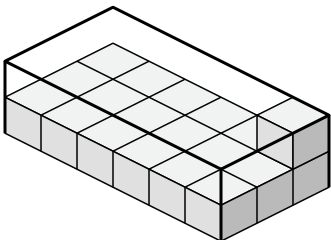
5)



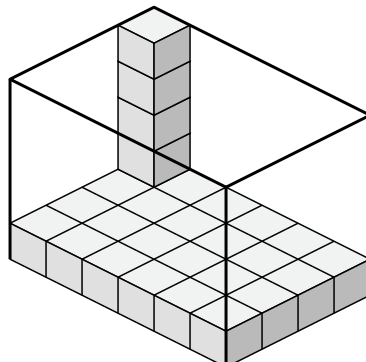
6)



7)



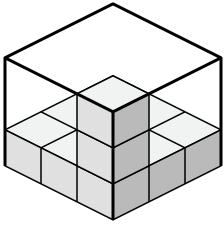
8)



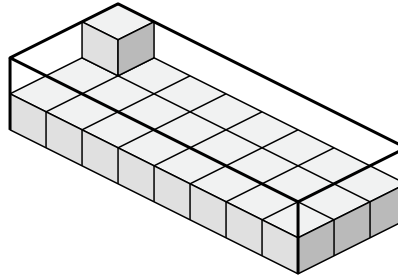


Déterminez le volume de chaque boîte. Chaque bloc correspond à 1 unité cubique (u³).

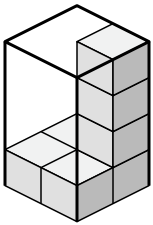
1)



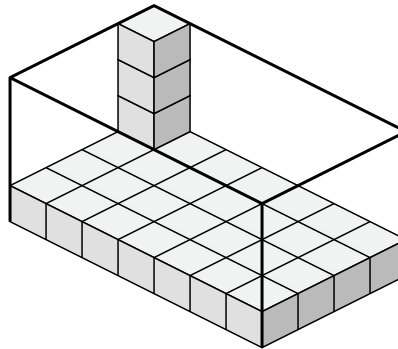
2)



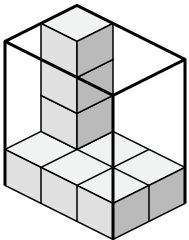
3)



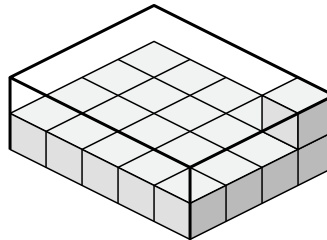
4)



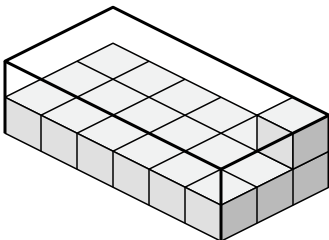
5)



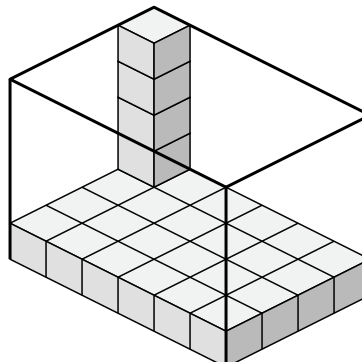
6)



7)



8)



Réponses

1. 27 u³

2. 48 u³

3. 16 u³

4. 112 u³

5. 24 u³

6. 40 u³

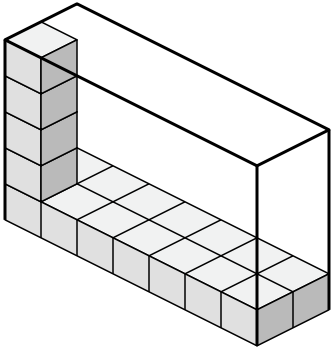
7. 36 u³

8. 120 u³

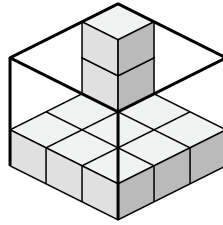


Déterminez le volume de chaque boîte. Chaque bloc correspond à 1 unité cubique (u 3).

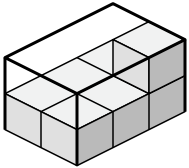
1)



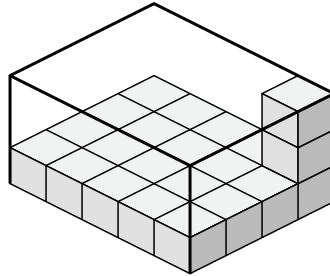
2)



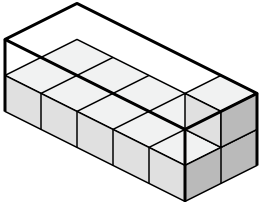
3)



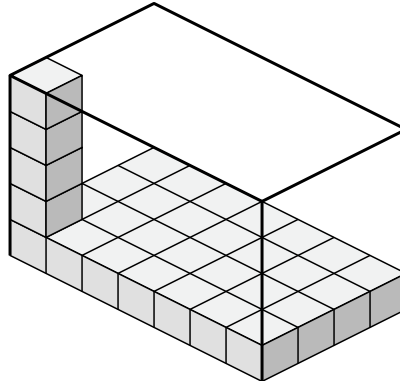
4)



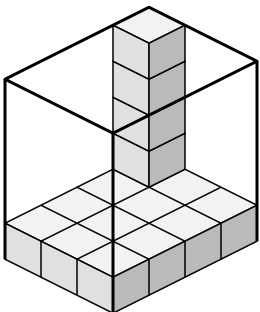
5)



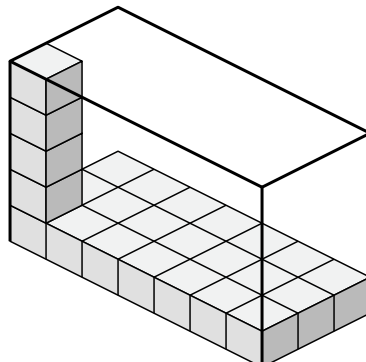
6)



7)



8)



Réponses

1. _____

2. _____

3. _____

4. _____

5. _____

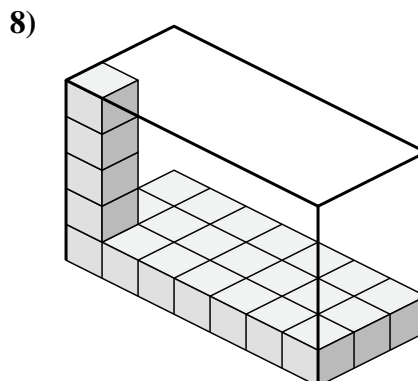
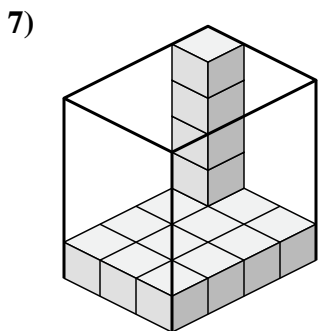
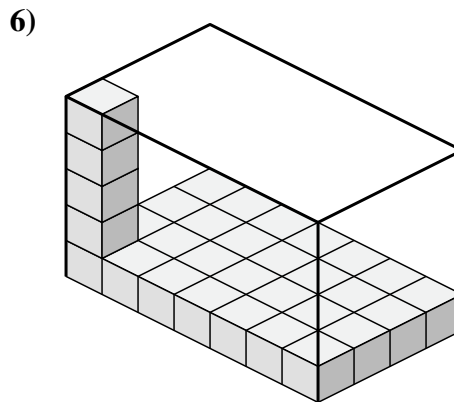
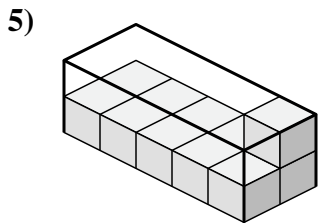
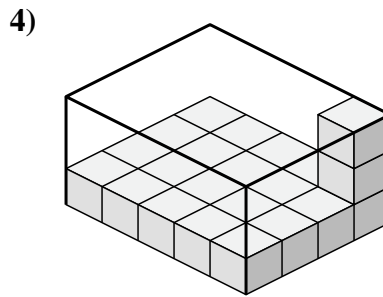
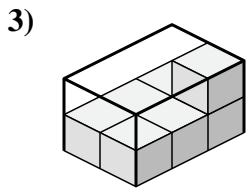
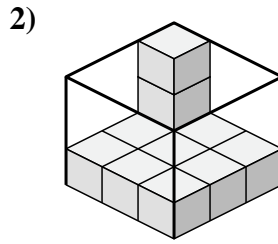
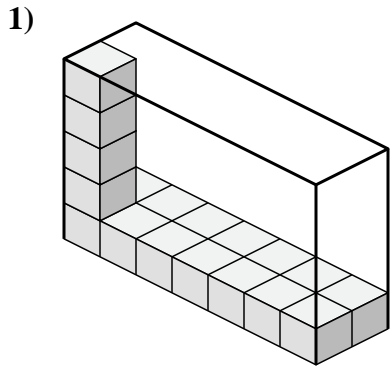
6. _____

7. _____

8. _____



Déterminez le volume de chaque boîte. Chaque bloc correspond à 1 unité cubique (u³).



Réponses

1. 70 u³

2. 27 u³

3. 12 u³

4. 60 u³

5. 20 u³

6. 140 u³

7. 60 u³

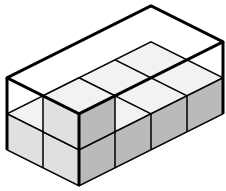
8. 105 u³



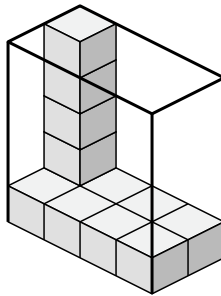
Déterminez le volume de chaque boîte. Chaque bloc correspond à 1 unité cubique (u³).

Réponses

1)



2)



1. _____

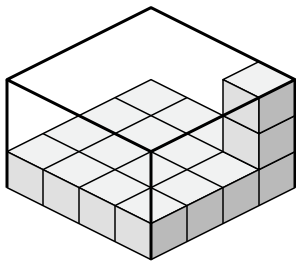
2. _____

3. _____

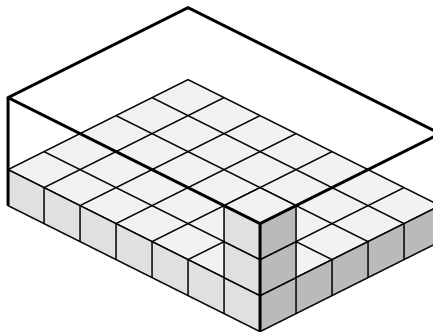
4. _____

5. _____

3)



4)

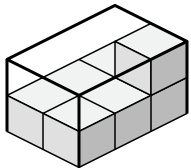


6. _____

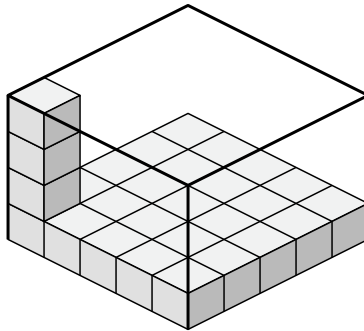
7. _____

8. _____

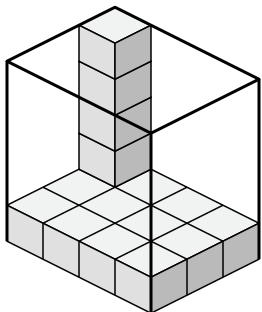
5)



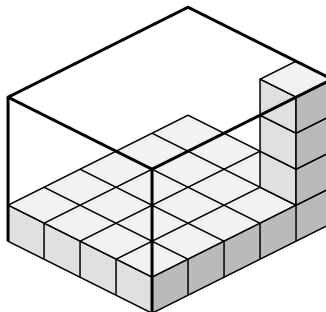
6)



7)



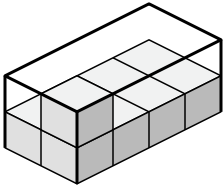
8)



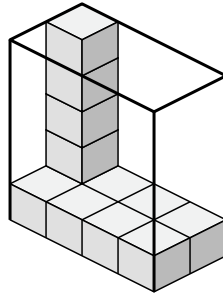


Déterminez le volume de chaque boîte. Chaque bloc correspond à 1 unité cubique (u³).

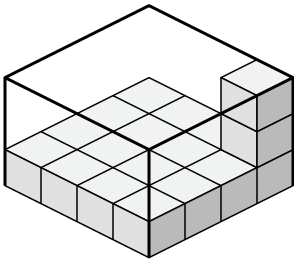
1)



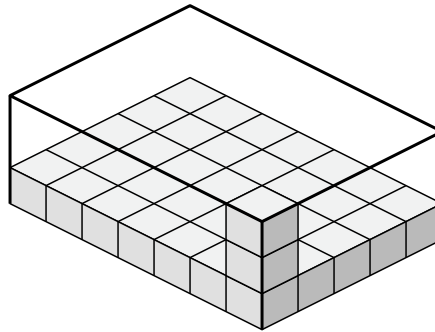
2)



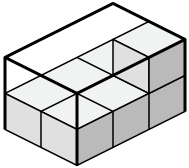
3)



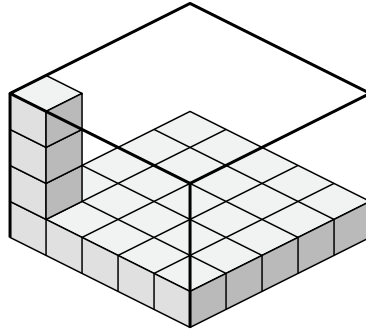
4)



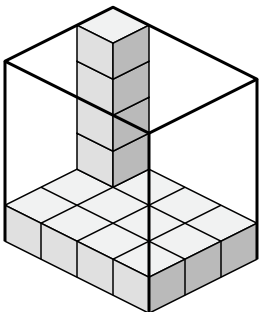
5)



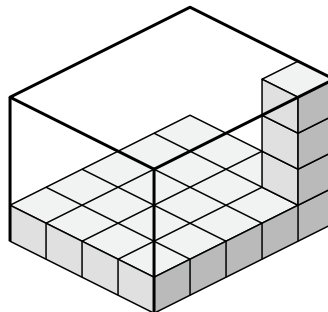
6)



7)



8)



Réponses

1. 16 u³

2. 40 u³

3. 48 u³

4. 105 u³

5. 12 u³

6. 100 u³

7. 60 u³

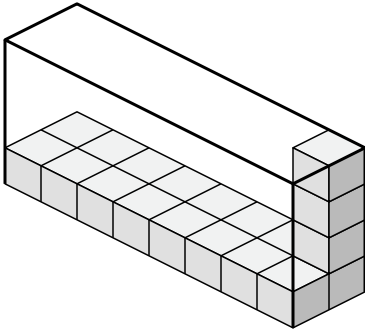
8. 80 u³



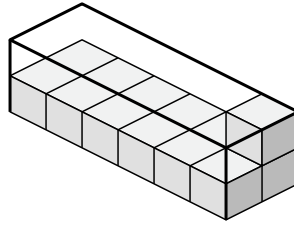
Déterminez le volume de chaque boîte. Chaque bloc correspond à 1 unité cubique (u 3).

Réponses

1)



2)



1. _____

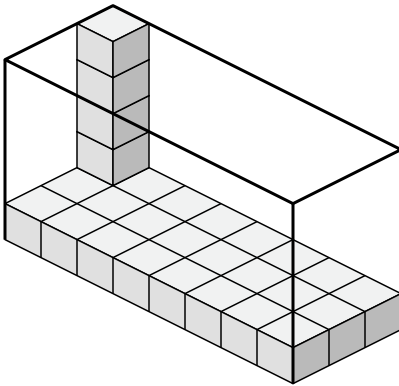
2. _____

3. _____

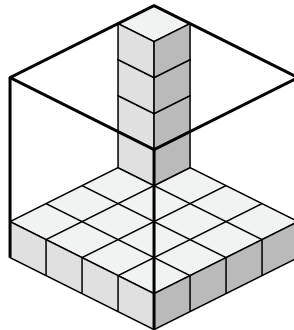
4. _____

5. _____

3)



4)

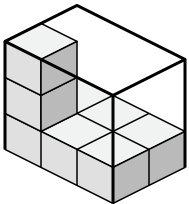


6. _____

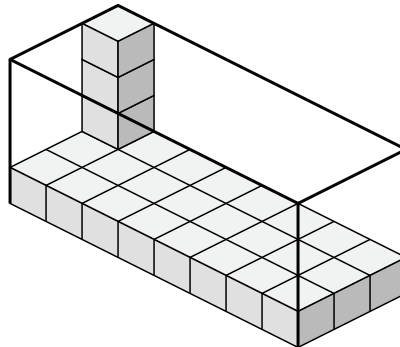
7. _____

8. _____

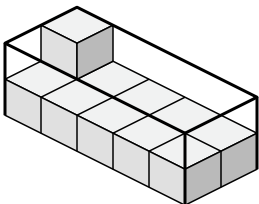
5)



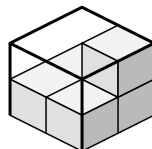
6)



7)



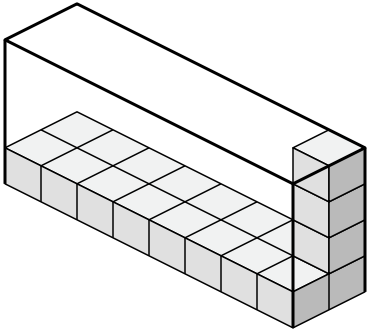
8)



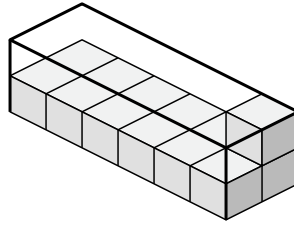


Déterminez le volume de chaque boîte. Chaque bloc correspond à 1 unité cubique (u³).

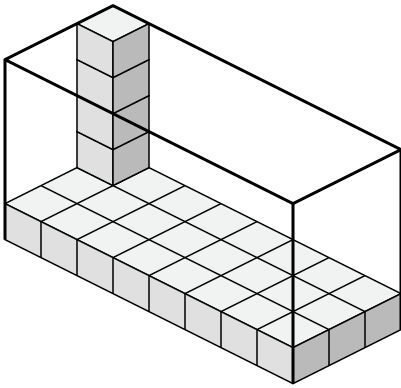
1)



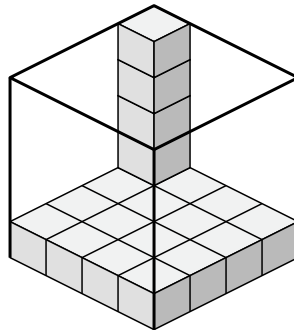
2)



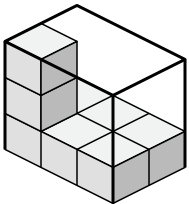
3)



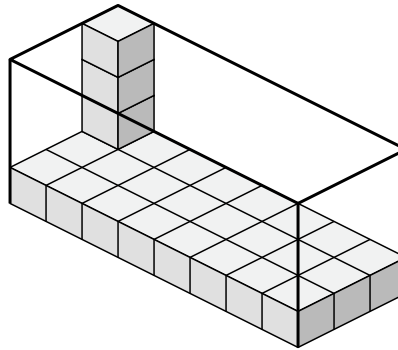
4)



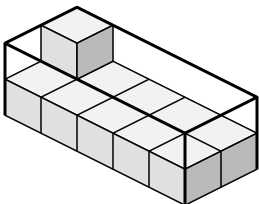
5)



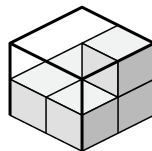
6)



7)



8)



Réponses

1. **64 u³**

2. **24 u³**

3. **120 u³**

4. **80 u³**

5. **18 u³**

6. **96 u³**

7. **20 u³**

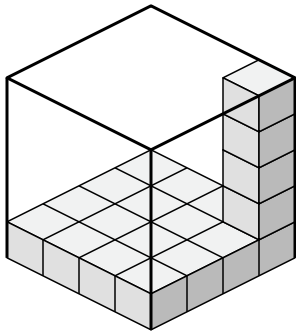
8. **8 u³**



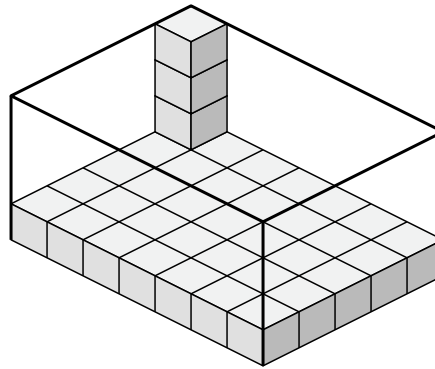
Déterminez le volume de chaque boîte. Chaque bloc correspond à 1 unité cubique (u³).

Réponses

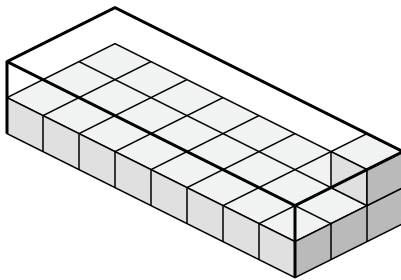
1)



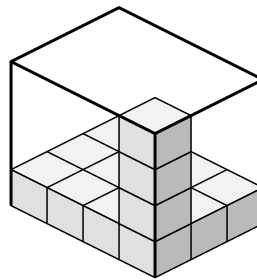
2)



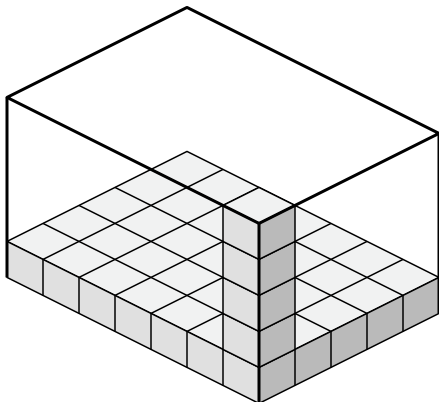
3)



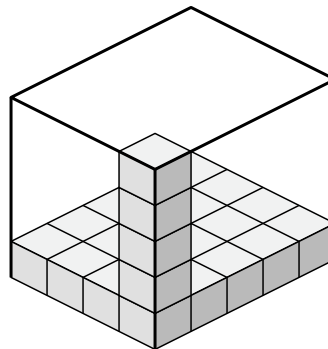
4)



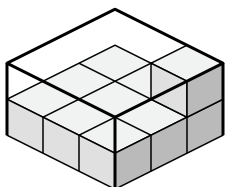
5)



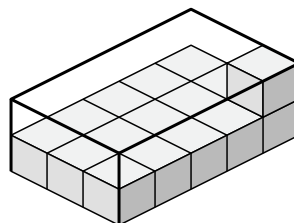
6)



7)



8)

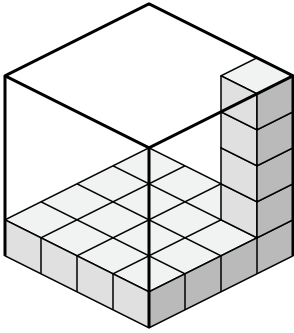


- 1. _____
- 2. _____
- 3. _____
- 4. _____
- 5. _____
- 6. _____
- 7. _____
- 8. _____

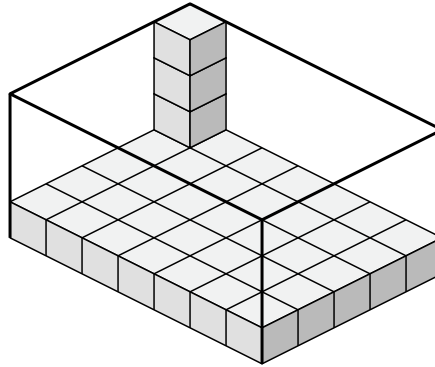


Déterminez le volume de chaque boîte. Chaque bloc correspond à 1 unité cubique (u³).

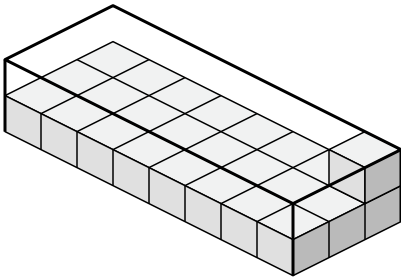
1)



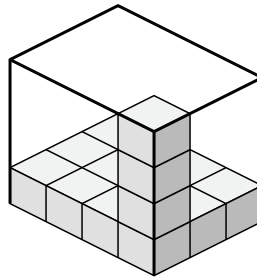
2)



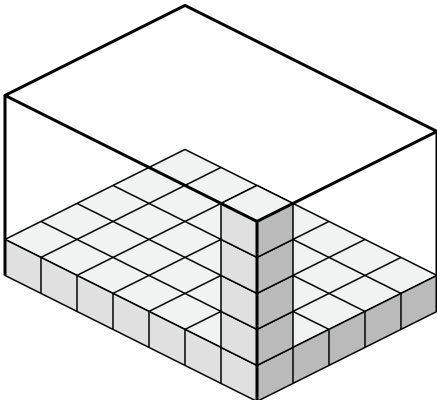
3)



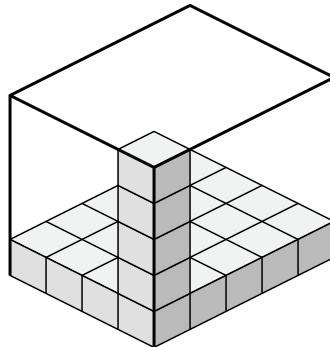
4)



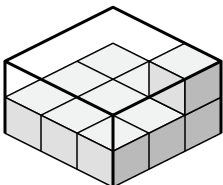
5)



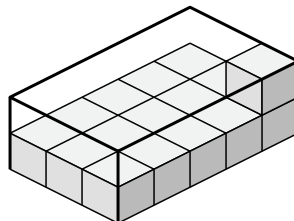
6)



7)



8)



Réponses

1. **80 u³**

2. **140 u³**

3. **48 u³**

4. **48 u³**

5. **175 u³**

6. **100 u³**

7. **18 u³**

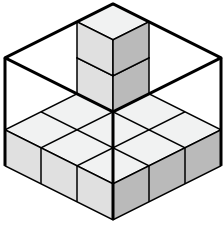
8. **30 u³**



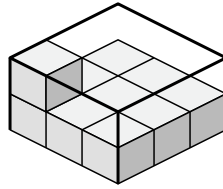
Déterminez le volume de chaque boîte. Chaque bloc correspond à 1 unité cubique (u³).

Réponses

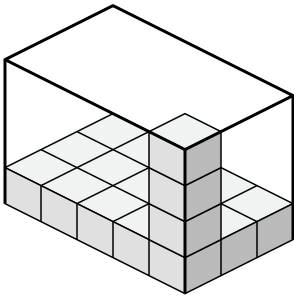
1)



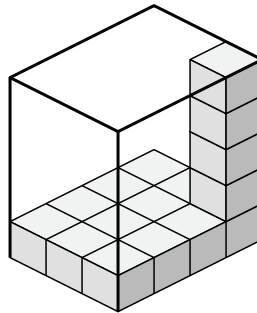
2)



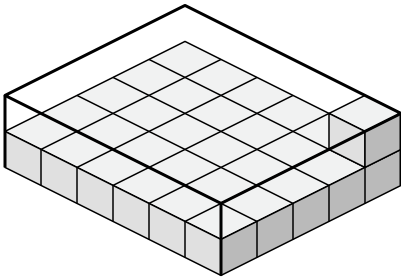
3)



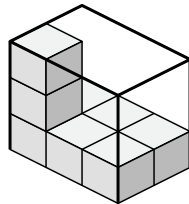
4)



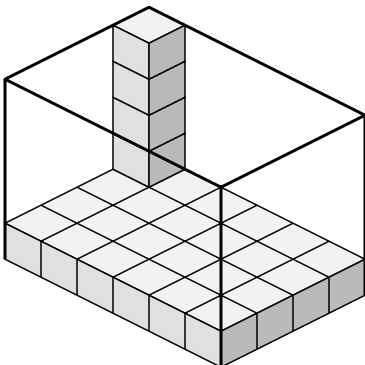
5)



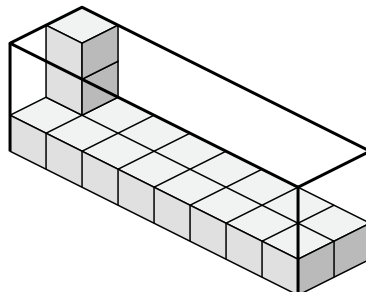
6)



7)



8)



1. _____

2. _____

3. _____

4. _____

5. _____

6. _____

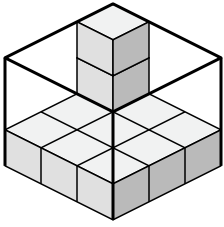
7. _____

8. _____

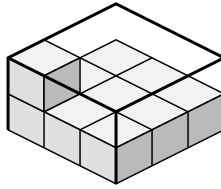


Déterminez le volume de chaque boîte. Chaque bloc correspond à 1 unité cubique (u³).

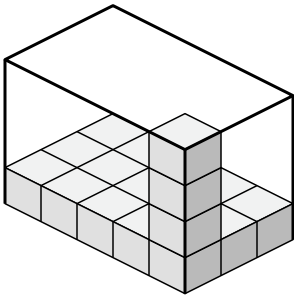
1)



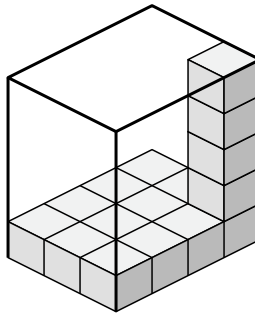
2)



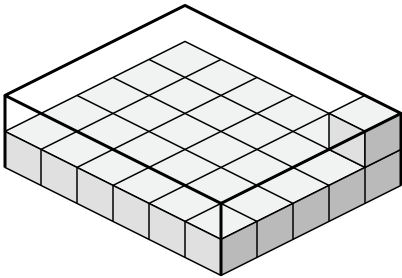
3)



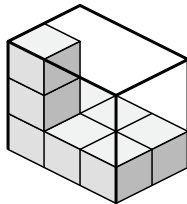
4)



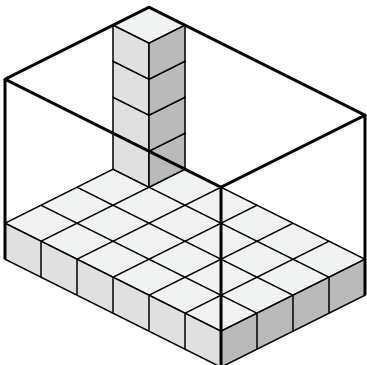
5)



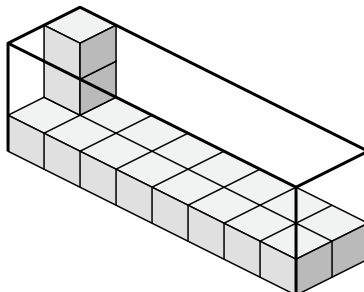
6)



7)



8)



Réponses

1. 27 u³

2. 18 u³

3. 60 u³

4. 60 u³

5. 60 u³

6. 18 u³

7. 120 u³

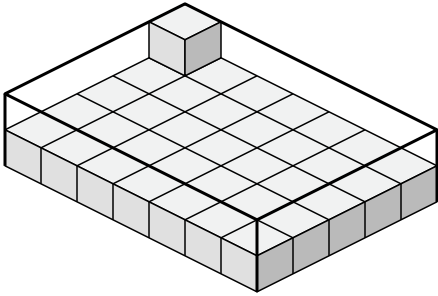
8. 48 u³



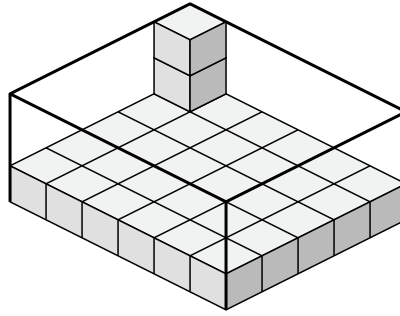
Déterminez le volume de chaque boîte. Chaque bloc correspond à 1 unité cubique (u³).

Réponses

1)



2)



1. _____

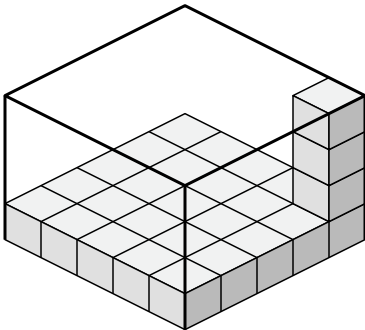
2. _____

3. _____

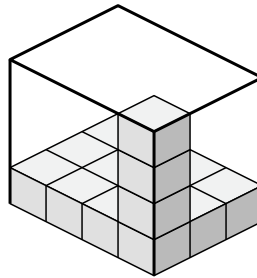
4. _____

5. _____

3)



4)

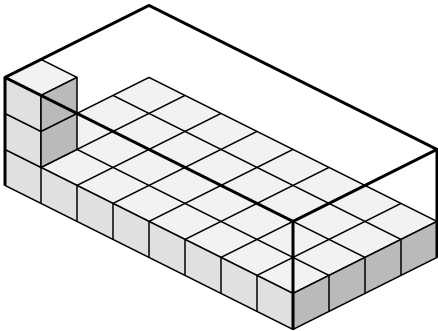


6. _____

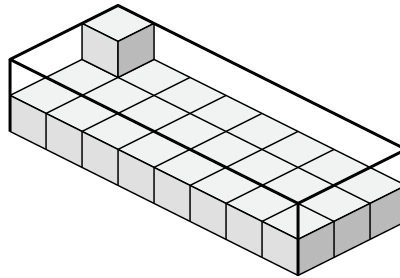
7. _____

8. _____

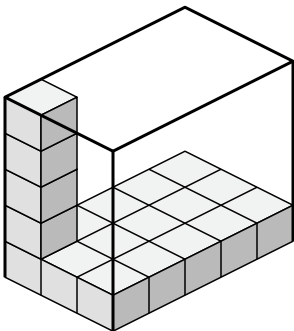
5)



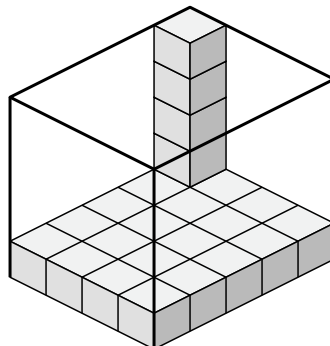
6)



7)



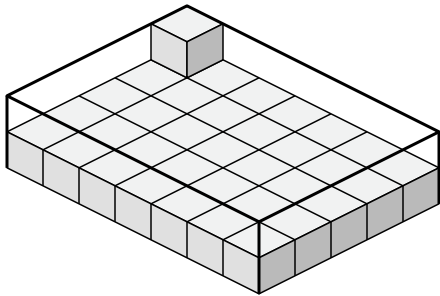
8)



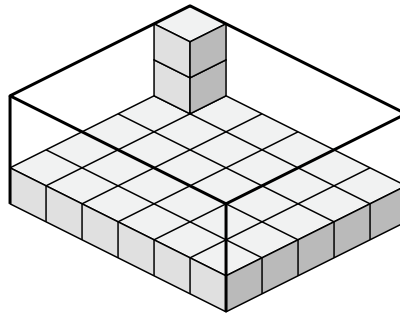


Déterminez le volume de chaque boîte. Chaque bloc correspond à 1 unité cubique (u³).

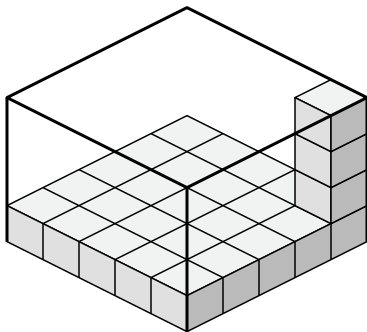
1)



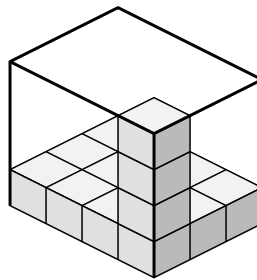
2)



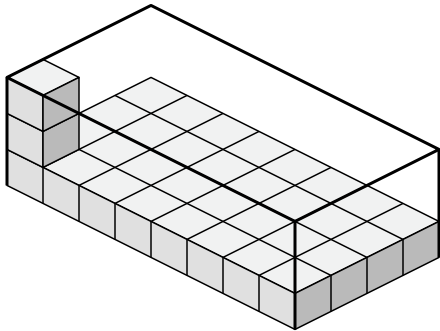
3)



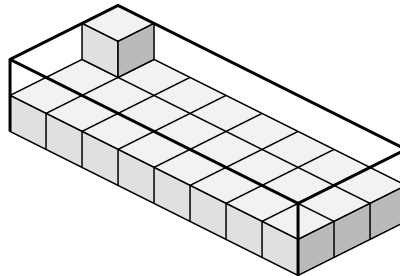
4)



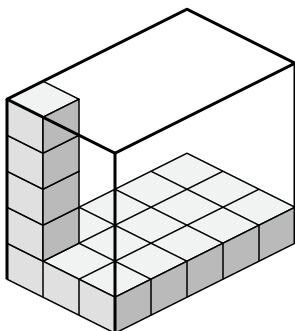
5)



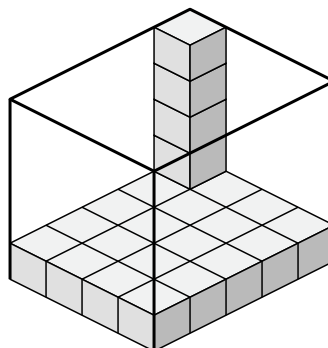
6)



7)



8)



Réponses

1. 70 u³

2. 90 u³

3. 100 u³

4. 48 u³

5. 96 u³

6. 48 u³

7. 75 u³

8. 100 u³