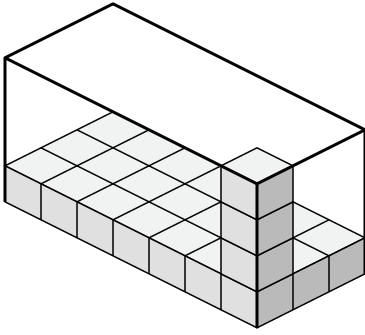




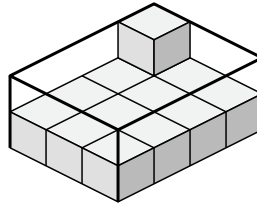
Déterminez le volume de chaque boîte. Chaque bloc correspond à 1 unité cubique (u³).

Réponses

1)



2)



1. _____

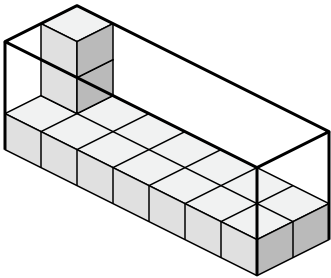
2. _____

3. _____

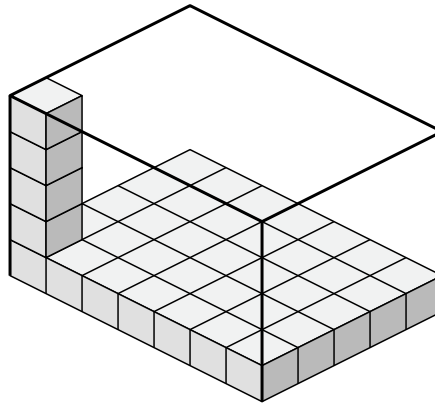
4. _____

5. _____

3)



4)

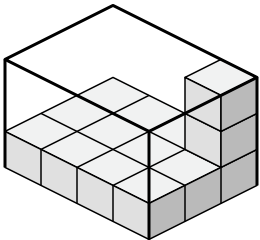


6. _____

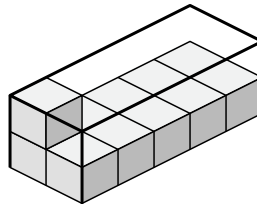
7. _____

8. _____

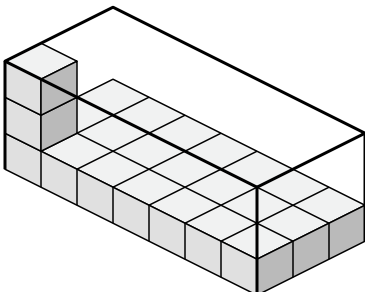
5)



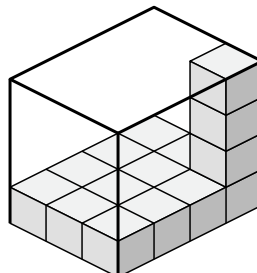
6)



7)



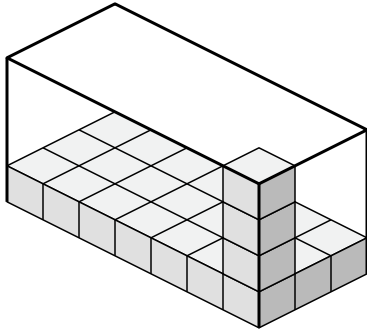
8)



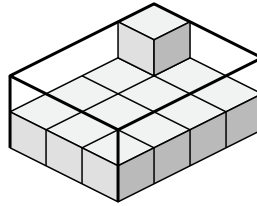


Déterminez le volume de chaque boîte. Chaque bloc correspond à 1 unité cubique (u³).

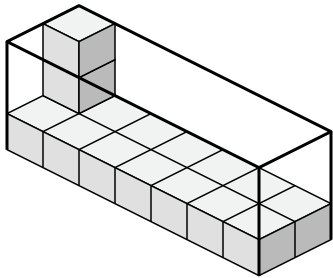
1)



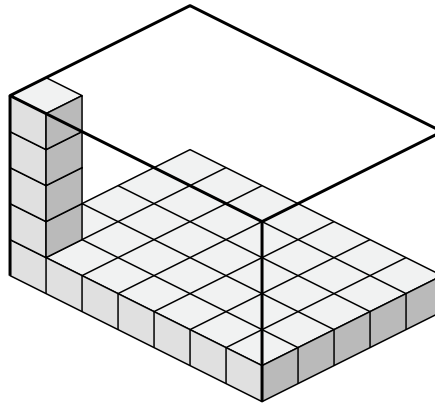
2)



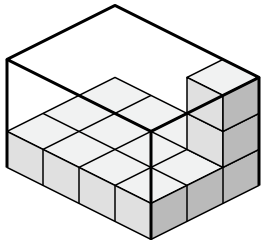
3)



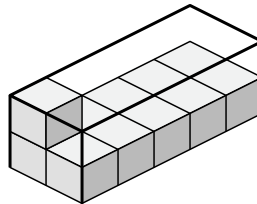
4)



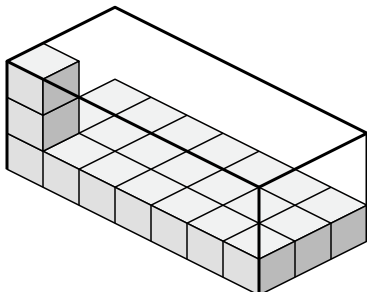
5)



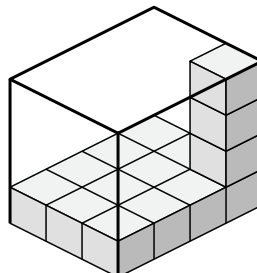
6)



7)



8)



Réponses

1. **84 u³**

2. **24 u³**

3. **42 u³**

4. **175 u³**

5. **36 u³**

6. **20 u³**

7. **63 u³**

8. **48 u³**