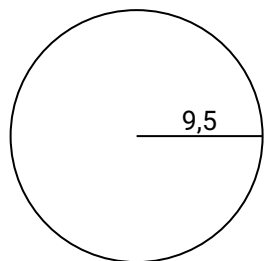


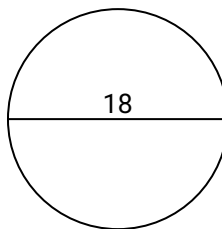


Calculez l'aire et la circonférence de chaque cercle. Les cercles ne sont pas à l'échelle.

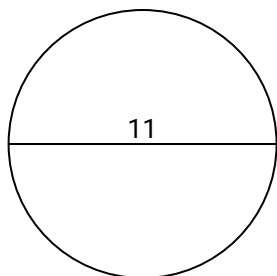
1)



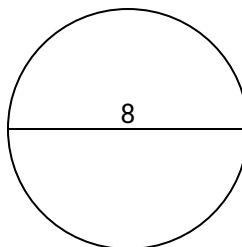
2)



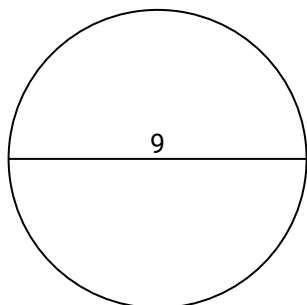
3)



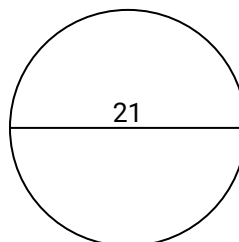
4)



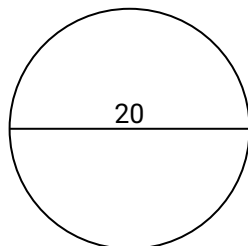
5)



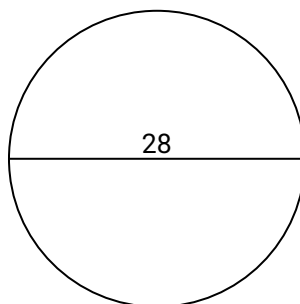
6)



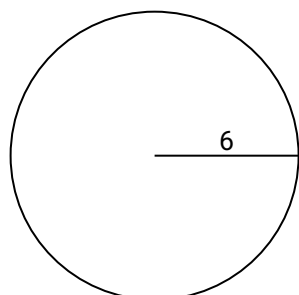
7)



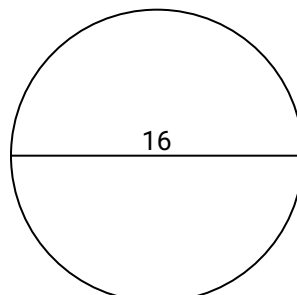
8)



9)



10)

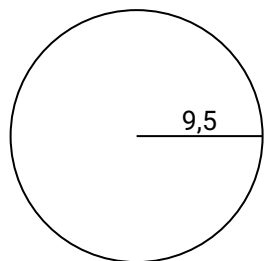
**Réponses**

1. _____
2. _____
3. _____
4. _____
5. _____
6. _____
7. _____
8. _____
9. _____
10. _____

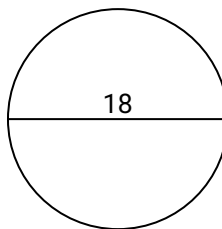


Calculez l'aire et la circonférence de chaque cercle. Les cercles ne sont pas à l'échelle.

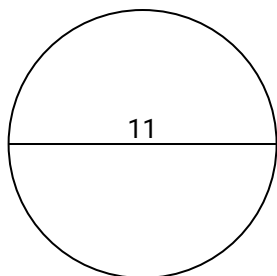
1)



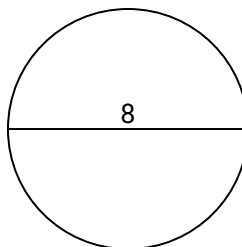
2)



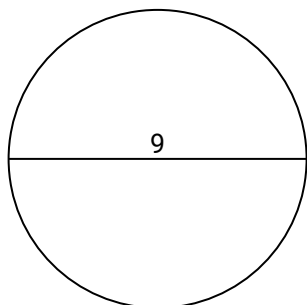
3)



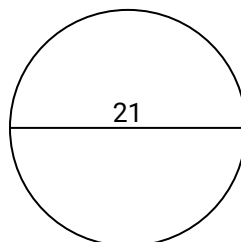
4)



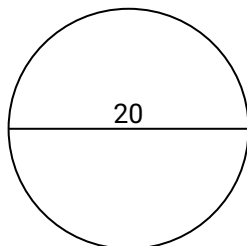
5)



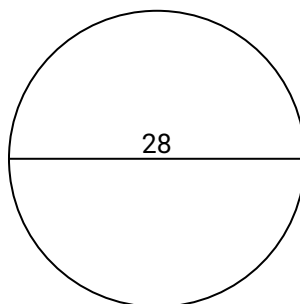
6)



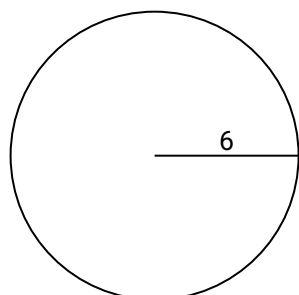
7)



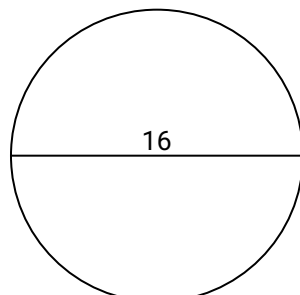
8)



9)



10)

**Réponses**

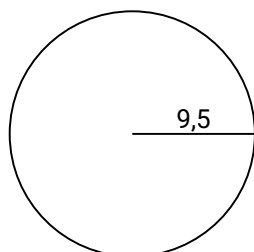
1.	<u>283,5</u>	<u>59,7</u>
2.	<u>254,5</u>	<u>56,5</u>
3.	<u>95</u>	<u>34,6</u>
4.	<u>50,3</u>	<u>25,1</u>
5.	<u>63,6</u>	<u>28,3</u>
6.	<u>346,4</u>	<u>66</u>
7.	<u>314,2</u>	<u>62,8</u>
8.	<u>615,8</u>	<u>88</u>
9.	<u>113,1</u>	<u>37,7</u>
10.	<u>201,1</u>	<u>50,3</u>



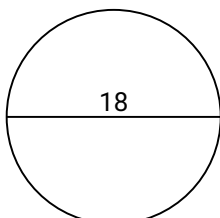
Calculez l'aire et la circonférence de chaque cercle. Les cercles ne sont pas à l'échelle.

88	95	25,1	59,7	50,3	113,1
283,5	56,5	34,6	28,3	346,4	254,5
615,8	63,6	37,7	66	314,2	62,8

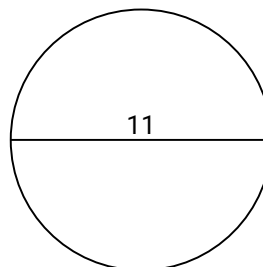
1)



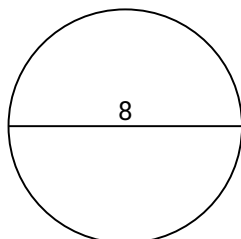
2)



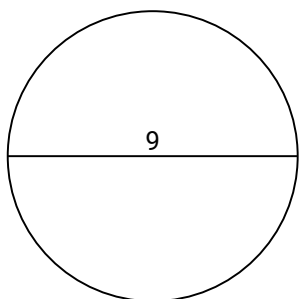
3)



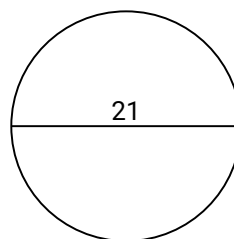
4)



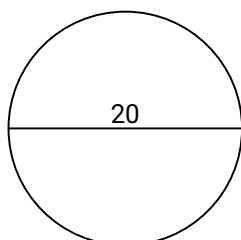
5)



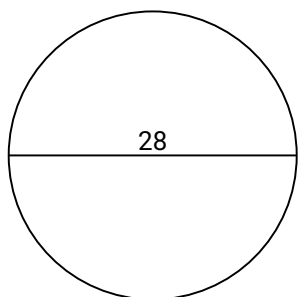
6)



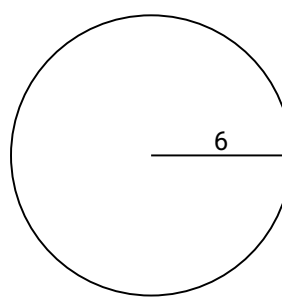
7)



8)



9)

**Réponses**

1. _____
2. _____
3. _____
4. _____
5. _____
6. _____
7. _____
8. _____
9. _____
10. _____