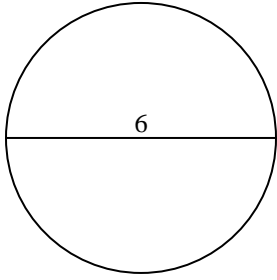


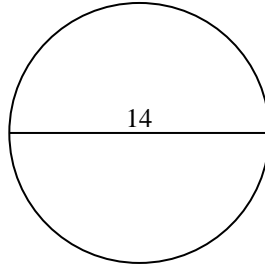


Calculez l'aire et la circonférence de chaque cercle. Les cercles ne sont pas à l'échelle.

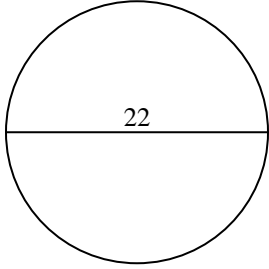
1)



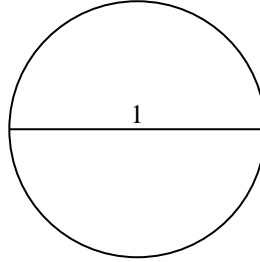
2)



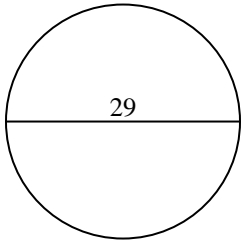
3)



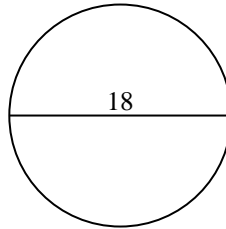
4)



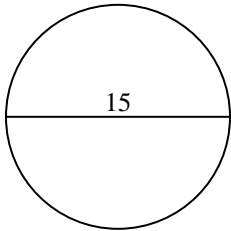
5)



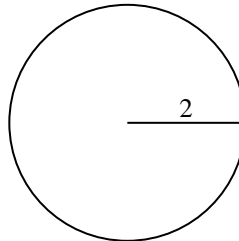
6)



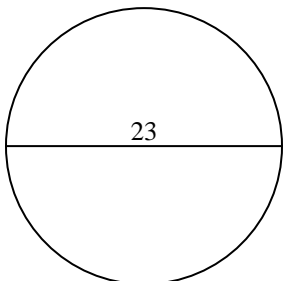
7)



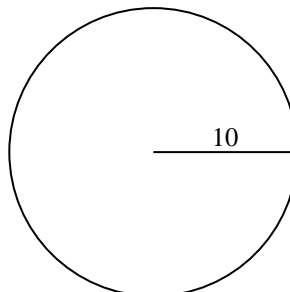
8)



9)



10)



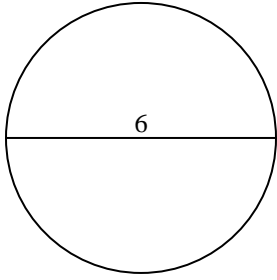
**Réponses**

- 1. \_\_\_\_\_
- 2. \_\_\_\_\_
- 3. \_\_\_\_\_
- 4. \_\_\_\_\_
- 5. \_\_\_\_\_
- 6. \_\_\_\_\_
- 7. \_\_\_\_\_
- 8. \_\_\_\_\_
- 9. \_\_\_\_\_
- 10. \_\_\_\_\_

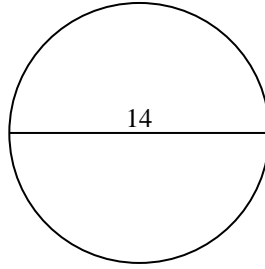


Calculez l'aire et la circonférence de chaque cercle. Les cercles ne sont pas à l'échelle.

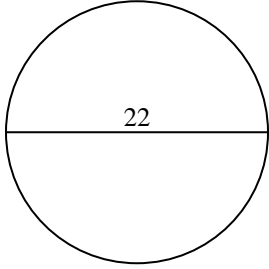
1)



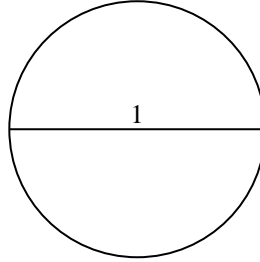
2)



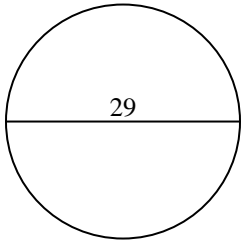
3)



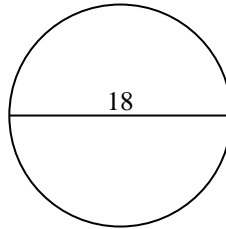
4)



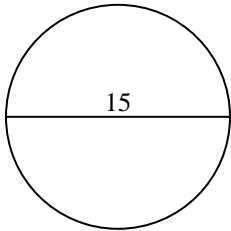
5)



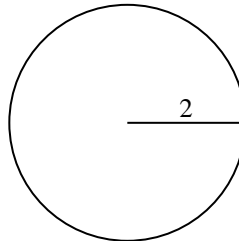
6)



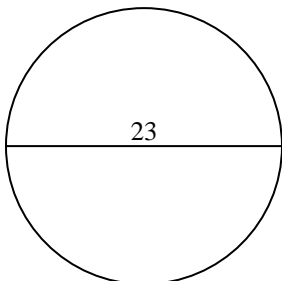
7)



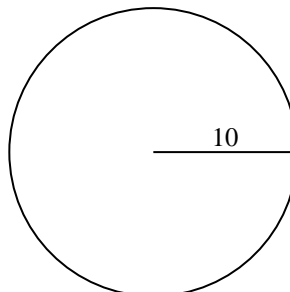
8)



9)



10)

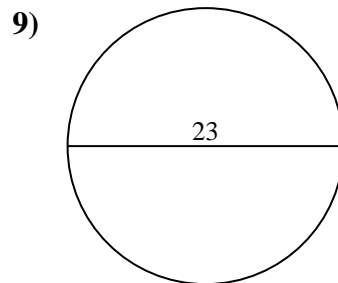
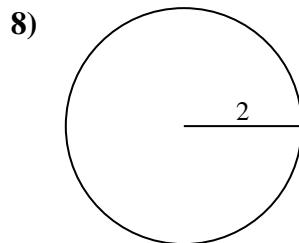
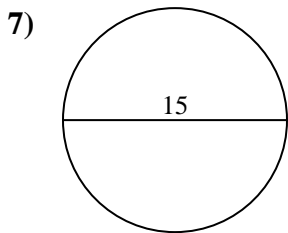
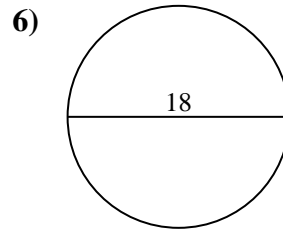
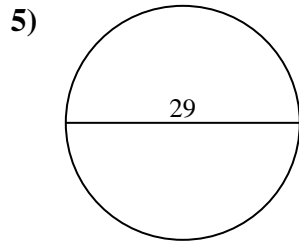
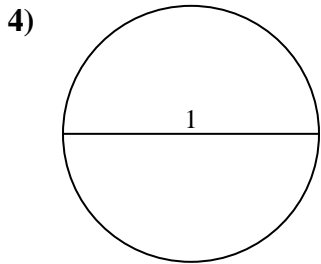
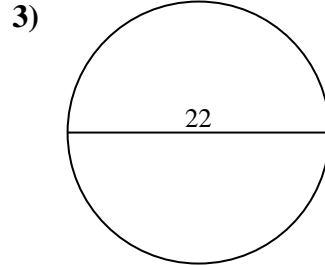
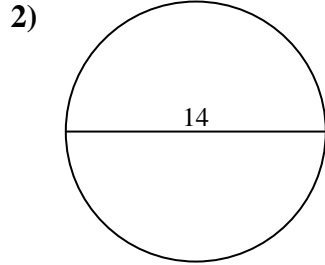
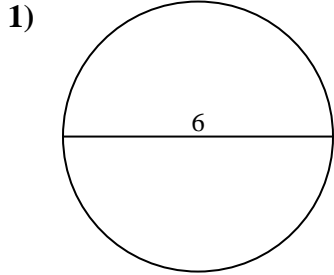
**Réponses**

1.	<u>28,3</u>	<u>18,8</u>
2.	<u>153,9</u>	<u>44</u>
3.	<u>380,1</u>	<u>69,1</u>
4.	<u>0,8</u>	<u>3,1</u>
5.	<u>660,5</u>	<u>91,1</u>
6.	<u>254,5</u>	<u>56,5</u>
7.	<u>176,7</u>	<u>47,1</u>
8.	<u>12,6</u>	<u>12,6</u>
9.	<u>415,5</u>	<u>72,3</u>
10.	<u>314,2</u>	<u>62,8</u>



Calculez l'aire et la circonférence de chaque cercle. Les cercles ne sont pas à l'échelle.

12,6	660,5	44	415,5	91,1
56,5	12,6	176,7	18,8	47,1
3,1	69,1	380,1	0,8	72,3
254,5	28,3	153,9		



**Réponses**

1. \_\_\_\_\_
2. \_\_\_\_\_
3. \_\_\_\_\_
4. \_\_\_\_\_
5. \_\_\_\_\_
6. \_\_\_\_\_
7. \_\_\_\_\_
8. \_\_\_\_\_
9. \_\_\_\_\_