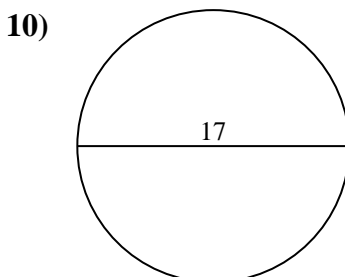
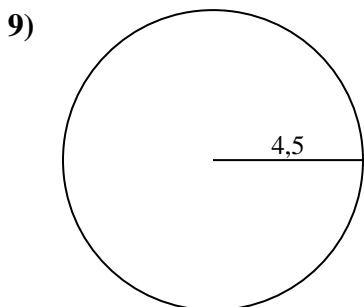
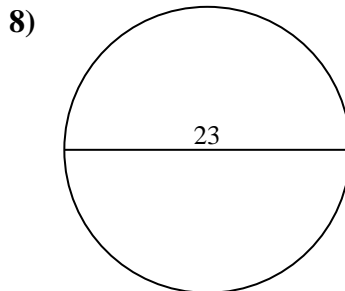
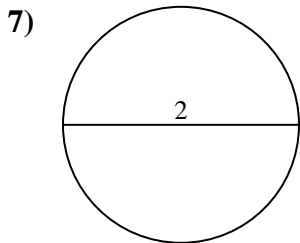
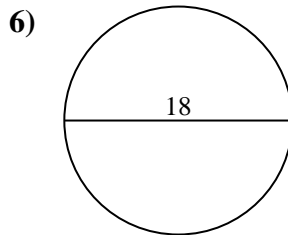
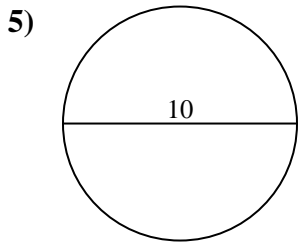
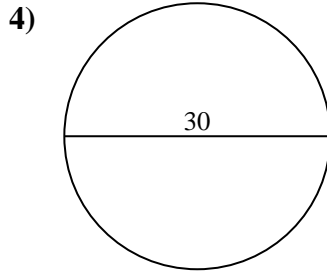
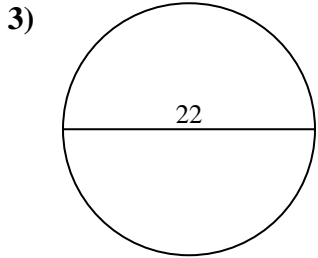
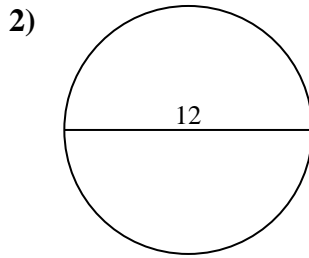
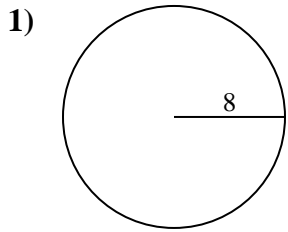




Calculez l'aire et la circonférence de chaque cercle. Les cercles ne sont pas à l'échelle.

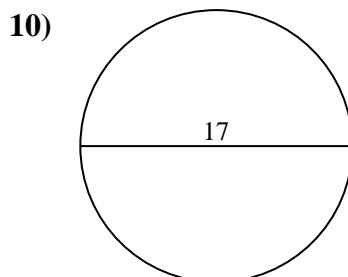
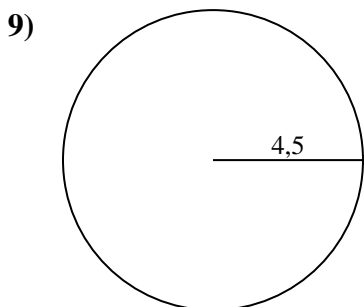
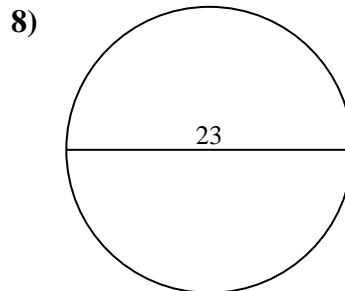
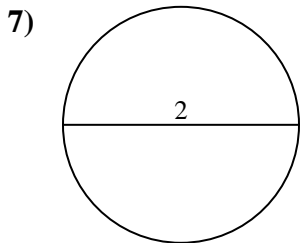
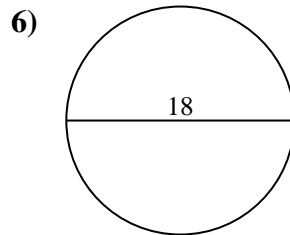
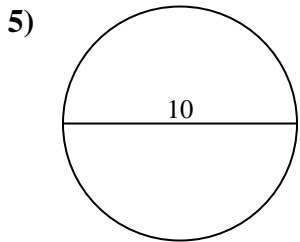
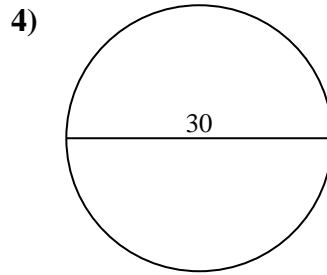
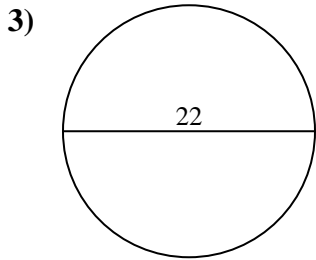
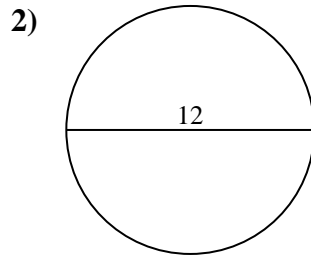
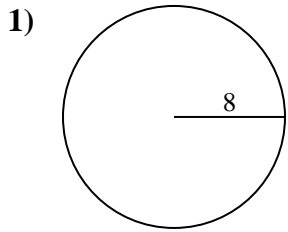


Réponses

- 1. _____
- 2. _____
- 3. _____
- 4. _____
- 5. _____
- 6. _____
- 7. _____
- 8. _____
- 9. _____
- 10. _____



Calculez l'aire et la circonférence de chaque cercle. Les cercles ne sont pas à l'échelle.



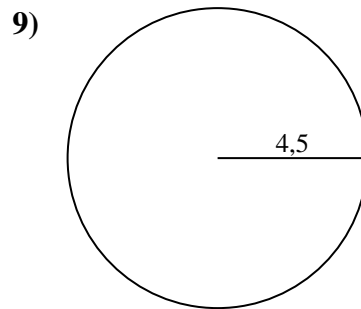
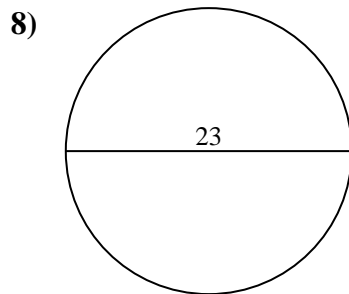
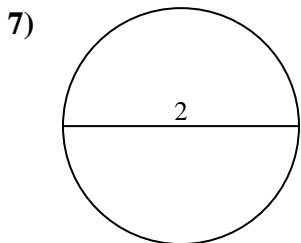
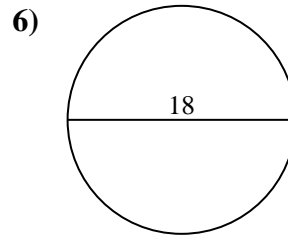
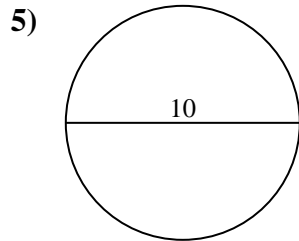
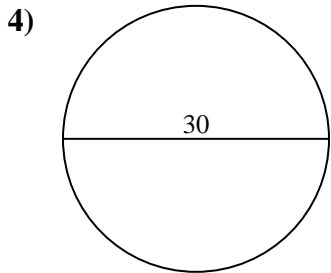
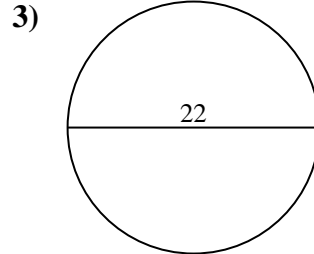
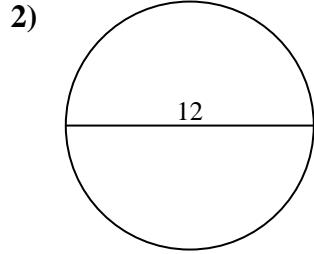
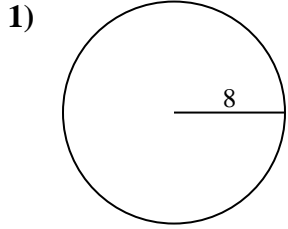
Réponses

1.	<u>201,1</u>	<u>50,3</u>
2.	<u>113,1</u>	<u>37,7</u>
3.	<u>380,1</u>	<u>69,1</u>
4.	<u>706,9</u>	<u>94,2</u>
5.	<u>78,5</u>	<u>31,4</u>
6.	<u>254,5</u>	<u>56,5</u>
7.	<u>3,1</u>	<u>6,3</u>
8.	<u>415,5</u>	<u>72,3</u>
9.	<u>63,6</u>	<u>28,3</u>
10.	<u>227</u>	<u>53,4</u>



Calculez l'aire et la circonférence de chaque cercle. Les cercles ne sont pas à l'échelle.

380,1	3,1	113,1	254,5	706,9
72,3	6,3	94,2	201,1	31,4
415,5	69,1	56,5	63,6	78,5
28,3	37,7	50,3		



Réponses

1. _____
2. _____
3. _____
4. _____
5. _____
6. _____
7. _____
8. _____
9. _____