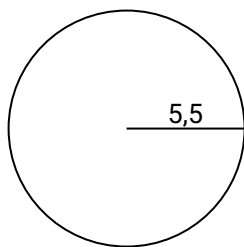




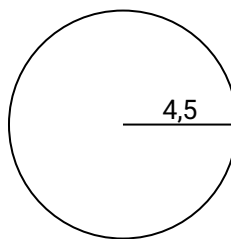
Calculez l'aire de chaque cercle. Les cercles ne sont pas à l'échelle.

**Réponses**

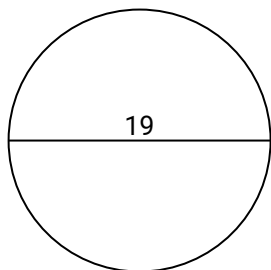
1)



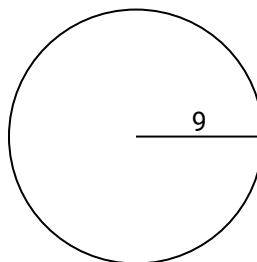
2)



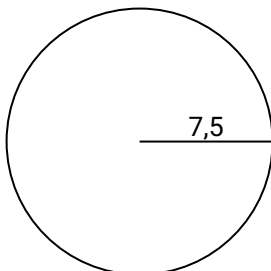
3)



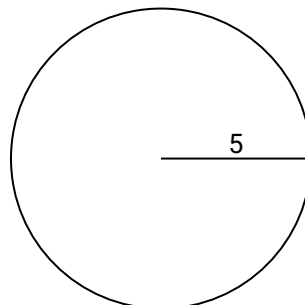
4)



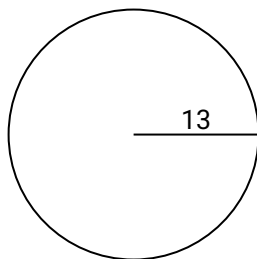
5)



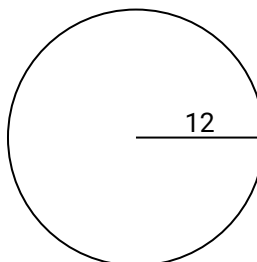
6)



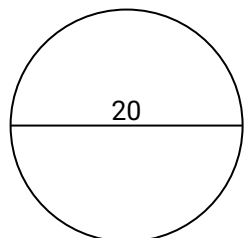
7)



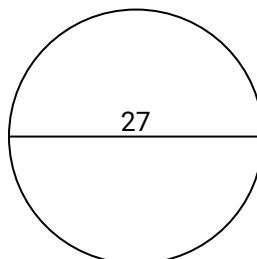
8)



9)



10)



1. \_\_\_\_\_

2. \_\_\_\_\_

3. \_\_\_\_\_

4. \_\_\_\_\_

5. \_\_\_\_\_

6. \_\_\_\_\_

7. \_\_\_\_\_

8. \_\_\_\_\_

9. \_\_\_\_\_

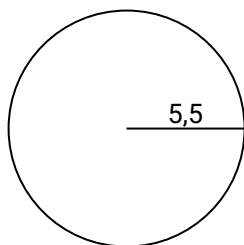
10. \_\_\_\_\_



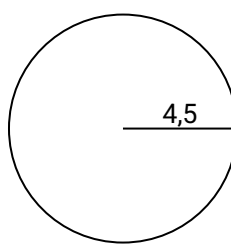
Calculez l'aire de chaque cercle. Les cercles ne sont pas à l'échelle.

**Réponses**

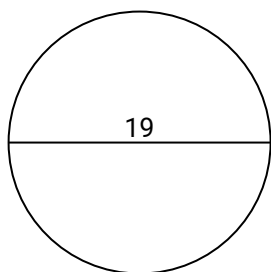
1)



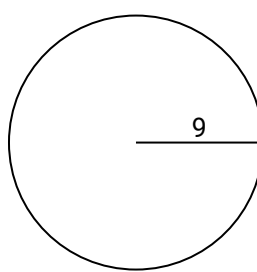
2)



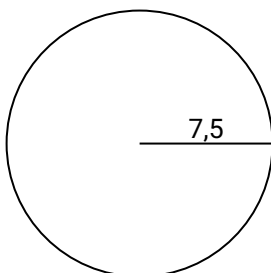
3)



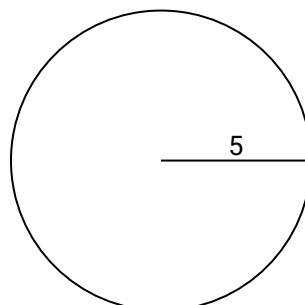
4)



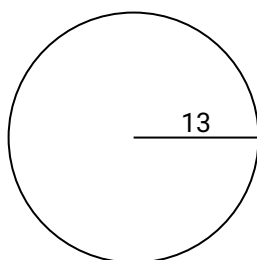
5)



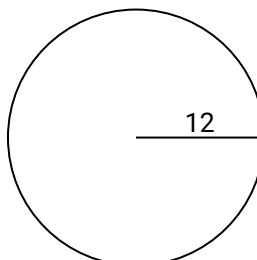
6)



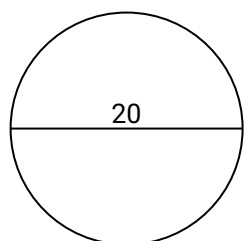
7)



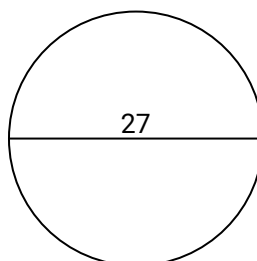
8)



9)



10)

1. **95**2. **63,6**3. **283,5**4. **254,5**5. **176,7**6. **78,5**7. **530,9**8. **452,4**9. **314,2**10. **572,6**

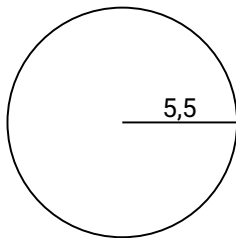


Calculez l'aire de chaque cercle. Les cercles ne sont pas à l'échelle.

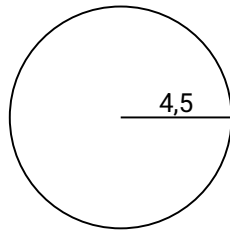
**Réponses**

254,5	530,9	95	314,2	63,6
283,5	176,7	78,5	452,4	

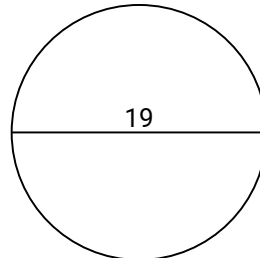
1)



2)



3)



1. \_\_\_\_\_

2. \_\_\_\_\_

3. \_\_\_\_\_

4. \_\_\_\_\_

5. \_\_\_\_\_

6. \_\_\_\_\_

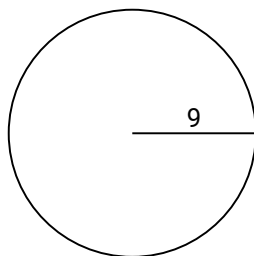
7. \_\_\_\_\_

8. \_\_\_\_\_

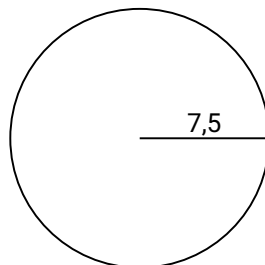
9. \_\_\_\_\_

10. \_\_\_\_\_

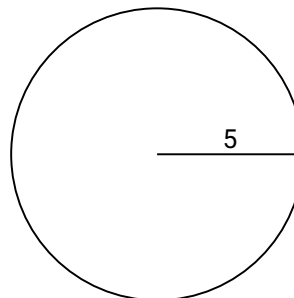
4)



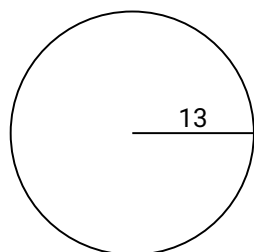
5)



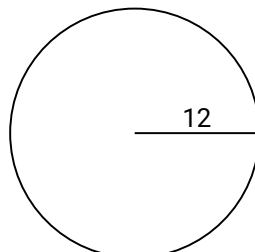
6)



7)



8)



9)

