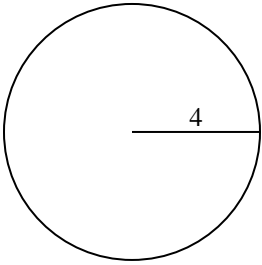


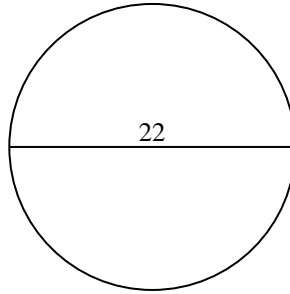


Calculez l'aire de chaque cercle. Les cercles ne sont pas à l'échelle.

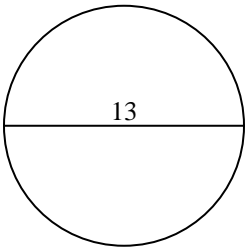
1)



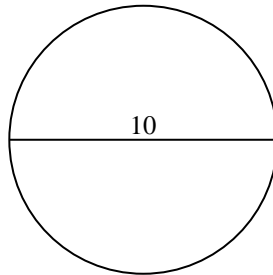
2)



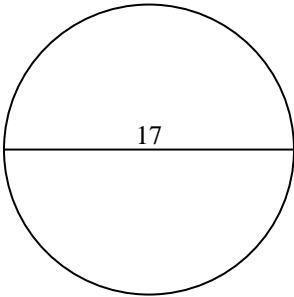
3)



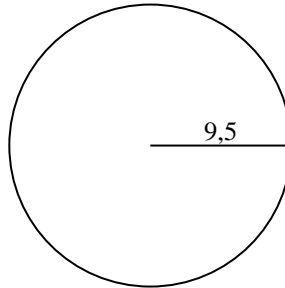
4)



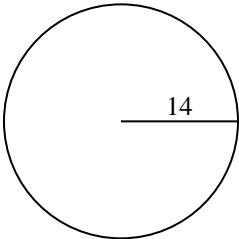
5)



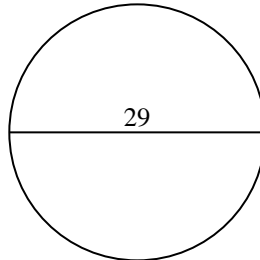
6)



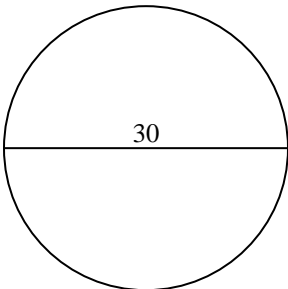
7)



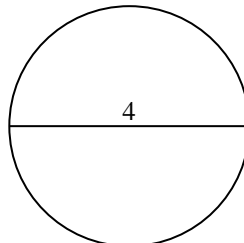
8)



9)



10)



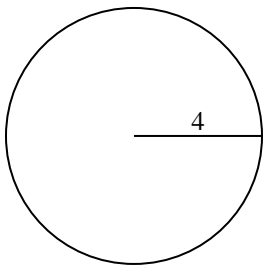
**Réponses**

- 1. \_\_\_\_\_
- 2. \_\_\_\_\_
- 3. \_\_\_\_\_
- 4. \_\_\_\_\_
- 5. \_\_\_\_\_
- 6. \_\_\_\_\_
- 7. \_\_\_\_\_
- 8. \_\_\_\_\_
- 9. \_\_\_\_\_
- 10. \_\_\_\_\_

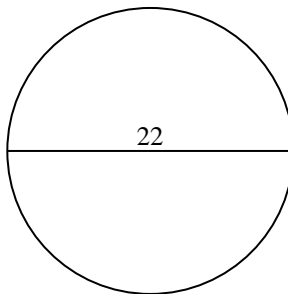


Calculez l'aire de chaque cercle. Les cercles ne sont pas à l'échelle.

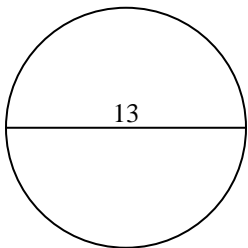
1)



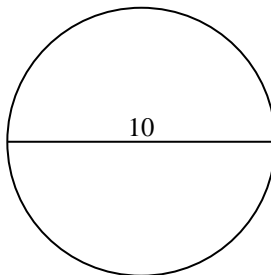
2)



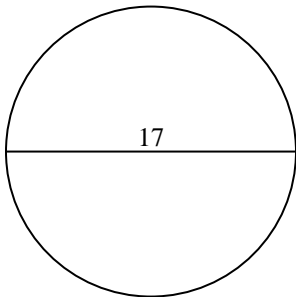
3)



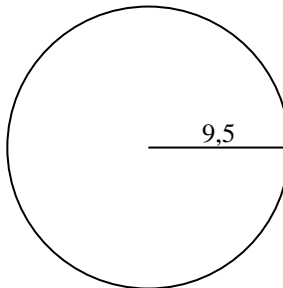
4)



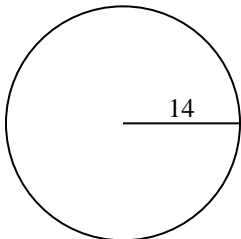
5)



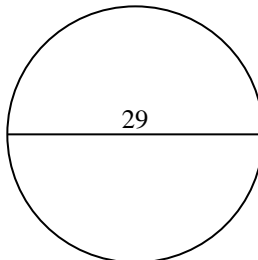
6)



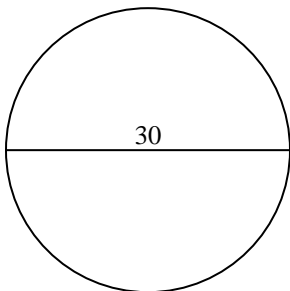
7)



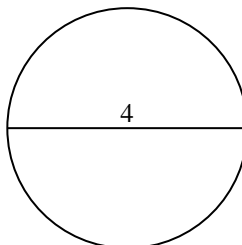
8)



9)



10)

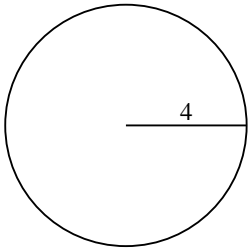
**Réponses**1. 50,32. 380,13. 132,74. 78,55. 2276. 283,57. 615,88. 660,59. 706,910. 12,6



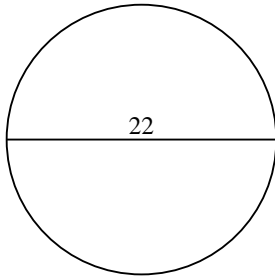
Calculez l'aire de chaque cercle. Les cercles ne sont pas à l'échelle.

78,5	227	660,5	615,8	380,1
283,5	132,7	50,3	706,9	

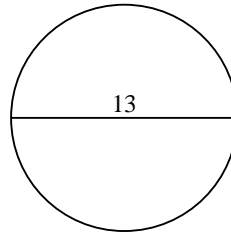
1)



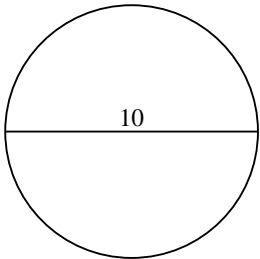
2)



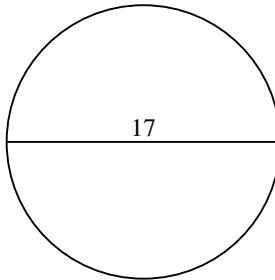
3)



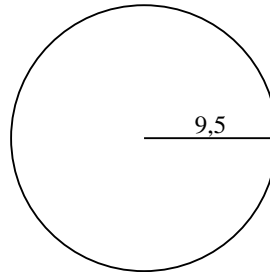
4)



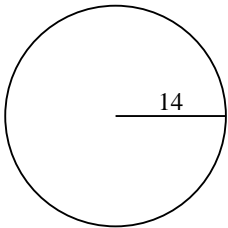
5)



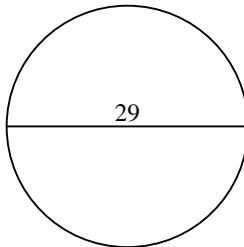
6)



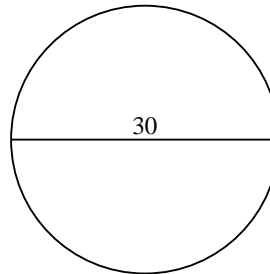
7)



8)



9)



**Réponses**

1. \_\_\_\_\_
2. \_\_\_\_\_
3. \_\_\_\_\_
4. \_\_\_\_\_
5. \_\_\_\_\_
6. \_\_\_\_\_
7. \_\_\_\_\_
8. \_\_\_\_\_
9. \_\_\_\_\_