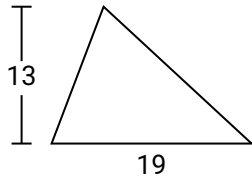




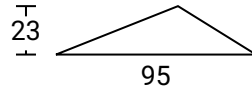
Calculez l'aire de chaque triangle. Les triangles ne sont pas à l'échelle.

Réponses

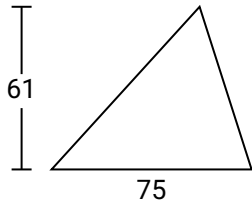
1)



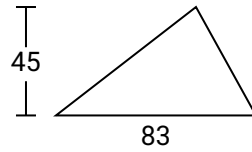
2)



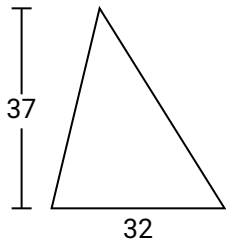
3)



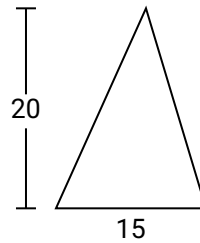
4)



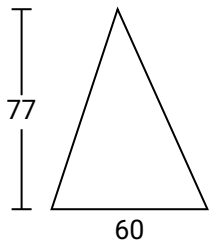
5)



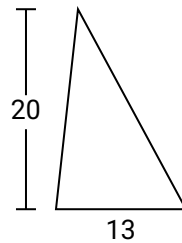
6)



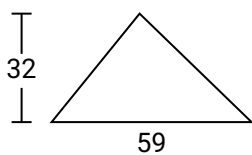
7)



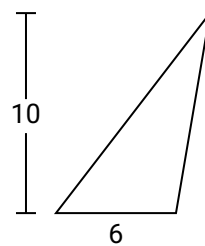
8)



9)



10)



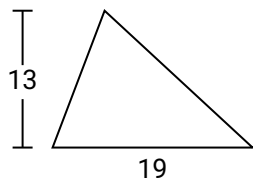
1. _____
2. _____
3. _____
4. _____
5. _____
6. _____
7. _____
8. _____
9. _____
10. _____



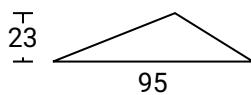
Calculez l'aire de chaque triangle. Les triangles ne sont pas à l'échelle.

Réponses

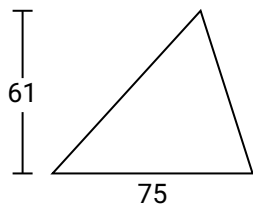
1)



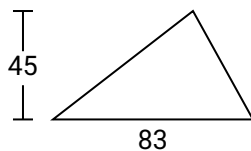
2)



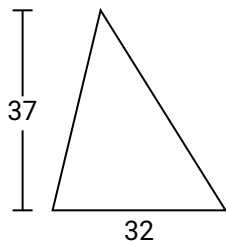
3)



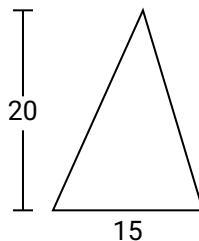
4)



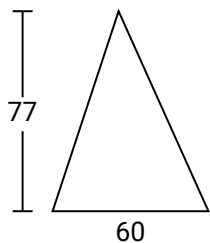
5)



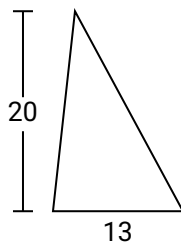
6)



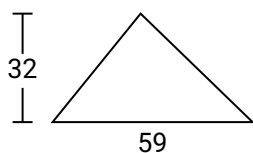
7)



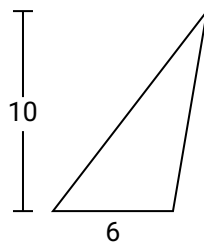
8)



9)



10)



1. **123,5**
2. **1 092,5**
3. **2 287,5**
4. **1 867,5**
5. **592**
6. **150**
7. **2 310**
8. **130**
9. **944**
10. **30**



Calculer l'Aire de Triangles

Nom: _____

Calculez l'aire de chaque triangle. Les triangles ne sont pas à l'échelle.

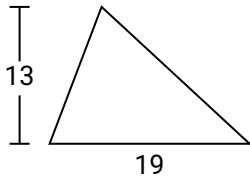
Réponses

592
2 310
130

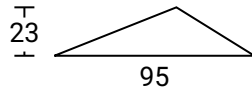
2 287,5
150
1 867,5

1 092,5
123,5
944

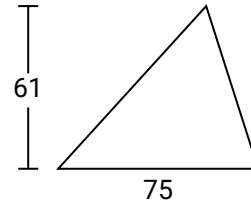
1)



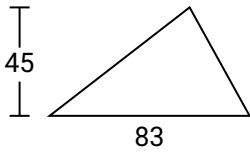
2)



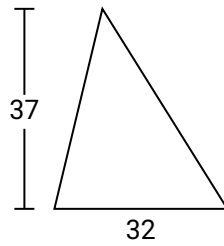
3)



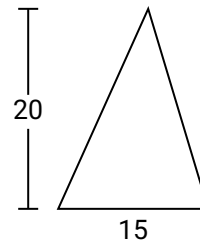
4)



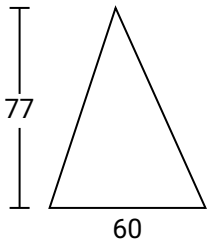
5)



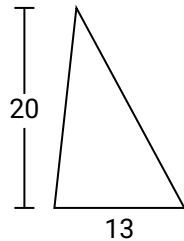
6)



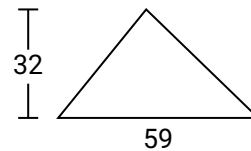
7)



8)



9)



1. _____
2. _____
3. _____
4. _____
5. _____
6. _____
7. _____
8. _____
9. _____
10. _____