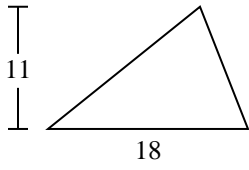




Calculez l'aire de chaque triangle. Les triangles ne sont pas à l'échelle.

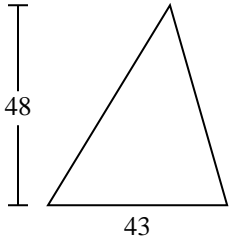
1)



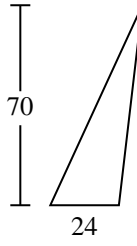
2)



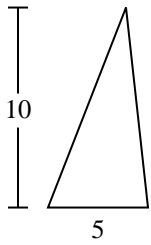
3)



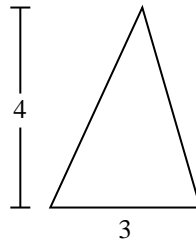
4)



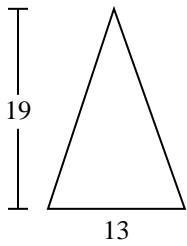
5)



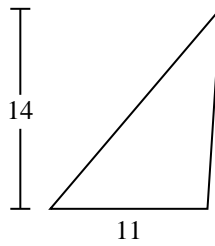
6)



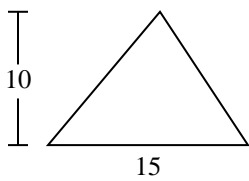
7)



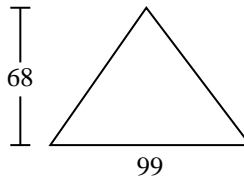
8)



9)



10)



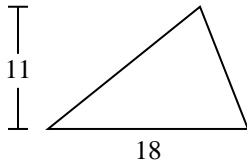
Réponses

- 1. _____
- 2. _____
- 3. _____
- 4. _____
- 5. _____
- 6. _____
- 7. _____
- 8. _____
- 9. _____
- 10. _____



Calculez l'aire de chaque triangle. Les triangles ne sont pas à l'échelle.

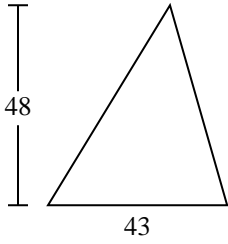
1)



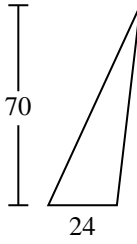
2)



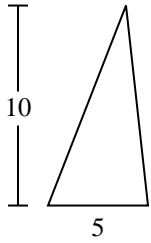
3)



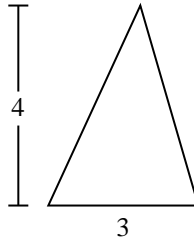
4)



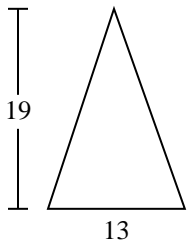
5)



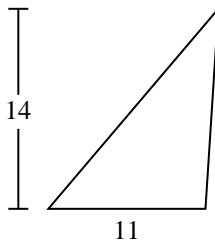
6)



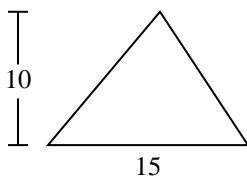
7)



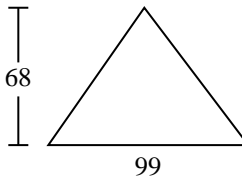
8)



9)



10)

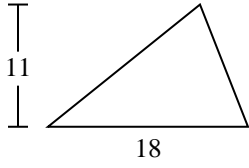
**Réponses**1. 992. 73. 1 0324. 8405. 256. 67. 123,58. 779. 7510. 3 366



Calculez l'aire de chaque triangle. Les triangles ne sont pas à l'échelle.

77	6	99	1 032	25
840	75	123,5	7	

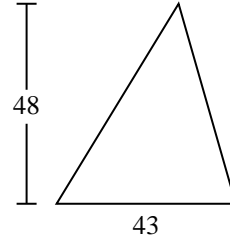
1)



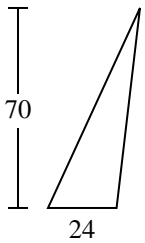
2)



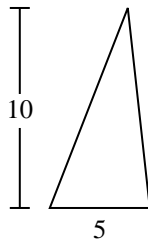
3)



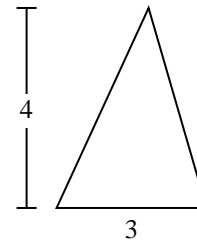
4)



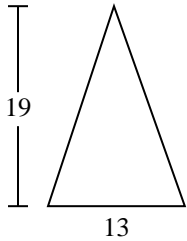
5)



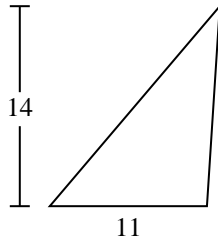
6)



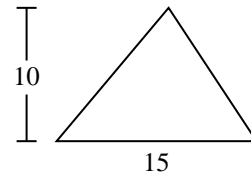
7)



8)



9)



Réponses

1. _____
2. _____
3. _____
4. _____
5. _____
6. _____
7. _____
8. _____
9. _____