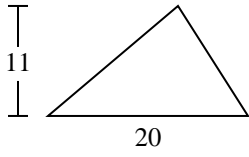


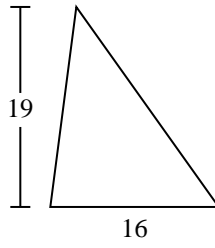


Calculez l'aire de chaque triangle. Les triangles ne sont pas à l'échelle.

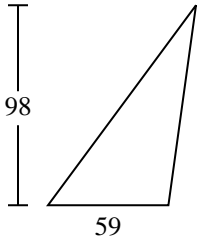
1)



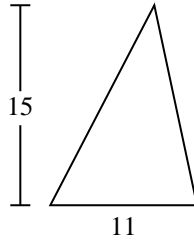
2)



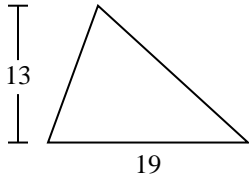
3)



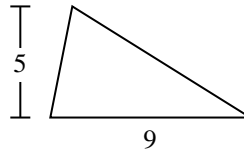
4)



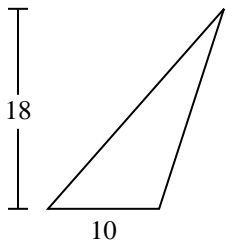
5)



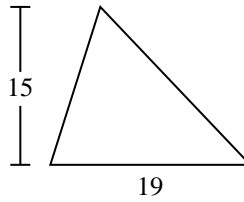
6)



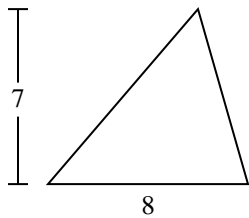
7)



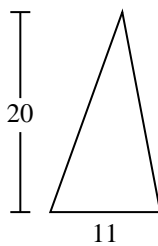
8)



9)



10)



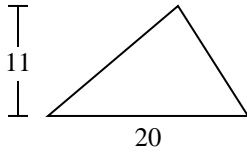
Réponses

- 1. _____
- 2. _____
- 3. _____
- 4. _____
- 5. _____
- 6. _____
- 7. _____
- 8. _____
- 9. _____
- 10. _____

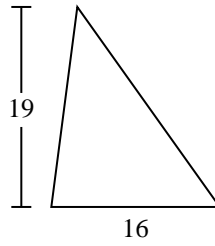


Calculez l'aire de chaque triangle. Les triangles ne sont pas à l'échelle.

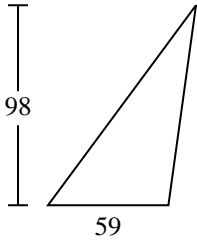
1)



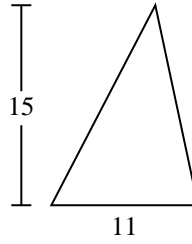
2)



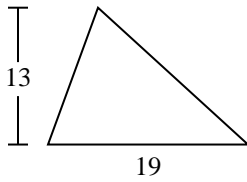
3)



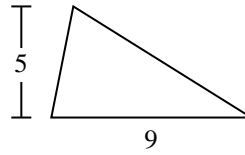
4)



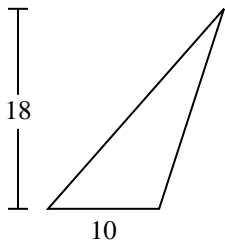
5)



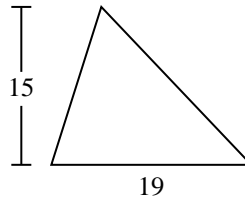
6)



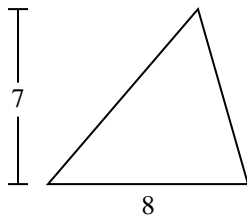
7)



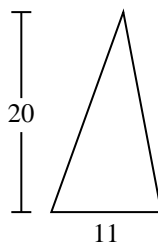
8)



9)



10)

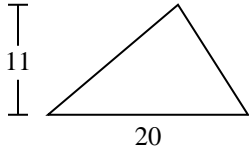
**Réponses**1. 1102. 1523. 2 8914. 82,55. 123,56. 22,57. 908. 142,59. 2810. 110



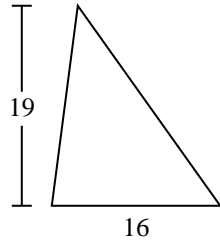
Calculez l'aire de chaque triangle. Les triangles ne sont pas à l'échelle.

| | | | | |
|-------|-------|------|-----|-------|
| 22,5 | 152 | 28 | 90 | 142,5 |
| 123,5 | 2 891 | 82,5 | 110 | |

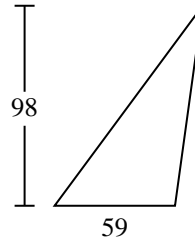
1)



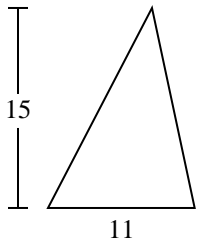
2)



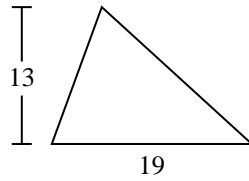
3)



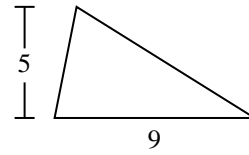
4)



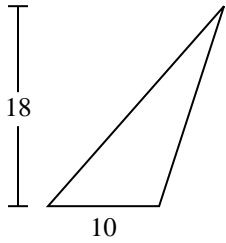
5)



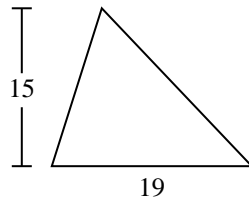
6)



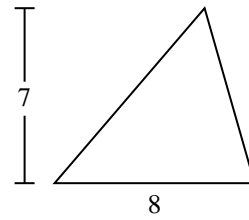
7)



8)



9)



Réponses

1. _____
2. _____
3. _____
4. _____
5. _____
6. _____
7. _____
8. _____
9. _____