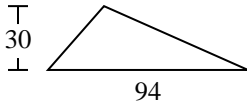


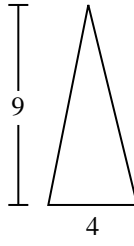


Calculez l'aire de chaque triangle. Les triangles ne sont pas à l'échelle.

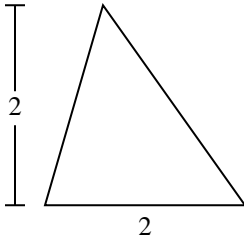
1)



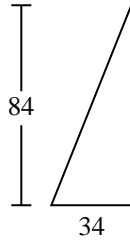
2)



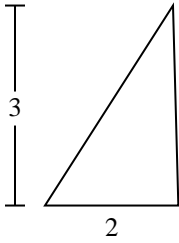
3)



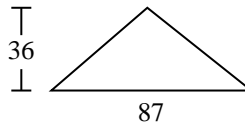
4)



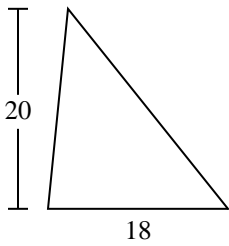
5)



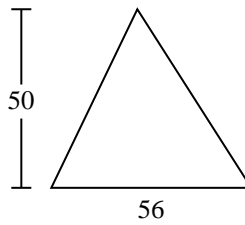
6)



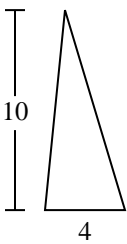
7)



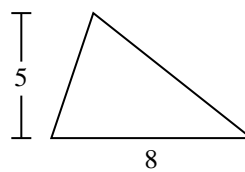
8)



9)



10)



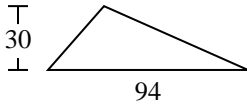
Réponses

- 1. _____
- 2. _____
- 3. _____
- 4. _____
- 5. _____
- 6. _____
- 7. _____
- 8. _____
- 9. _____
- 10. _____

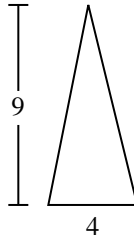


Calculez l'aire de chaque triangle. Les triangles ne sont pas à l'échelle.

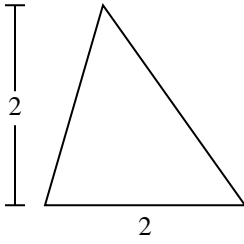
1)



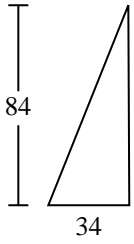
2)



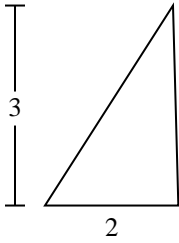
3)



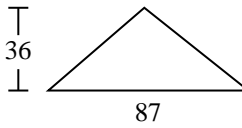
4)



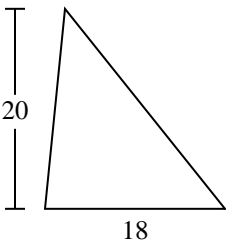
5)



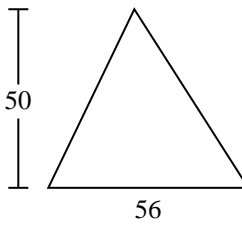
6)



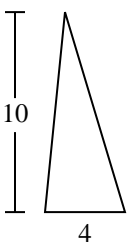
7)



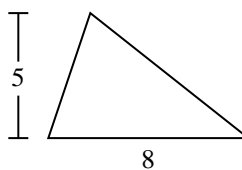
8)



9)



10)

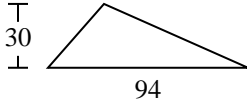
**Réponses**1. 1 4102. 183. 24. 1 4285. 36. 1 5667. 1808. 1 4009. 2010. 20



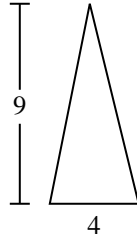
Calculez l'aire de chaque triangle. Les triangles ne sont pas à l'échelle.

180	1 428	18	1 566	1 400
3	2	20	1 410	

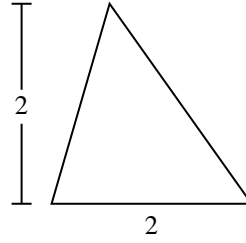
1)



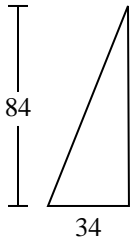
2)



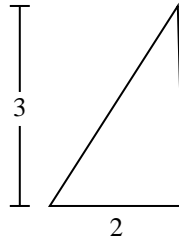
3)



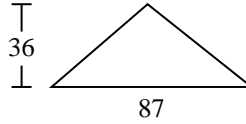
4)



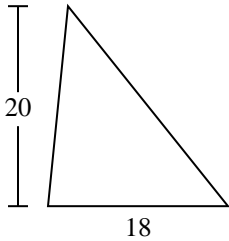
5)



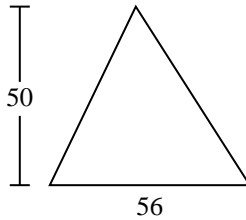
6)



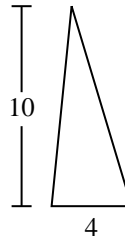
7)



8)



9)



Réponses

1. _____
2. _____
3. _____
4. _____
5. _____
6. _____
7. _____
8. _____
9. _____