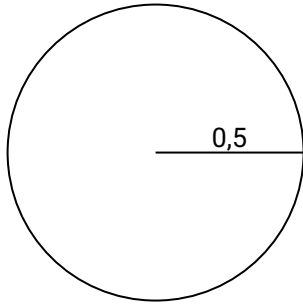




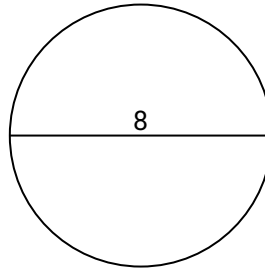
Calculez la circonférence de chaque cercle. Les cercles ne sont pas à l'échelle.

**Réponses**

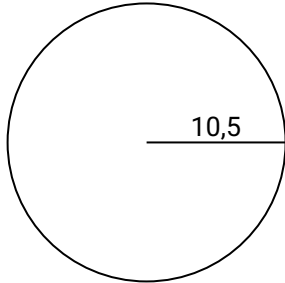
1)



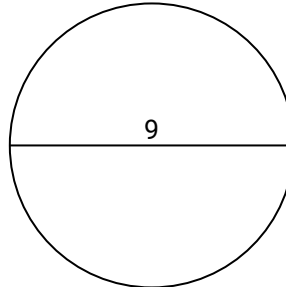
2)



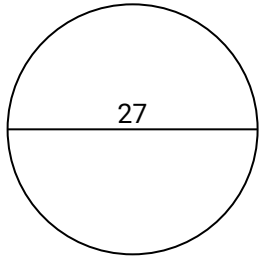
3)



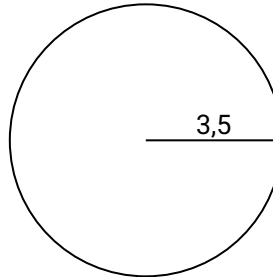
4)



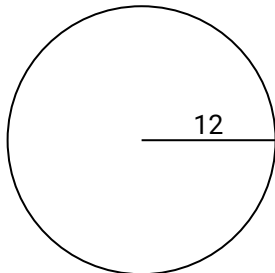
5)



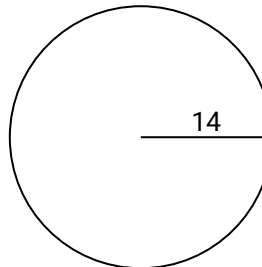
6)



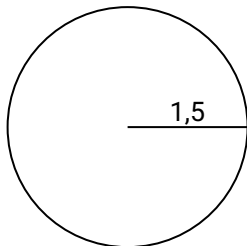
7)



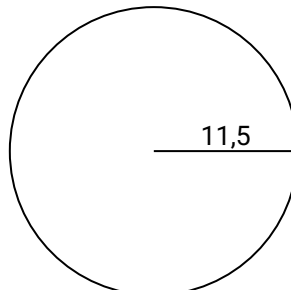
8)



9)



10)

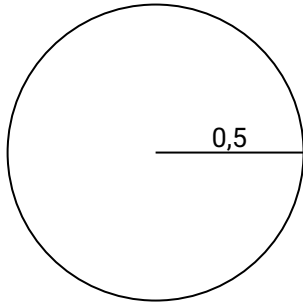


1. \_\_\_\_\_
2. \_\_\_\_\_
3. \_\_\_\_\_
4. \_\_\_\_\_
5. \_\_\_\_\_
6. \_\_\_\_\_
7. \_\_\_\_\_
8. \_\_\_\_\_
9. \_\_\_\_\_
10. \_\_\_\_\_

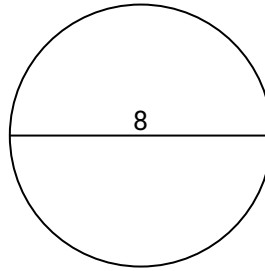


Calculez la circonférence de chaque cercle. Les cercles ne sont pas à l'échelle.

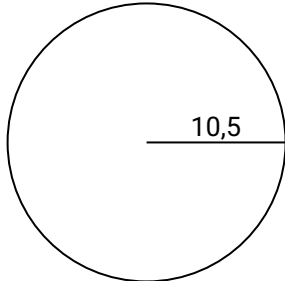
1)



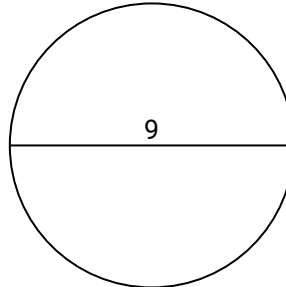
2)



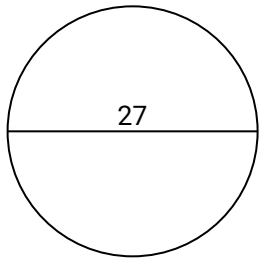
3)



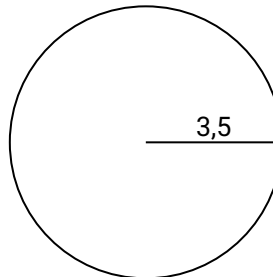
4)



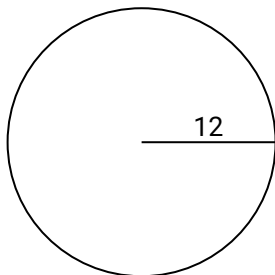
5)



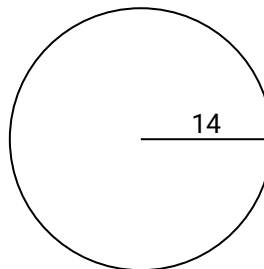
6)



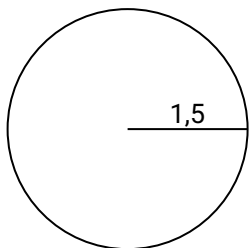
7)



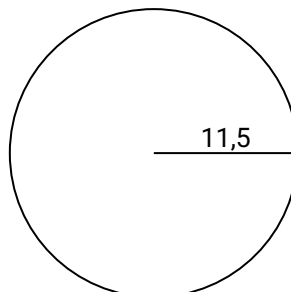
8)



9)



10)

**Réponses**

1. **3.14**
2. **25.13**
3. **65.97**
4. **28.27**
5. **84.82**
6. **21.99**
7. **75.4**
8. **87.96**
9. **9.42**
10. **72.26**



# Calculer la Circonférence d'un Cercle

Nom: \_\_\_\_\_

Calculez la circonférence de chaque cercle. Les cercles ne sont pas à l'échelle.

65.97

25.13

28.27

75.4

9.42

3.14

84.82

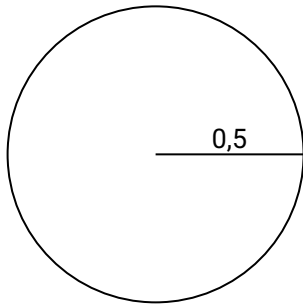
21.99

87.96

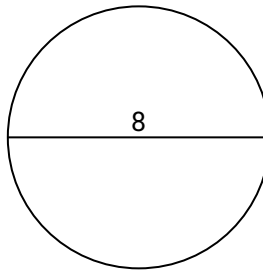
72.26

## Réponses

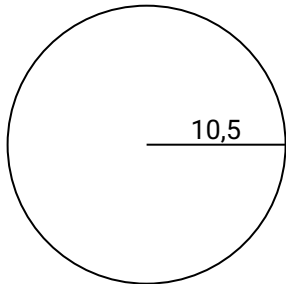
1)



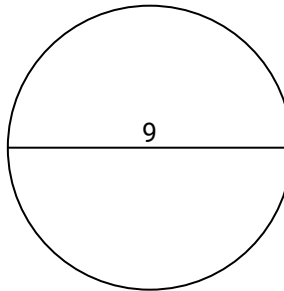
2)



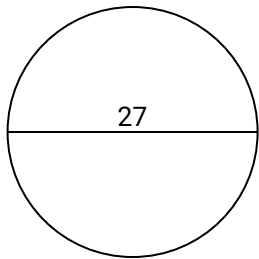
3)



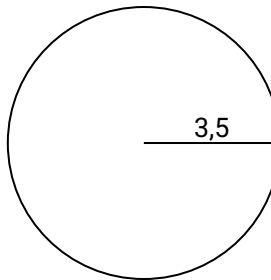
4)



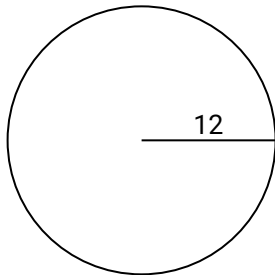
5)



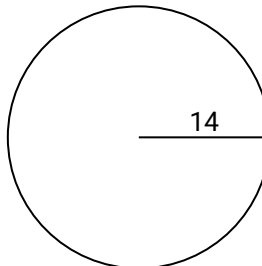
6)



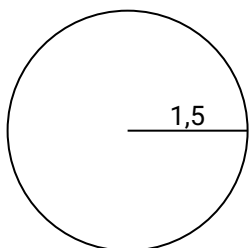
7)



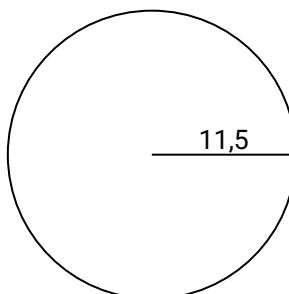
8)



9)



10)



1. \_\_\_\_\_
2. \_\_\_\_\_
3. \_\_\_\_\_
4. \_\_\_\_\_
5. \_\_\_\_\_
6. \_\_\_\_\_
7. \_\_\_\_\_
8. \_\_\_\_\_
9. \_\_\_\_\_
10. \_\_\_\_\_