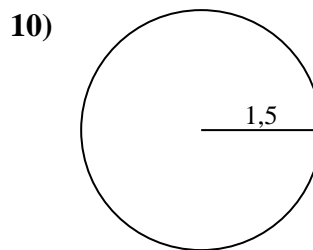
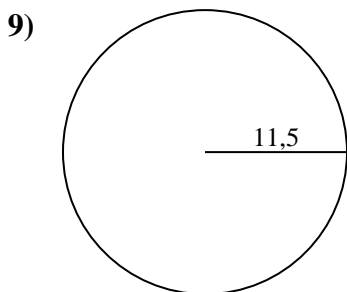
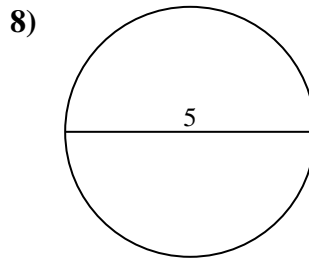
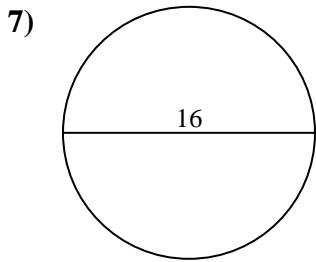
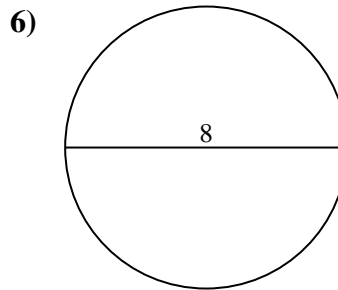
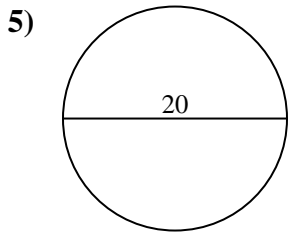
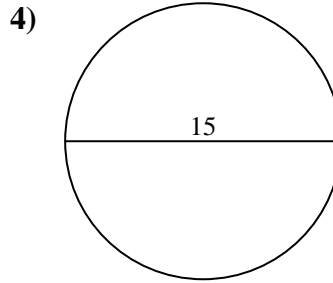
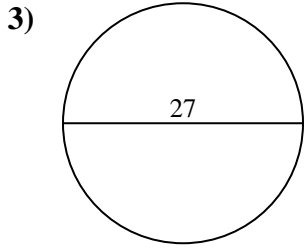
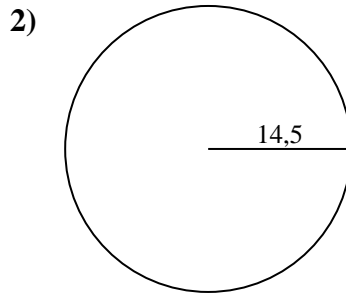
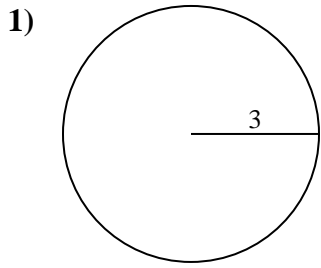




Calculez la circonférence de chaque cercle. Les cercles ne sont pas à l'échelle.

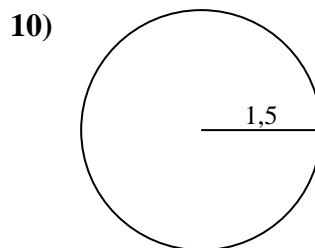
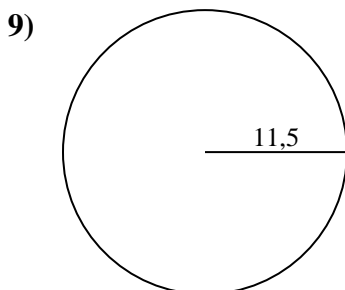
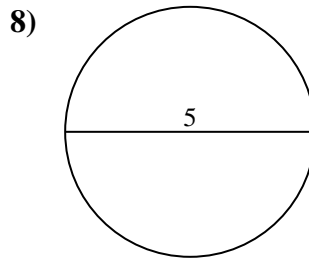
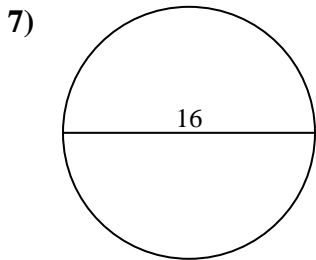
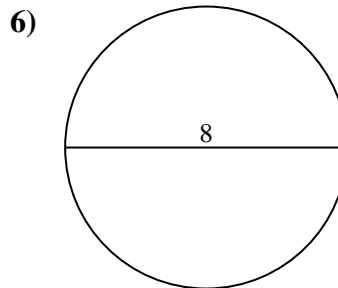
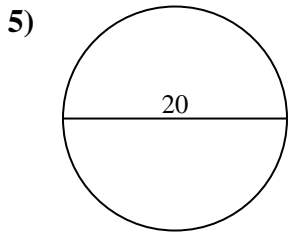
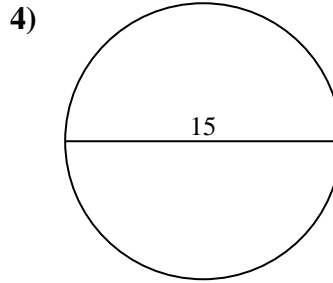
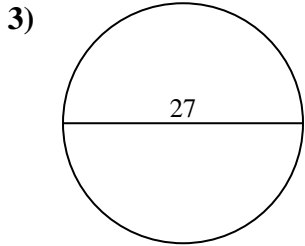
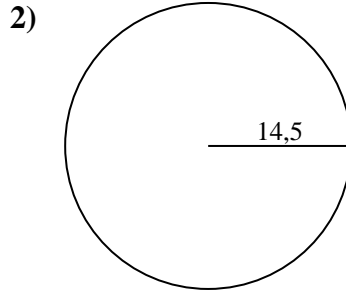
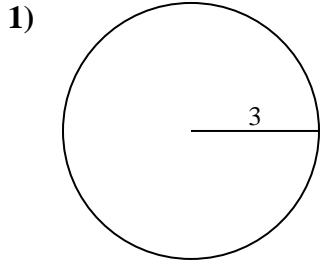


Réponses

- 1. _____
- 2. _____
- 3. _____
- 4. _____
- 5. _____
- 6. _____
- 7. _____
- 8. _____
- 9. _____
- 10. _____



Calculez la circonférence de chaque cercle. Les cercles ne sont pas à l'échelle.

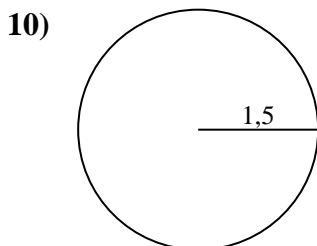
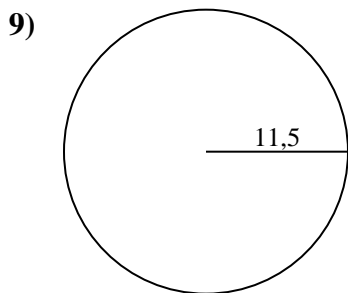
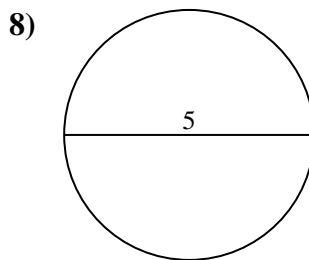
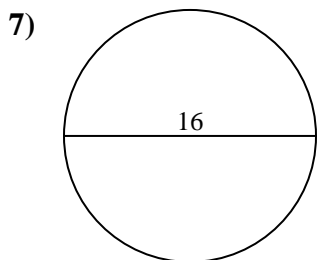
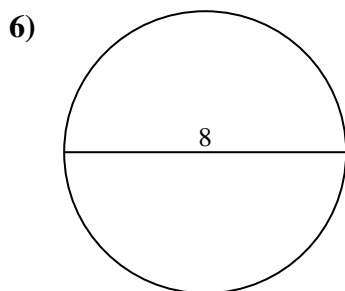
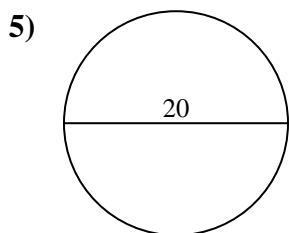
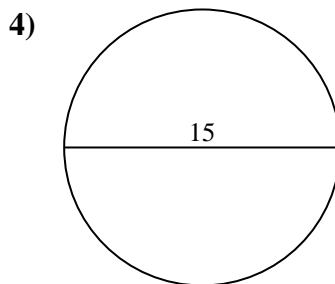
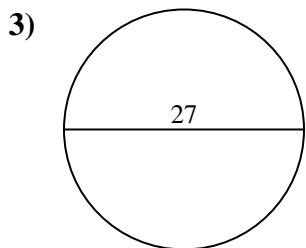
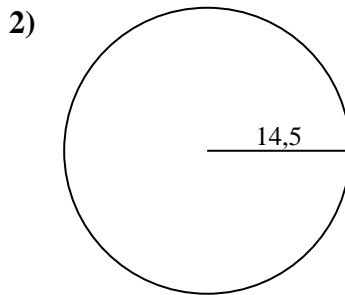
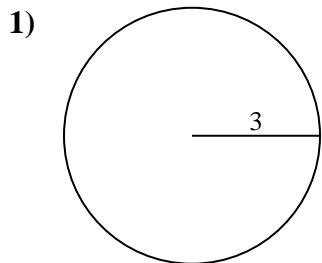
**Réponses**1. 18,85 cm2. 91,11 cm3. 84,82 cm4. 47,12 cm5. 62,83 cm6. 25,13 cm7. 50,27 cm8. 15,71 cm9. 72,26 cm10. 9,42 cm



Calculez la circonférence de chaque cercle. Les cercles ne sont pas à l'échelle.

72,26 cm	9,42 cm	18,85 cm	62,83 cm	50,27 cm
91,11 cm	47,12 cm	84,82 cm	15,71 cm	25,13 cm

Réponses



- 1. _____
- 2. _____
- 3. _____
- 4. _____
- 5. _____
- 6. _____
- 7. _____
- 8. _____
- 9. _____
- 10. _____