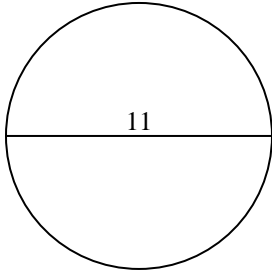


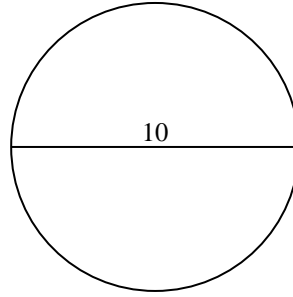


Calculez la circonférence de chaque cercle. Les cercles ne sont pas à l'échelle.

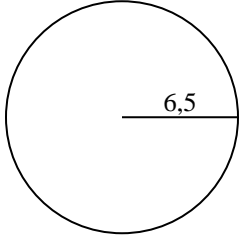
1)



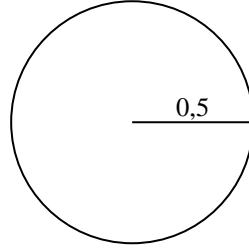
2)



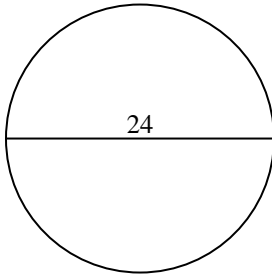
3)



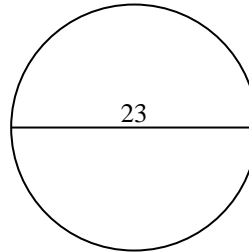
4)



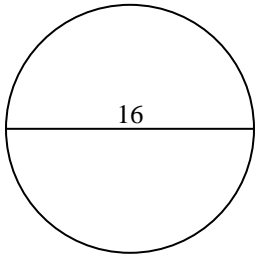
5)



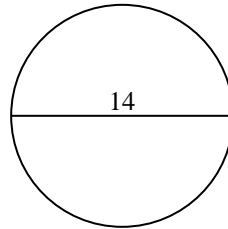
6)



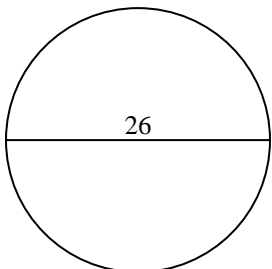
7)



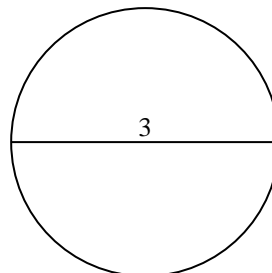
8)



9)



10)



Réponses

1. _____

2. _____

3. _____

4. _____

5. _____

6. _____

7. _____

8. _____

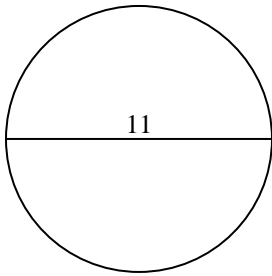
9. _____

10. _____

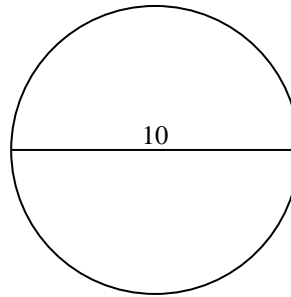


Calculez la circonférence de chaque cercle. Les cercles ne sont pas à l'échelle.

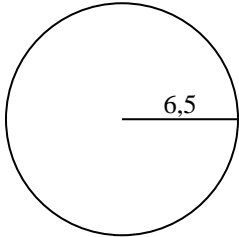
1)



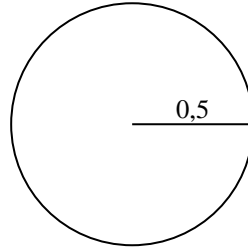
2)



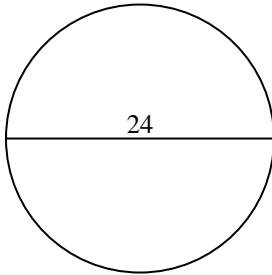
3)



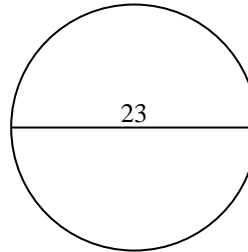
4)



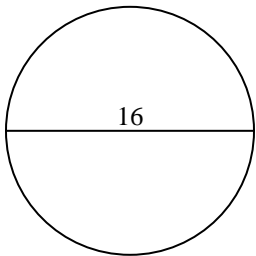
5)



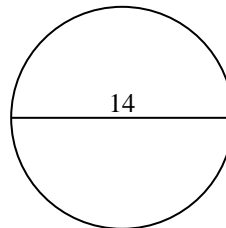
6)



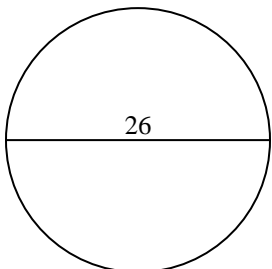
7)



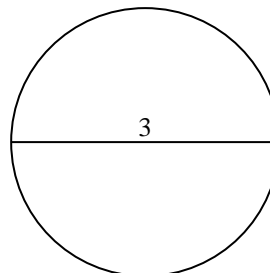
8)



9)



10)

**Réponses**1. 34,56 cm2. 31,42 cm3. 40,84 cm4. 3,14 cm5. 75,4 cm6. 72,26 cm7. 50,27 cm8. 43,98 cm9. 81,68 cm10. 9,42 cm



Calculez la circonférence de chaque cercle. Les cercles ne sont pas à l'échelle.

72,26 cm

3,14 cm

34,56 cm

31,42 cm

75,4 cm

81,68 cm

9,42 cm

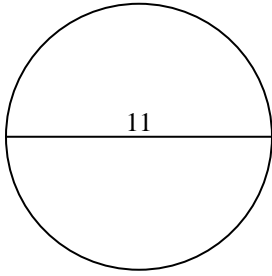
40,84 cm

50,27 cm

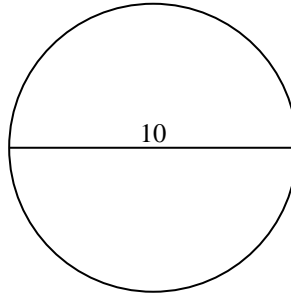
43,98 cm

Réponses

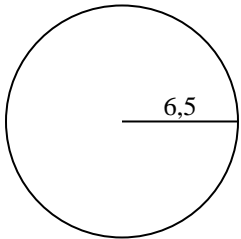
1)



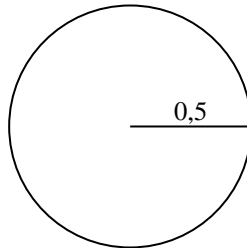
2)



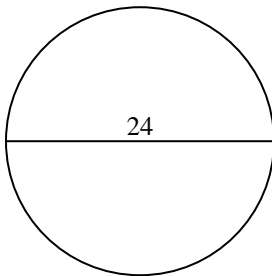
3)



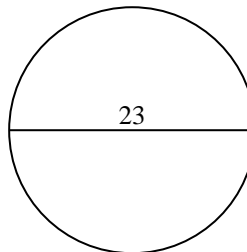
4)



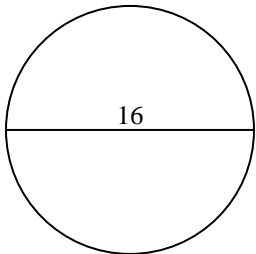
5)



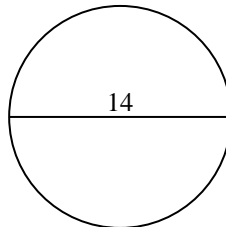
6)



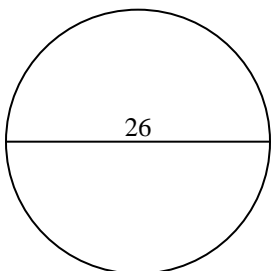
7)



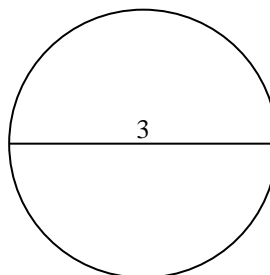
8)



9)



10)



- 1. _____
- 2. _____
- 3. _____
- 4. _____
- 5. _____
- 6. _____
- 7. _____
- 8. _____
- 9. _____
- 10. _____