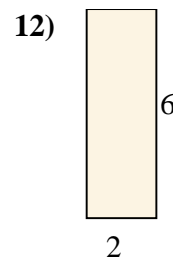
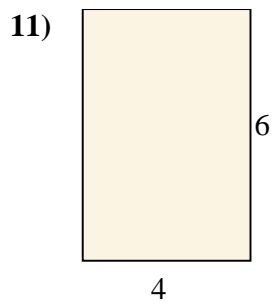
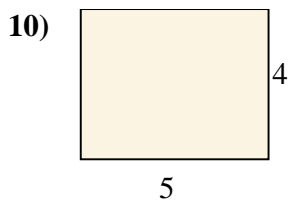
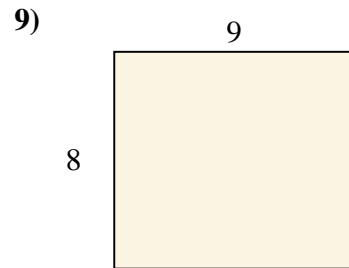
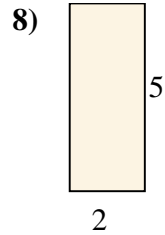
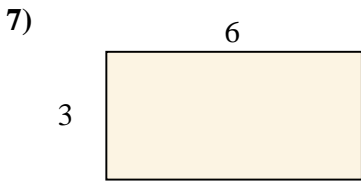
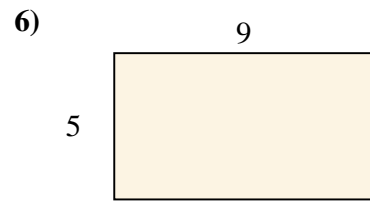
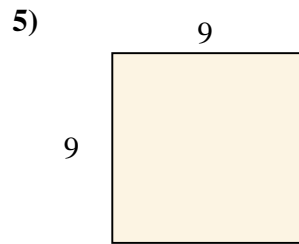
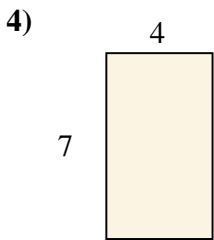
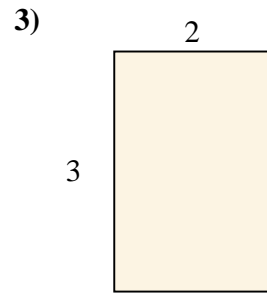
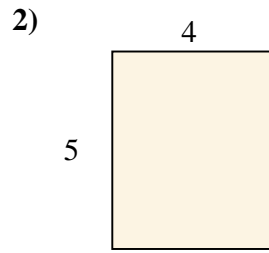
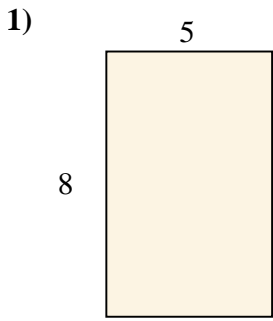




calculez l'aire de chaque rectangle (en  $\text{cm}^2$ )

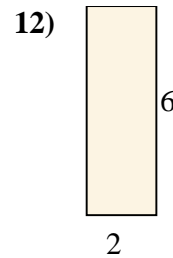
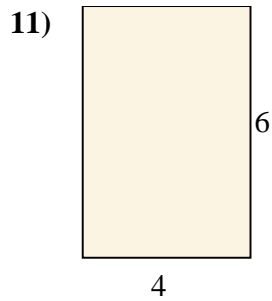
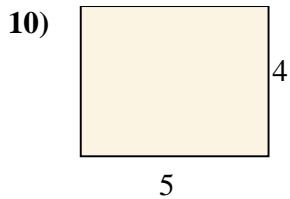
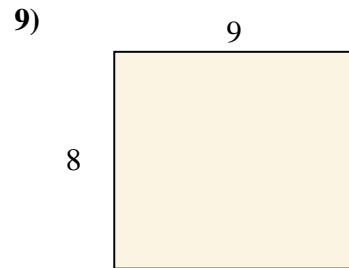
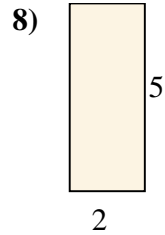
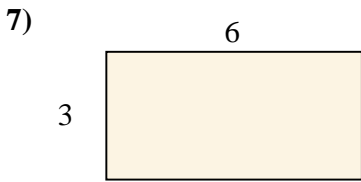
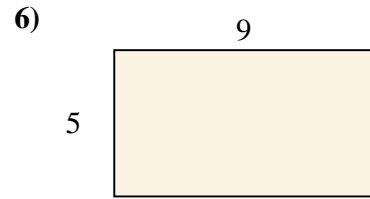
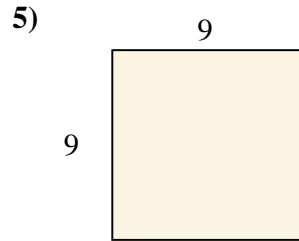
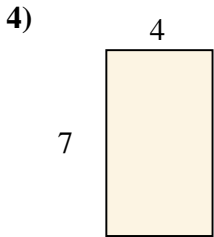
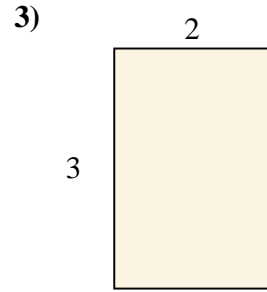
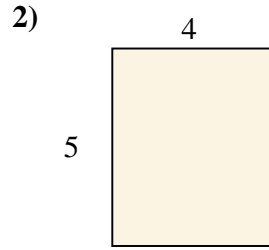
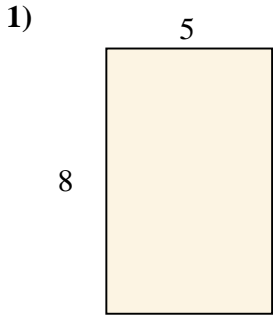
**Réponses**



- 1. \_\_\_\_\_
- 2. \_\_\_\_\_
- 3. \_\_\_\_\_
- 4. \_\_\_\_\_
- 5. \_\_\_\_\_
- 6. \_\_\_\_\_
- 7. \_\_\_\_\_
- 8. \_\_\_\_\_
- 9. \_\_\_\_\_
- 10. \_\_\_\_\_
- 11. \_\_\_\_\_
- 12. \_\_\_\_\_



calculez l'aire de chaque rectangle (en cm<sup>2</sup>)



**Réponses**

1. 40

2. 20

3. 6

4. 28

5. 81

6. 45

7. 18

8. 10

9. 72

10. 20

11. 24

12. 12