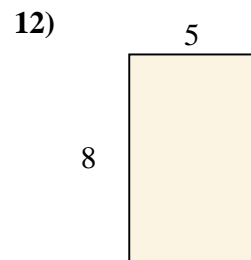
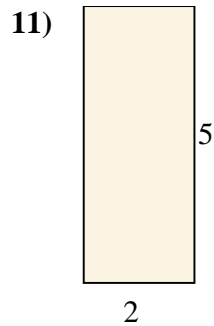
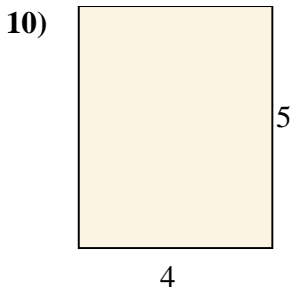
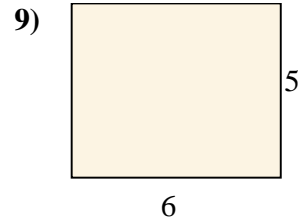
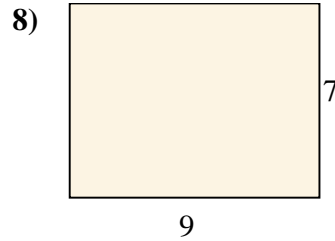
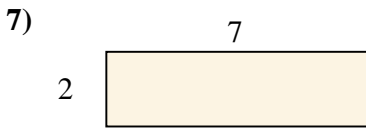
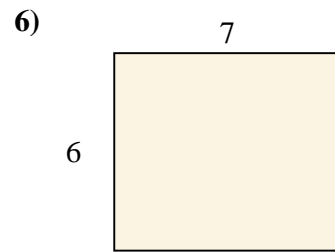
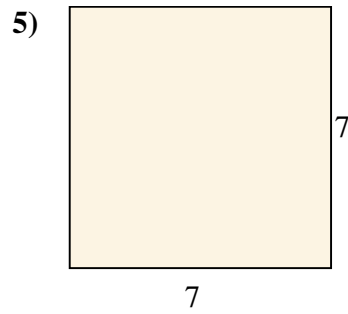
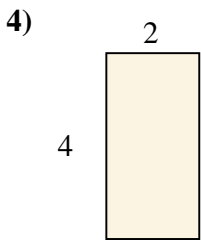
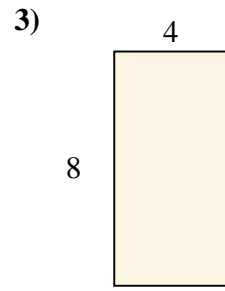
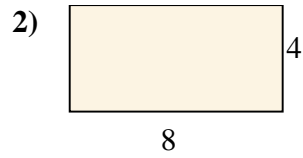
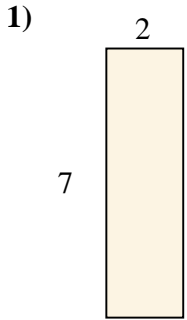




calculez l'aire de chaque rectangle (en cm<sup>2</sup>)

**Réponses**

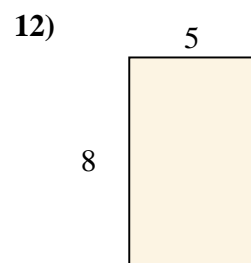

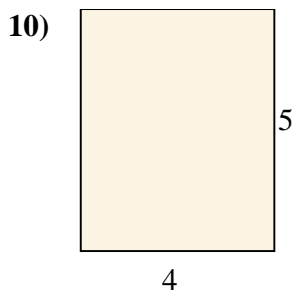
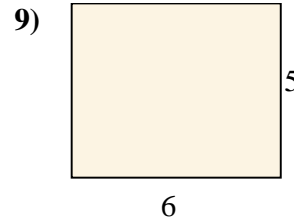
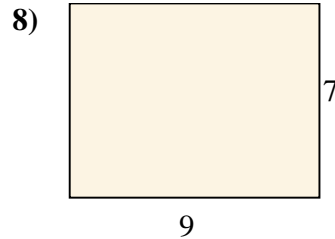

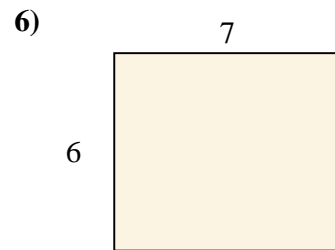
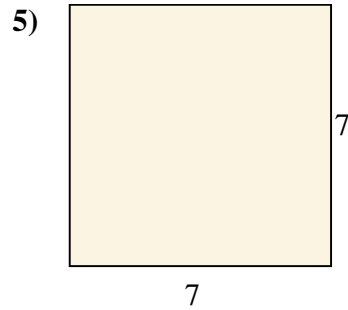
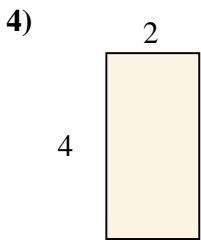
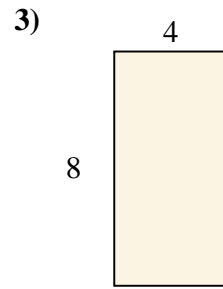
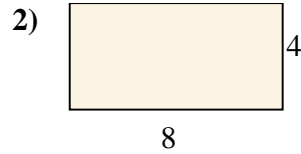
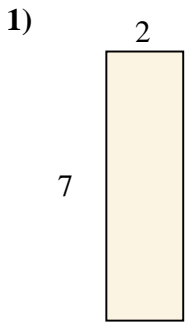


- 1. \_\_\_\_\_
- 2. \_\_\_\_\_
- 3. \_\_\_\_\_
- 4. \_\_\_\_\_
- 5. \_\_\_\_\_
- 6. \_\_\_\_\_
- 7. \_\_\_\_\_
- 8. \_\_\_\_\_
- 9. \_\_\_\_\_
- 10. \_\_\_\_\_
- 11. \_\_\_\_\_
- 12. \_\_\_\_\_



calculez l'aire de chaque rectangle (en cm<sup>2</sup>)

**Réponses**



- 1. 14
- 2. 32
- 3. 32
- 4. 8
- 5. 49
- 6. 42
- 7. 14
- 8. 63
- 9. 30
- 10. 20
- 11. 10
- 12. 40