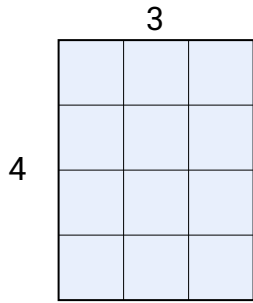




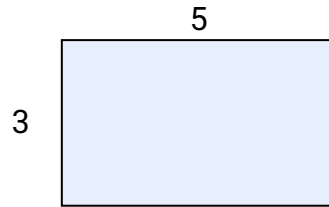
Calculez l'aire du rectangle en le décomposant par carreaux. Comme le premier exercice.

**Réponses**

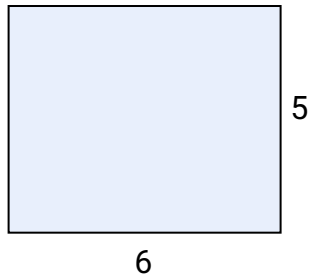
1)



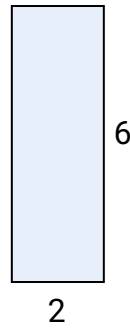
2)



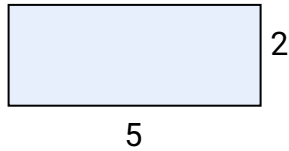
3)



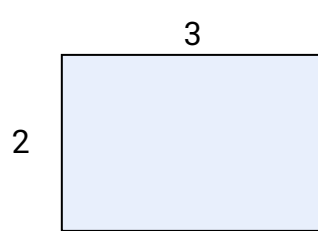
4)



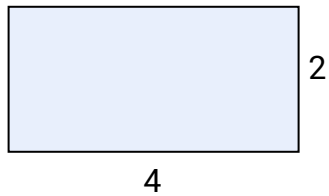
5)



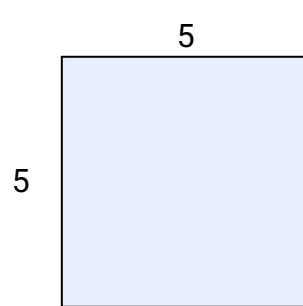
6)



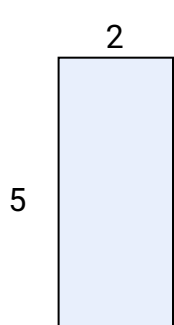
7)




8)



9)



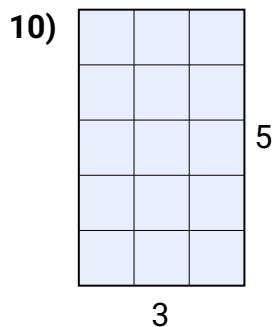
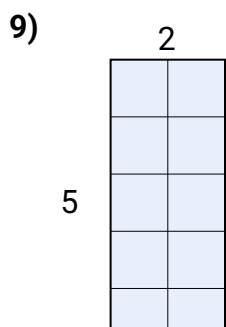
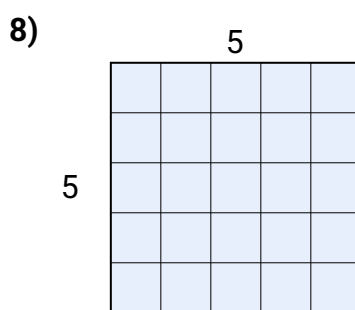
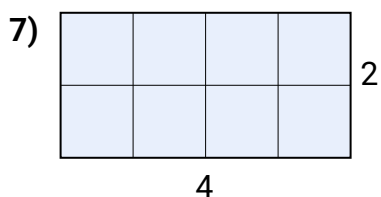
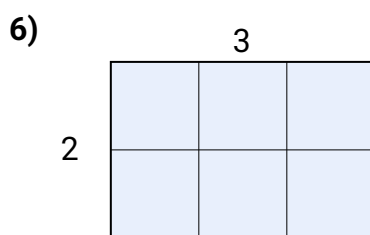
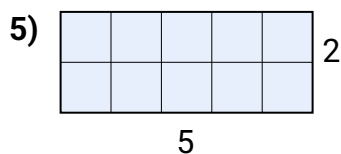
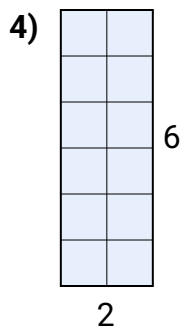
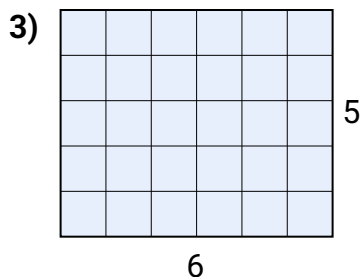
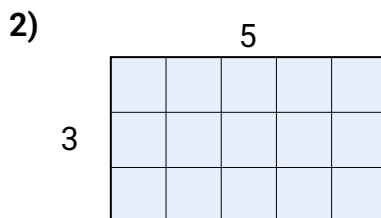
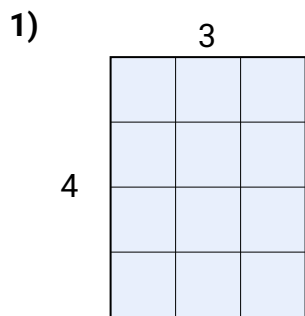
10)



1. \_\_\_\_\_
2. \_\_\_\_\_
3. \_\_\_\_\_
4. \_\_\_\_\_
5. \_\_\_\_\_
6. \_\_\_\_\_
7. \_\_\_\_\_
8. \_\_\_\_\_
9. \_\_\_\_\_
10. \_\_\_\_\_



Calculez l'aire du rectangle en le décomposant par carreaux. Comme le premier exercice.

**Réponses**

1.  $12u^2$
2.  $15u^2$
3.  $30u^2$
4.  $12u^2$
5.  $10u^2$
6.  $6u^2$
7.  $8u^2$
8.  $25u^2$
9.  $10u^2$
10.  $15u^2$