



Trouver le périmètre et la zone avec des décimales Nom:

Trouvez le périmètre et l'aire de chaque figure. Répondez au dixième près.

Réponses

1)

3.5 8.57

2)

2.6 5.8

3)

8.7 2.22

4)

7.88 4.2

5)

3.02 4.13

6)

9.9 7.85

7)

6.8 7.87

8)

4.2 6.6

9)

6.7 4.72

10)

3.5 9.16

11)

4.33 9.9

12)

9.5 3.5

13)

9.7 4.1

14)

2.5 4.93

15)

6.9 8.56

1.	_____	_____
2.	_____	_____
3.	_____	_____
4.	_____	_____
5.	_____	_____
6.	_____	_____
7.	_____	_____
8.	_____	_____
9.	_____	_____
10.	_____	_____
11.	_____	_____
12.	_____	_____
13.	_____	_____
14.	_____	_____
15.	_____	_____

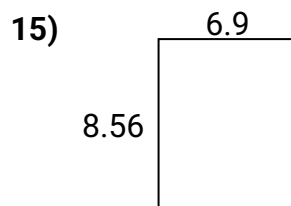
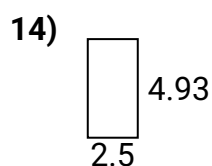
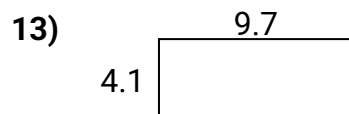
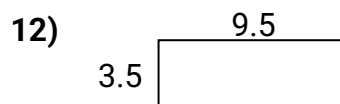
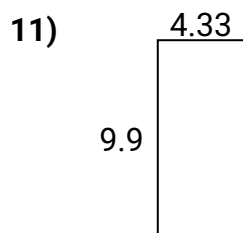
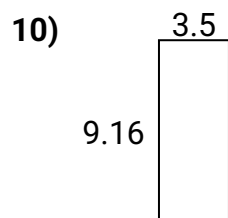
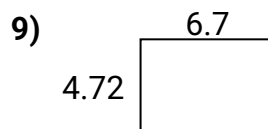
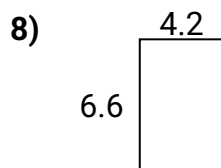
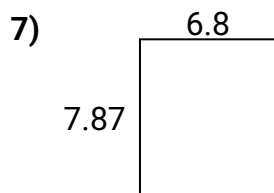
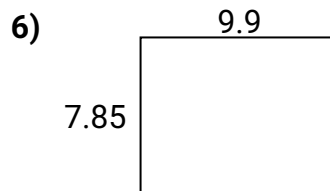
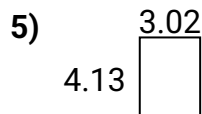
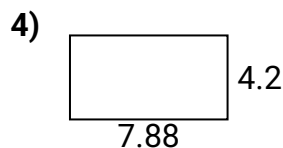
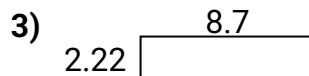
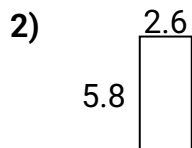
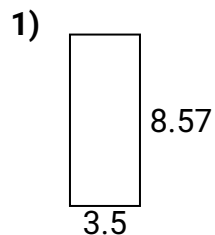


Trouver le périmètre et la zone avec des décimales

Nom:

Clé

Trouvez le périmètre et l'aire de chaque figure. Répondez au dixième près.



Réponses

1.	<u>30,0</u>	<u>24,1</u>
2.	<u>15,1</u>	<u>16,8</u>
3.	<u>19,3</u>	<u>21,8</u>
4.	<u>33,1</u>	<u>24,2</u>
5.	<u>12,5</u>	<u>14,3</u>
6.	<u>77,7</u>	<u>35,5</u>
7.	<u>53,5</u>	<u>29,3</u>
8.	<u>27,7</u>	<u>21,6</u>
9.	<u>31,6</u>	<u>22,8</u>
10.	<u>32,1</u>	<u>25,3</u>
11.	<u>42,9</u>	<u>28,5</u>
12.	<u>33,3</u>	<u>26,0</u>
13.	<u>39,8</u>	<u>27,6</u>
14.	<u>12,3</u>	<u>14,9</u>
15.	<u>59,1</u>	<u>30,9</u>