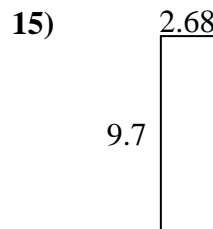
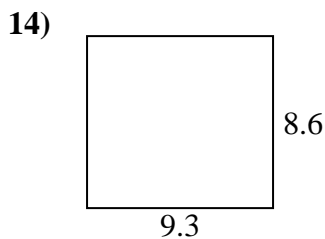
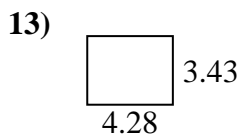
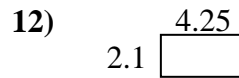
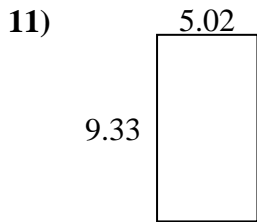
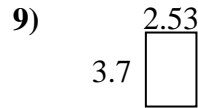
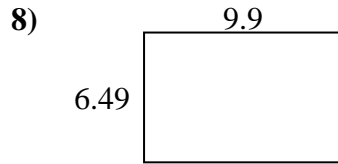
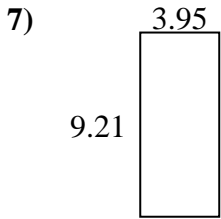
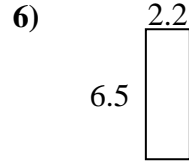
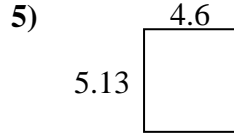
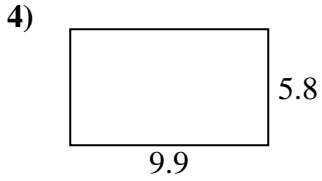
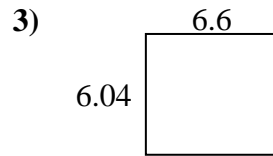
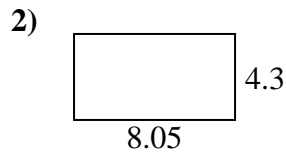
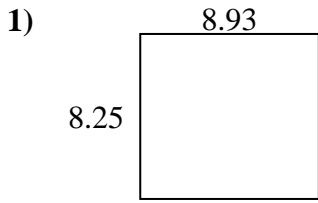




Trouvez le périmètre et l'aire de chaque figure. Répondez au dixième près.

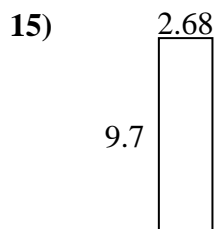
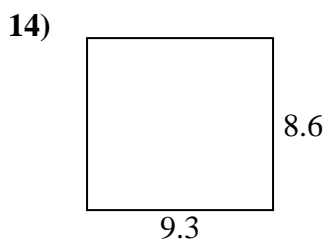
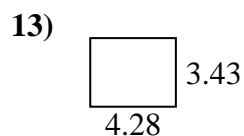
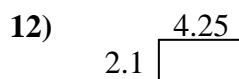
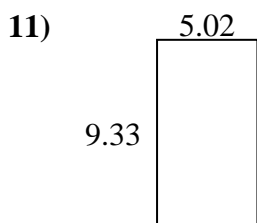
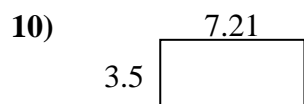
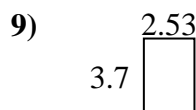
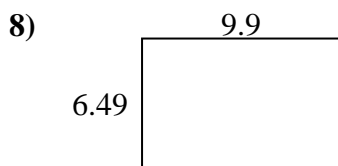
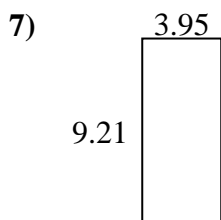
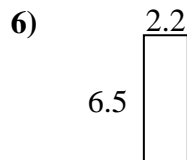
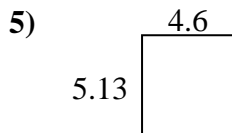
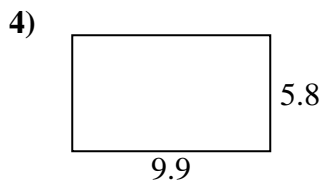
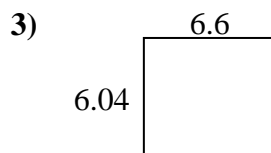
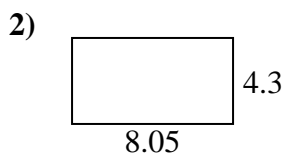
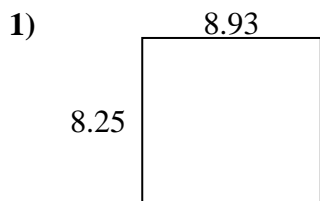


Réponses

1. _____
2. _____
3. _____
4. _____
5. _____
6. _____
7. _____
8. _____
9. _____
10. _____
11. _____
12. _____
13. _____
14. _____
15. _____



Trouvez le périmètre et l'aire de chaque figure. Répondez au dixième près.



Réponses

1.	<u>73,7</u>	<u>34,4</u>
2.	<u>34,6</u>	<u>24,7</u>
3.	<u>39,9</u>	<u>25,3</u>
4.	<u>57,4</u>	<u>31,4</u>
5.	<u>23,6</u>	<u>19,5</u>
6.	<u>14,3</u>	<u>17,4</u>
7.	<u>36,4</u>	<u>26,3</u>
8.	<u>64,3</u>	<u>32,8</u>
9.	<u>9,4</u>	<u>12,5</u>
10.	<u>25,2</u>	<u>21,4</u>
11.	<u>46,8</u>	<u>28,7</u>
12.	<u>8,9</u>	<u>12,7</u>
13.	<u>14,7</u>	<u>15,4</u>
14.	<u>80,0</u>	<u>35,8</u>
15.	<u>26,0</u>	<u>24,8</u>