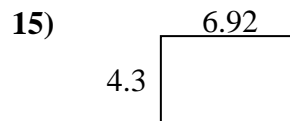
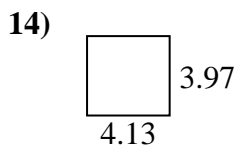
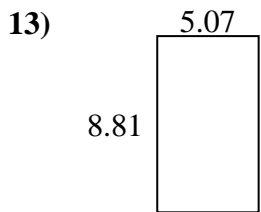
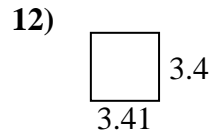
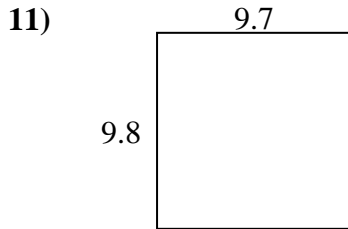
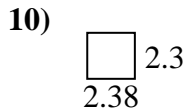
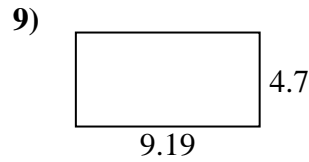
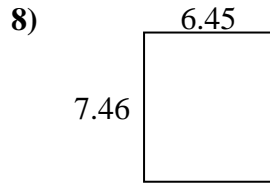
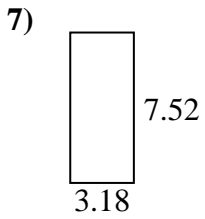
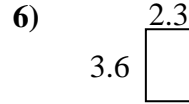
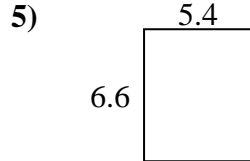
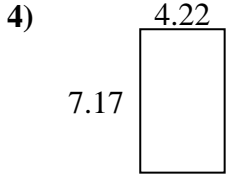
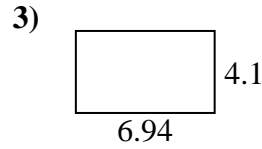
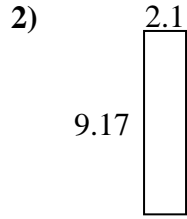
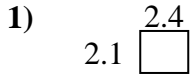




Trouvez le périmètre et l'aire de chaque figure. Répondez au dixième près.

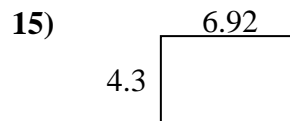
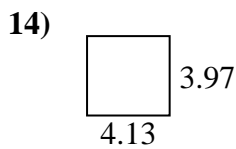
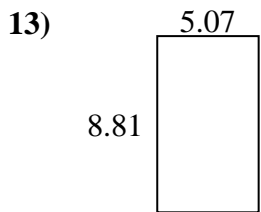
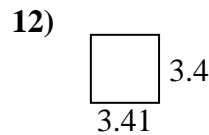
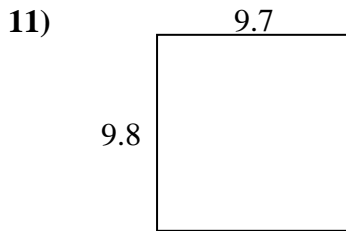
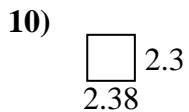
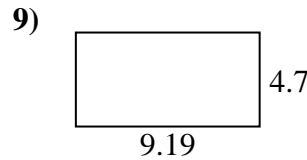
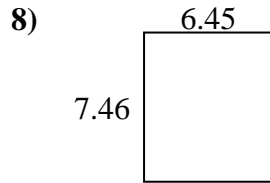
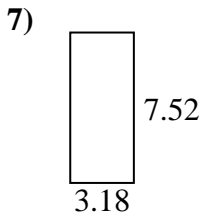
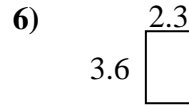
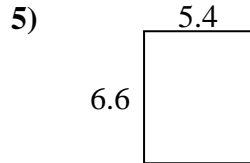
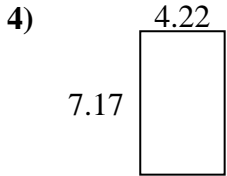
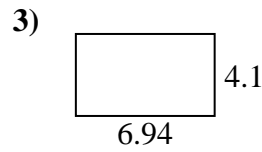
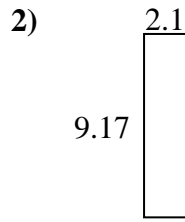
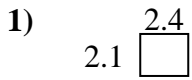


**Réponses**

1. \_\_\_\_\_
2. \_\_\_\_\_
3. \_\_\_\_\_
4. \_\_\_\_\_
5. \_\_\_\_\_
6. \_\_\_\_\_
7. \_\_\_\_\_
8. \_\_\_\_\_
9. \_\_\_\_\_
10. \_\_\_\_\_
11. \_\_\_\_\_
12. \_\_\_\_\_
13. \_\_\_\_\_
14. \_\_\_\_\_
15. \_\_\_\_\_



Trouvez le périmètre et l'aire de chaque figure. Répondez au dixième près.



**Réponses**

1.	<u>5,0</u>	<u>9,0</u>
2.	<u>19,3</u>	<u>22,5</u>
3.	<u>28,5</u>	<u>22,1</u>
4.	<u>30,3</u>	<u>22,8</u>
5.	<u>35,6</u>	<u>24,0</u>
6.	<u>8,3</u>	<u>11,8</u>
7.	<u>23,9</u>	<u>21,4</u>
8.	<u>48,1</u>	<u>27,8</u>
9.	<u>43,2</u>	<u>27,8</u>
10.	<u>5,5</u>	<u>9,4</u>
11.	<u>95,1</u>	<u>39,0</u>
12.	<u>11,6</u>	<u>13,6</u>
13.	<u>44,7</u>	<u>27,8</u>
14.	<u>16,4</u>	<u>16,2</u>
15.	<u>29,8</u>	<u>22,4</u>