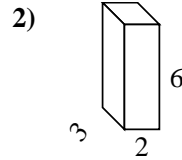
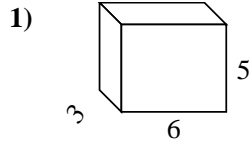
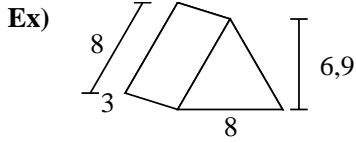




Calculez la surface de chaque figure géométrique. Les unités sont en cm.

Réponses



Ex. 127,2 cm²

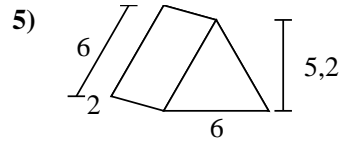
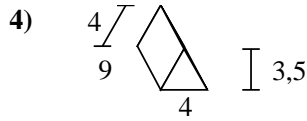
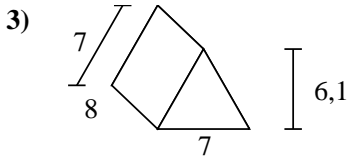
1. _____

2. _____

3. _____

4. _____

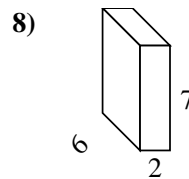
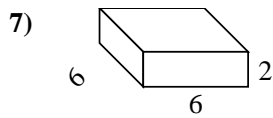
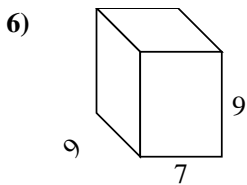
5. _____



6. _____

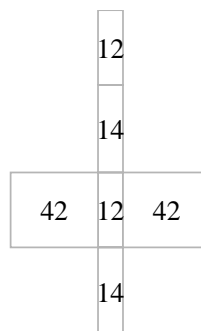
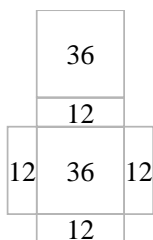
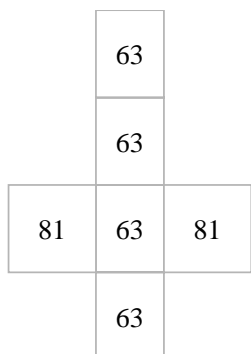
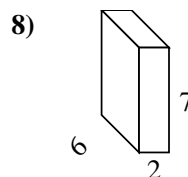
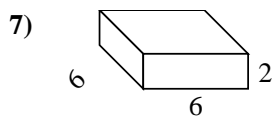
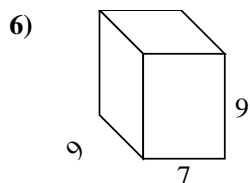
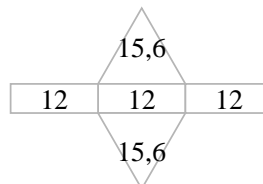
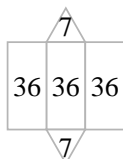
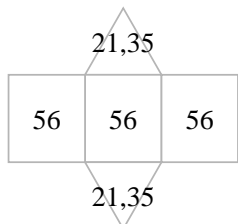
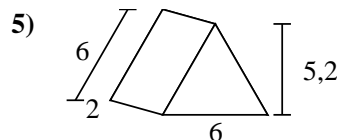
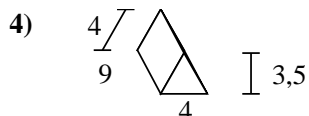
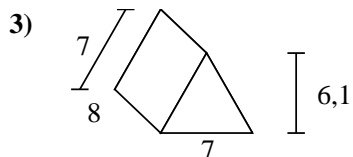
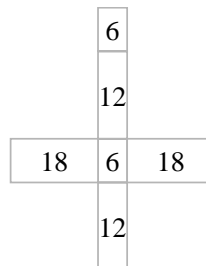
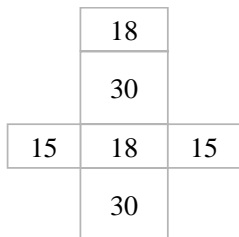
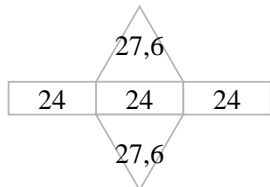
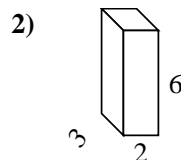
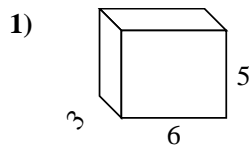
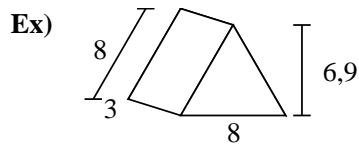
7. _____

8. _____





Calculez la surface de chaque figure géométrique. Les unités sont en cm.



Réponses

Ex. 127,2 cm²

1. 126 cm²

2. 72 cm²

3. 210,7 cm²

4. 122 cm²

5. 67,2 cm²

6. 414 cm²

7. 120 cm²

8. 136 cm²