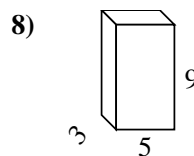
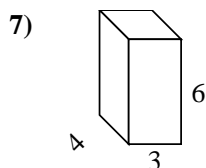
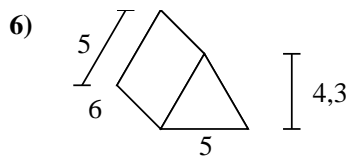
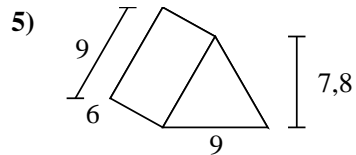
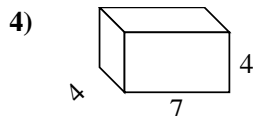
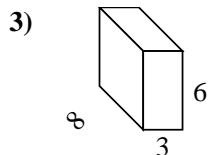
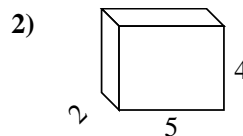
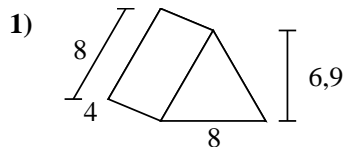
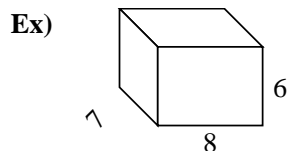




Calculez la surface de chaque figure géométrique. Les unités sont en cm.



**Réponses**

Ex. 292 cm<sup>2</sup>

1. \_\_\_\_\_

2. \_\_\_\_\_

3. \_\_\_\_\_

4. \_\_\_\_\_

5. \_\_\_\_\_

6. \_\_\_\_\_

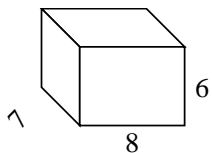
7. \_\_\_\_\_

8. \_\_\_\_\_

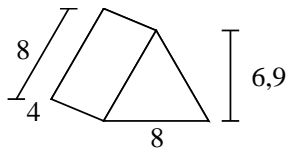


Calculez la surface de chaque figure géométrique. Les unités sont en cm.

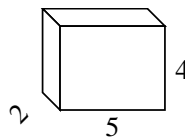
Ex)



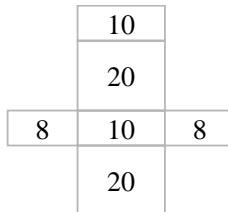
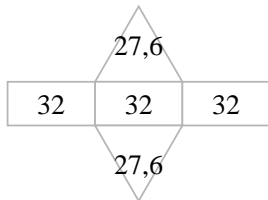
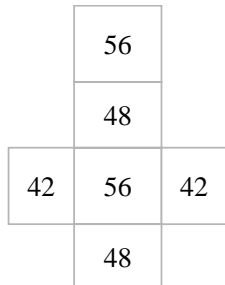
1)



2)



Ex.

**292 cm<sup>2</sup>**

1.

**151,2 cm<sup>2</sup>**

2.

**76 cm<sup>2</sup>**

3.

**180 cm<sup>2</sup>**

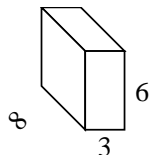
4.

**144 cm<sup>2</sup>**

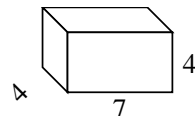
5.

**232,2 cm<sup>2</sup>**

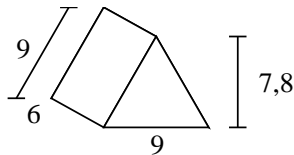
3)



4)



5)



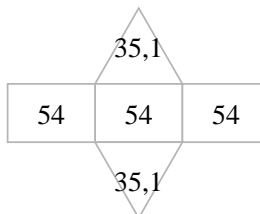
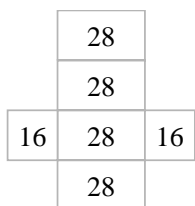
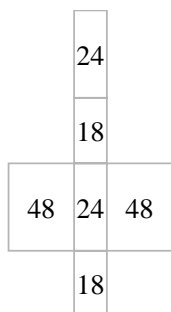
6.

**111,5 cm<sup>2</sup>**

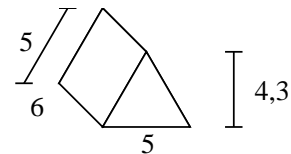
7.

**108 cm<sup>2</sup>**

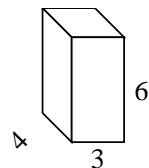
8.

**174 cm<sup>2</sup>**

6)



7)



8)

