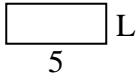




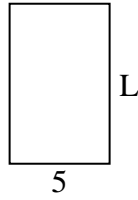
Déterminez la valeur de 'L'.

Réponses

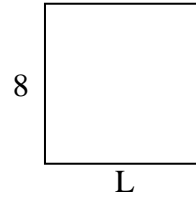
1) Aire = $10u^2$



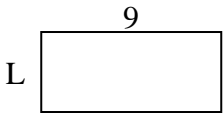
2) Aire = $40u^2$




3) Aire = $64u^2$



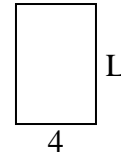
4) Aire = $36u^2$



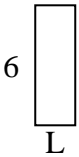
5) Aire = $12u^2$




6) Aire = $24u^2$



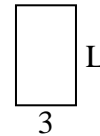
7) Aire = $12u^2$



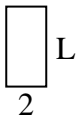
8) Aire = $20u^2$



9) Aire = $15u^2$



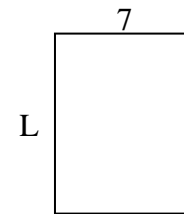
10) Aire = $8u^2$



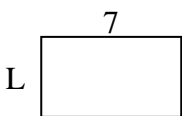
11) Aire = $10u^2$



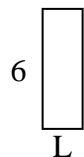
12) Aire = $63u^2$



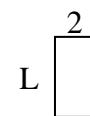
13) Aire = $28u^2$



14) Aire = $12u^2$



15) Aire = $8u^2$



1. _____

2. _____

3. _____

4. _____

5. _____

6. _____

7. _____

8. _____

9. _____

10. _____

11. _____

12. _____

13. _____

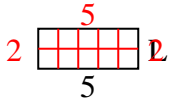
14. _____

15. _____

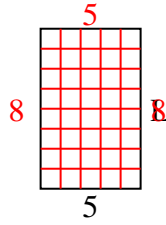


Déterminez la valeur de 'L'.

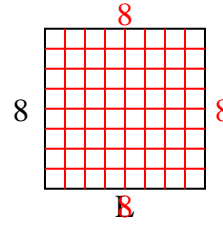
1) Aire = $10u^2$



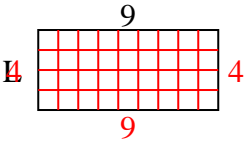
2) Aire = $40u^2$



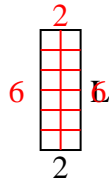
3) Aire = $64u^2$



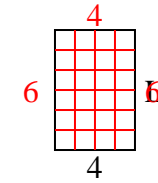
4) Aire = $36u^2$



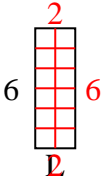
5) Aire = $12u^2$



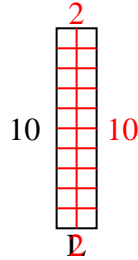
6) Aire = $24u^2$



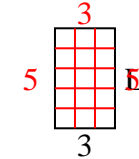
7) Aire = $12u^2$



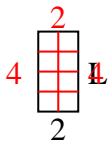
8) Aire = $20u^2$



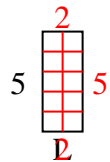
9) Aire = $15u^2$



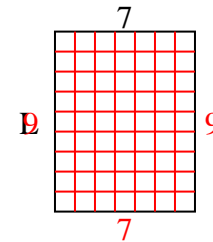
10) Aire = $8u^2$



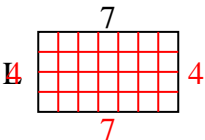
11) Aire = $10u^2$



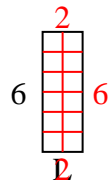
12) Aire = $63u^2$



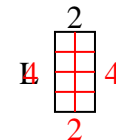
13) Aire = $28u^2$



14) Aire = $12u^2$



15) Aire = $8u^2$

**Réponses**1. 22. 83. 84. 45. 66. 67. 28. 29. 510. 411. 212. 913. 414. 215. 4