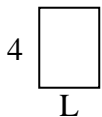




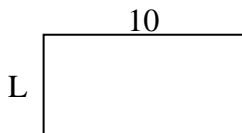
Déterminez la valeur de 'L'.

Réponses

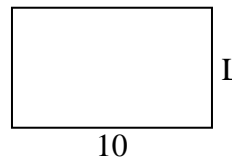
1) Aire = $12u^2$



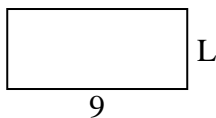
2) Aire = $50u^2$



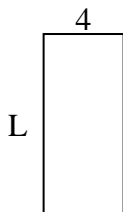
3) Aire = $60u^2$



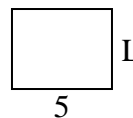
4) Aire = $36u^2$



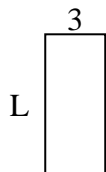
5) Aire = $36u^2$



6) Aire = $20u^2$



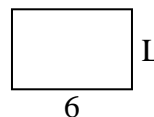
7) Aire = $21u^2$



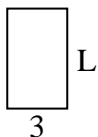
8) Aire = $21u^2$



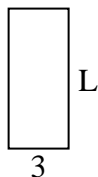
9) Aire = $24u^2$



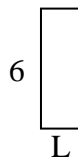
10) Aire = $15u^2$



11) Aire = $21u^2$



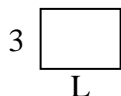
12) Aire = $12u^2$



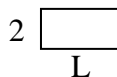
13) Aire = $6u^2$



14) Aire = $12u^2$



15) Aire = $8u^2$

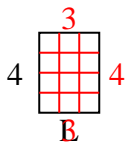


1. _____
2. _____
3. _____
4. _____
5. _____
6. _____
7. _____
8. _____
9. _____
10. _____
11. _____
12. _____
13. _____
14. _____
15. _____

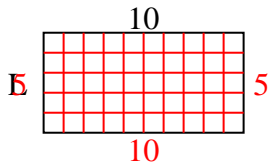


Déterminez la valeur de 'L'.

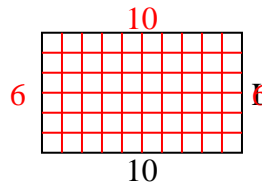
1) Aire = $12u^2$



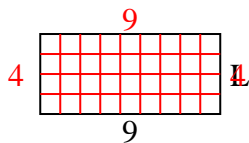
2) Aire = $50u^2$



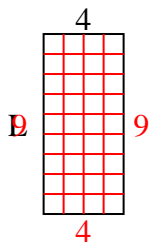
3) Aire = $60u^2$



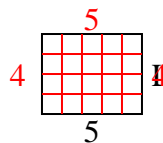
4) Aire = $36u^2$



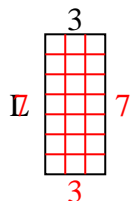
5) Aire = $36u^2$



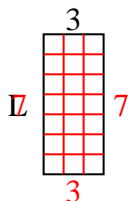
6) Aire = $20u^2$



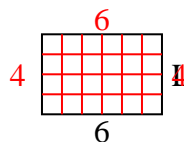
7) Aire = $21u^2$



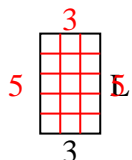
8) Aire = $21u^2$



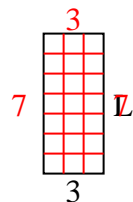
9) Aire = $24u^2$



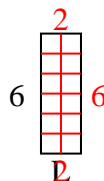
10) Aire = $15u^2$



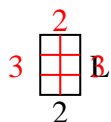
11) Aire = $21u^2$



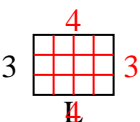
12) Aire = $12u^2$



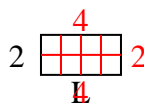
13) Aire = $6u^2$



14) Aire = $12u^2$



15) Aire = $8u^2$

**Réponses**1. 32. 53. 64. 45. 96. 47. 78. 79. 410. 511. 712. 213. 314. 415. 4